



Max Marks :80

Time allowed: 3 hrs

- I. Read all the questions carefully, then answer.
- II. Mark all the answers with their appropriate number.

Section-A

1. Read the following passage and answer the following questions: (8)

1. FOLLOWING the demonetisation drive in 2016, more people began using credit or debit cards to make payments. It is a move towards a cashless economy.
2. In a credit card transaction, the main players are the credit card user, the merchant (shopkeeper), the acquiring bank (merchant's bank which provides the credit card machine), the issuing bank that issues the card to the user and the card association (MasterCard/Visa).
3. Typically, a customer hands over his credit card to the shopkeeper to pay for the goods. The shopkeeper inserts the card in a machine that captures information stored in the card's magnetic strip like the card holder's name, card number, date of expiry of the card, etc. as well as details of the shopkeeper's establishment and transaction amount. The cardholder has to key in a Personal Identification Number (PIN) to complete the transaction. The PIN enhances the security of the card and prevents fraud. The information is transmitted to the card-issuing bank for authentication via a telephone line or wireless Internet. Once the transaction is verified, the machine prints two receipts, one for the merchant and the other for the buyer. All this processing takes only a few seconds.
4. When the shopkeeper submits his receipt to the acquiring bank, the bank pays him the due amount. The acquirer recovers the amount from the issuing bank which in turn sends the user a credit card statement. The user has to repay the amount to the issuing bank within a stipulated time or else a fine is imposed. The job of the card associations is to regulate transaction fees, memberships and mediate between issuing and acquiring banks.
5. In a debit card transaction, the amount gets immediately debited from the cardholder's bank account to which the card is linked.

1. Choose the correct option:

1. With increasing use of credit and debit cards, India is moving towards.
(a) cashless economy (b) demonetisation (c) uncertainty (d) no money economy
2. Which of the following has no role in credit card transactions?
(a) the card user (b) PIN (c) Goods (d) the merchant
3. The alphabet 'I', in PIN stands for.
(a) Interest (b) Identification (c) Indian (d) Issue
4. When the shopkeeper submits the receipt, the bank pays the amount to _____
(a) Shopkeeper (b) Receiving banks (c) Customer (d) Card association
5. Fine is imposed by the bank if the user..
(a) forgets his PIN (b) uses his card for payments
(c) does not repay in time (d) pays all dues regularly
6. The information is transmitted to the card-issuing bank for authentication via _____ .
(a) Receipts (b) telephone line (c) wireless internet (d) both (a) and (c)

2. Complete the following sentences:

- a. The shopkeeper inserts the card in a machine that captures information stored in the card's magnetic strip _____ .
- b. The user has to _____ or else a fine is imposed.

3. Answer the following questions:

- a. What happens when the shopkeeper submits the receipt to the acquiring bank?
- b. What is a move towards a cashless economy?
- c. What provides the security to the card and prevents fraud?

4. State whether True or False:

- a. A customer hands over the card to the bank for the goods he purchases.

2. Read the following passage and answer the questions:

(8)

EATING out can be a delightful experience but if you're going to a classy restaurant or a five-star hotel, don't be caught on the wrong foot, or with the wrong fork! Here are some basic rules:

1. Dress appropriately. A formal meal at a five-star hotel requires one to be attired in traditional or western clothes. No casual clothes please!
2. When you enter the restaurant, wait for the hostess to escort you to your table. There'll be a napkin on the table. Never tuck it under your chin. That's only for babies! Large napkins, also called serviettes can be half opened and placed neatly on the lap. Smaller ones can be opened fully and spread on the lap.
3. It is generally the host who places the order after finding out what everybody wants.
4. Drinks should be sipped and never gulped. But if you have bitten something pungent and spicy, go ahead and drink large quantities of water. If your drink has a stirrer with a cherry on top, eat the cherry, stir your drink and then place the stirrer on the side plate and not directly on the table.
5. On the table, you will find the forks placed on the left, spoons and knives on the right and cutlery for the sweet dish above the plate. Start from the outermost cutlery to the innermost.
6. Soup is eaten, never drunk. Fill the spoon with soup, moving the handle away from you, and drink it from the side facing you. To get the last bit of soup into your spoon, tilt the bowl away from you.
7. In case of club sandwiches, use either a fork and knife or eat with your fingers. To eat pasta, hold the fork in your right hand, roll the pasta around it, and while continuing the rolling action, put it in your mouth. Hold the spoon underneath.
8. When you have finished eating, place all the cutlery close together, either perpendicular to the edge of the table or at an angle towards the right. Face the fork and spoon upward.

10.1 On the basis of your understanding of the passage, complete the following statements suitably:

- I. _____ clothes should be avoided while going to dine at a five star hotel.
- II. Generally, it is the _____ who escorts you to the table at a good hotel.
- III. Large napkins should be opened _____ and placed on the lap.

2 State whether the following statements are True or False:

- I. Traditional dresses can be worn while dining at a good hotel.
- II. Tucking the napkin under the chin is meant for babies only.
- III. The host should not place the order.
- IV. Cherry on the drink should be eaten at the end.
- V. On the table, you will find the forks placed on the left.
- VI. You can drink soup, but you can't eat it.
- VII. Hold the fork in your left hand while eating pasta.
- VIII. Drinks should not be gulped.

3. Answer the following questions:

- a. Describe the cutlery settings on the table.

Section- B

(Writing Skill)

3. As per the rotation system in your class, you will be the next class monitor in the coming week. Mention how you will dispense your new duty and your plans for that in the form of a diary entry. **(5)**

Or

Your joy knew no boundaries when you saw your name on the notice board among those students selected for a dance drama to be presented at the school's annual function. Express through a diary entry how thankful you are to your Ma'am who had trained you and how much labour you are going to do to give your best.

4. Using the given stimulus, Write a short paragraph in about 80-100 words describing your 'Favourite TV program.'

Name of program-channel - days and timings - kind of program (serial /quiz show/ informative / reality show etc.)- host -special features of the program - reasons why you like it. **(6)**

Or

Study the following notes and write a short bio-sketch in 80-100 words.

LATA MANGESHKAR

Early Life	: 28 th September 1929 in Indore. - Father Dinanath Mangeshkar, a renowned classical singer - Lata introduced to music early - Father died at early age
Career	: Started acting in films at the age of 13. First song in Marathi film in 1942. Four major hit films- Barsaat, Andaaaz, Dulari, Mahal in 1949. Sang with Rafi, Kishore, Mukesh etc. Over 40,000 songs recorded- Guinness Book of World Records.
Awards & Honours	: Eight Filmfare Awards Highest civilian award 'Bharat Ratna'
Death	: 6 th February 2022 in Mumbai

5. You are George, a student of class 7th. In your P. A. 's, you scored well in all the subjects but your grades in English were very poor although you had worked hard. This has made your mother quite upset. Write a letter to her, explaining the cause of your poor performance and promise her to improve your grades in future.

Clues: *feeling sorry- problem in Grammar - poor basic concepts- trying to improve - seeking teacher's help - special assignments - one hour extra daily time to English- promise for better grades.* (6)

Or

Suppose you are Devika/ Dev, living at house no. 151, Hazaratganj, Lucknow. Write a letter to your friend Sulekha/ Ronit, inviting him/ her to your home during the autumn break.

Clues: *state how much you miss your friend - long time since you met - Autumn holidays - invite your friend to come - mention your program*

- *visiting famous places*
- *games*
- *will enjoy special lakkhawi foods*
emphasise your request.

(Grammar)

6. Do as directed:

(16)

(each question will carry 1 mark)

(i). Change the following sentence into Interrogative sentence:
She submitted her assignments yesterday.

(ii). Change the following sentence into Declarative sentence:
What a delicious food!

(iii) Separate the clauses and name them:

- We have no idea where the baby is.
- This is the boy who helped me.

(iv). Combine the two sentences into one. Use the connecting word given:
I shall give him your message. I see him. (whenever)

(v). Complete the following sentence by writing the words given in the correct order:
My father _____ (on/often/goes) business trips.

(vi). Complete the second sentence so that it means the same as the first sentences. Use the correct passive form:

- Devanshi is wearing a traditional dress.
A traditional dress _____ .
- She has provided all the details.
All the details _____ .

(vii). Complete the second sentence so that it means the same as the first sentences. Use reported speech:

- He said to me, "You have helped me a lot. "
He told me _____ him a lot.

(each question will carry ½ mark)

(viii). Read the following sentence and state whether the highlighted words are **phrase** or **clause**:

- Going out** on a bright day is fun.
- I want to visit Dalhousie **but I don't have enough money**.

(ix). Fill in the blanks with the **verbs agreed to the subject**:

- The colours of the rainbow _____ beautiful. (is/are)
- The dog, who is chewing on my jeans, _____ usually very good. (are/is)
- Four litres of oil _____ required to get the car running. (was/ were)
- Everybody _____ to be loved. (wants/want)

(x). Fill in the blanks:

- I don't think very _____ of that idea. (much/many)
- _____ people go to the South Pole for a holiday! (a little/a few)
- We don't need _____ more tomatoes. (some/ any)
- There's _____ gravy left if you would like some. (little/a little)

(xi). Choose correct connector:

- I would attend the party **although/so that/if** you invited me.
- He was both fined **or/and/because** imprisoned.
- She is not only a good speaker **but/ but also/ because** a good leader.

(xii). Fill in the correct form – Adjective or adverb:

- Robert is a very _____ person.(lazy)
- Nathan stamped his feet _____.(angry)

Section- C

7. Give meanings for the following words:

(6)

Table land, Twist, Coastline, Stash, Enormous, Narrow, Remarkable

8. Answer the following questions:

(2×5=10)

- What kind of feelings does the poet want to express in the poem 'Where the Mind is without Fear'?
- How does Bottom feel when Titania gives him her attention?
- What are the risks of living in coastal areas?
- How does the poet describe the Tyger?
- If the bird would not have picked up the carcass, what would be the fate of Sinbad then?
- Describe a falcon's hunting style?

9. Answer the following question:

(3)

Share an adventurous experience that you have experienced in your life. How did it make you feel?

Or

'Rabindranath Tagore' wants his countrymen to be free. What kind of freedom does he desire for his country? Write the answer in context with the poem 'Where the Mind is Without Fear'.

10. Do as directed:

(12)

(each question will carry 1 mark)

(i). Read the sentence and answer the given question:

" I walked down that valley, my heart beating rapidly and my knees trembling, when suddenly a carcass of an animal fell with a great noise before me."

How did the carcass of an animal fall in front of him?

(ii). Fill in the blanks. Identify what is being compared and how they are alike:

- Your bedroom is a fish market. (i) _____ (ii) _____
- Ramish is the Sachin Tendulkar of our class. (i) _____ (ii) _____

(iii). Write **M** for metaphors and **A** for alliterations in the following sentences:

- Radhika was the nightingale of the ninth class.
- Magnificent Maggie is the blossoming flower of the family.

(each question will carry ½ mark)

(iv). Choose the correct answer:

- From childhood, we are programmed to like _____ .
a) bitter flavour b) sweet flavour c) salty flavour d) sour flavour

- b. Taking something granted means...
 - A. not believing in something
 - B. thinking about something carefully
 - C. not paying much attention to something
 - D. not ignoring something

(v) Complete the following sentences using given hints:

touch, eye, ear, taste, tongue

- a. What is your mother _____ ? What languages do your parents speak to you?
- b. Do you have an eagle _____ and are you good at spotting things?

(vi) Choose the word or phrase that completes the sentence:

- a. After you make your decision, there is no _____ back.
 - a) seeking
 - b) taking
 - c) turning
 - d) falling
- b. I hadn't eaten all day and by dinner time, I was _____ for something to eat.
 - a) reckless
 - b) desperate
 - c) silent
 - d) tense

(vii) Read each statement and then, choose the correct meaning of the highlighted words:

- a. A kid might feel **homesick** if he is gone to *the cinema /summer camp*.
- b. If a band gets **a full house**, it shows that *lots of / a few* fans showed up to their concert.

(viii) Complete the following quiz. Use the answers below:

1.4 billion, Brazil, 95 million, Norway

- a. Over _____ Americans now live on the coast - an increase from *previous* years.
- b. Carnival is one of the most important National events in _____ and a big part of their cultural *heritage*.

(ix) Complete the sentences. Form an adjective with -y or -ly from the word in bold:

- a. The **cost** of living has been rising steadily. Everything has become extremely _____ .
- b. Sometimes new products have a design **fault**. If an item you purchase is _____, ask for a refund.

(x). Complete the following chart:

<i>Verb</i>	<i>Noun</i>	<i>Adjective</i>
fascinate	fascination	_____
_____	confirmation	confirmed

(xi). State whether True or False:

- a. Birds with dull feathers were scarce.
- b. The murmuring of the stream lulled Sindbad to sleep.
- c. Bottom asks Peaseblossom to scratch his head.



Time allowed: 3 hrs

M.M : 80

Section A

(1×20= 20)

- 1) Which of the following cannot be a rational number?
(a) $\frac{0}{5}$ (b) $\frac{0}{-5}$ (c) $\frac{5}{0}$ (d) -1
- 2) The result of numbers with exponent zero given that all the numbers are non zero is
(a) -1 (b) 0 (c) 1 (d) not defined
- 3) 0 is a rational number. (T/F)
- 4) Which of the following rational numbers is not equivalent to $\frac{3}{5}$?
(a) $\frac{6}{10}$ (b) $\frac{-3}{-5}$ (c) $\frac{9}{15}$ (d) $\frac{12}{24}$
- 5) Charge given on borrowed money is called
(a) principal (b) Interest (c) Amount (d) Profit
- 6) Selling price of an item is
(a) Profit + cost price (b) Cost price+ loss
(c) Cost price- profit (d) Loss – Cost price
- 7) If 60% of x is 1200, then the value of 'x' is
(a) 1000 (b) 2000 (c) 3000 (d) 4000
- 8) The difference between the greatest and least numbers of $\frac{5}{9}, \frac{1}{9}, \frac{11}{9}$ is
(a) $\frac{2}{9}$ (b) $\frac{4}{9}$ (c) $\frac{10}{9}$ (d) $\frac{2}{3}$
- 9) Perimeter of a semi circle is
(a) $\frac{1}{2} \pi r^2$ (b) $\pi r + d$ (c) πr (d) $3\pi r^2$
- 10) Given, a= 2, b= 0, c= -1, and d= -2 then the value of $\frac{a \times b \times c + d}{a \times c}$ is
(a) -1 (b) 2 (c) -2 (d) ;0
- 11) The perimeter of a square is 48 cm. Its area is
(a) 144 cm² (b) 12 cm² (c) 48 cm² (d) 100 cm²
- 12) The area of a circle with diameter d is πd^2 . (T/F)
- 13) Coefficient of x in 7x+3 is 7 . (T/F)

- 14) The value of the expression $\frac{5}{3}x^2 + 2$ when $x = -3$ is -13. (T/F)
- 15) $(-a)^n = a^n$, if n is an odd number. (T/F)
- 16) The exponential form of 343 is _____.
- 17) Name the algebraic expression which contains three terms.
- 18) The expression $7x - 5(x^2 + y^2)$ is a.....Expression.
- 19) The product of 5^3 and 5^{-2} is.....
- 20) The scientific notation of the distance of Venus from Sun is 108200000000 km is.....

Section - B

(2×8=16)

- 21) Write any four rational number lying between $-\frac{3}{4}$ and $\frac{4}{3}$.
- 22) Sareana purchased an electric iron for ₹750 and sold it for ₹700. Find her profit or loss.
- 23) Find the whole quantity if 14% of it is 14 minutes.
- 24) If the radius of a circle is tripled by how many times will the area increase.

Or

Find the circumference of a circular object of diameter 20 cm. (use $\pi = 3.14$)

- 25) Saima wants to put a lace on the edge of a circular table cover of diameter 1.5 m. Find the length of the lace required?
- 26) What should be the value of a , if the value of $2x^2 + x - a$ equal to 5, when $x = 0$?
- 27) Simplify $(3^0 + 3^0 + 1^0) \times 4^0$

Or

Write $9 \times 9 \times 9$ taking 3 as the base.

- 28) Express 39,087.8 in standard form

Section - C

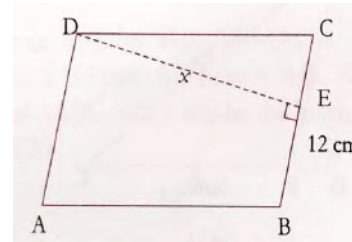
(3×8= 24)

- 29) Are $\frac{-4}{24}$ and $\frac{12}{-72}$ equal?
- 30) Divide $\frac{-5}{13}$ and $\frac{10}{39}$
- 31) ₹7000 borrowed at 3.5% rate of interest per annum for 2 years. Find the amount to be paid at the end of second year.
- 32) A circular flower bed is surrounded by a path 4 m wide. The diameter of the flower bed is 66 m. Find the area of path (take $\pi = 3.14$)

Or

A wire is in the shape of a rectangle. Its length and breadth are 32 cm and 12 cm respectively. It is bent into the shape of a circle. Find the radius of the circle.

- 33) In the given figure, the area of a parallelogram ABCD is 54 cm^2 . If one of the side is 12 cm, find its height corresponding to the given base.



- 34) For $m = 2$ Find the value of $3m^2 - 2m - 7$
- 35) Simplify $\frac{7^5 \times 7^7}{5^3 \times 21}$

Or

Simplify $(-2)^3 \times (-10)^3$

Section- D

(5×4= 20)

- 36) The maximum marks for an examination are 500. A candidate has to secure 40% marks to pass the examination. If the candidate failed by 25 marks, find the total marks scored by him.
- 37) A circle of radius 2 cm is cut from a square piece of an aluminium sheet of side 6 cm. What is the area of the left over aluminium sheet ($\pi = 3.14$)

Or

A gardener wants to fence a circular garden of diameter 21 m. Find the length of the rope he needs to purchase if it makes 2 rounds of fence. Also, find the cost of rope, if it costs ₹4 per metre. (Take $\pi = 22/7$)

- 38) Simplify the expression and find its value when $x = -3$ and $y = 5$ in $2(x^2 + 2xy) + 5 - xy + y^2$

- 39) Simplify : $\frac{25 \times 125 \times t^7}{10^5 \times t^2}$

Or

Find x if $\left(\frac{3}{7}\right) \div \left(\frac{3}{11}\right) = \left(\frac{3}{11}\right)$



Bhagwan Mahaveer Public Sr. Sec. School, Banga

Subject: SCIENCE TERM - II

Class - VII [RS]

Max Marks :80

Time allowed: 3 hrs

SECTION A		(1x20=20)
MCQ		
1.	Which of the following is example of Synthetic fibre a) Nylon b) Jute c) Cotton d) Silk	1
2.	Maximum temperature in a day is reached a) During Morning b) during Afternoon c) during Evening d) during Night	1
3.	Which of the following is fastest mode of heat transfer a) Conduction b) Convection c) Radiation d) none of these	1
4.	Which one of the following processes removes unwanted foreign particles from the inhaled air? a) hiccups b) sneezing c) yawning d) coughing	1
5.	Which of following is not asexual mode of reproduction a) Gamete formation b) Spore formation c) Budding d) Fragmentation	1
6.	Which of following is correctly matched pairs? a) Fragmentation – Spirogyra b) Budding – Mosses c) Fragmentation – Ferns d) Spore formation – yeast	1
7.	Reason for spark in socket may be a) Earthing b) Overloading c) Short circuiting d) None of these	1
8.	During Short circuiting, resistance of circuit a) Increases b) Decreases c) Remains constant d) None of these	1
Fill in the blanks :		
1. Country leads World in Silk production	1
2.	SI unit of temperature is	1
3.	Laboratory Thermometer range is	1
4.	Average weather taken over a long period is called	1
5.	Relative humidity is measured with	1
6. is female reproductive part of flower	1
7.	Electric Bell is based on..... Effect of Current	1
8.	Cramps in body after heavy exercise occurs due to formation of acid	1
True False :		
1.	Penguin has streamlined shape (T/F)	1
2.	Elephant has strong sense of smell (T/F)	1
3.	Asexual reproduction involves formation of gametes (T/F)	1
4.	Bulb filament is made from copper (T/F)	1
SECTION B		(1x10=10)
1 Mark question {Do any 10}		
1.	Name the strongest Natural Fibre	1
2.	Name three modes of heat transfer	1
3.	What is range of clinical thermometer	1
4.	Name any animal that has sticky pads on its feet	1
5.	Name the instrument used to measure maximum and minimum	1

	temperature	
6.	What happens to diaphragm during exhalation and inhalation	1
7.	Name a respiration process that occurs without oxygen	1
8.	Name two plants that are produced by sexual mode of reproduction	1
9.	Name a material that is used to make heating element of heater	1
10.	Draw a neat labelled sketch of Electromagnet	1
11.	Name any two animals that live in Tropical rainforests	1
SECTION C		(8X2=16)
2 Mark question {Do any 8}		
1.	Why are animal activists against Silk production?	2
2.	List two precautions to be taken while reading a clinical thermometer	2
3.	Why are firefighting suits always bright and shiny?	2
4.	Draw a neat labelled sketch of stamen	2
5.	Draw symbols for battery, resistance, switch in on position, switch in off position	2
6.	Write a brief note on relative humidity	2
7.	What is dispersal of seeds? Name two agents causing this dispersal.	2
8.	State two difference between Photosynthesis & Respiration.	2
9.	What is Solenoid ? How do you increase the Strength of a Solenoid ?	2
SECTION D		(6x3=18)
3 Mark question {Do any 6}		
1.	Give reasons for each of the following a } Cooking Utensils are made of Metals b } Pressure Cookers are provided with a bakelite handle c} Gaps are left between two sections of Railway Track	3
2.	Enlist three differences between sexual and asexual mode of reproduction	3
3.	Draw a neat well labelled sketch of Thermos Flask,	3
4.	Differentiate between weather and climate. Name some of the weather elements	3
5.	You are going to Dal Lake with family during holidays. Which type of clothes would you carry and why?	3
6.	Differentiate between electromagnet and a permanent magnet	3
7.	Draw a neat sketch of open and closed circuit Name three effects of current and briefly explain any one	3
SECTION E		(4x4=16)
4 Mark question {Do any 4}		
1.	Draw a neat well labelled sketch of Electric bell	4
2.	With help of flowchart; show how exchange of gases takes place in lungs?	4
3.	How does hair of sheep protect it from cold weather. Name some of the natural and synthetic fibres	4
4.	What is germination of seeds? What are the necessary conditions for germination of seeds?	4
5.	What is Overloading ? Why is a Fuse wire necessary in a Circuit? How does it work?	4

8. Answer the following 7 out of 8 questions.

(2 marks each)

(14 marks)

- 1) Distinguish between warm ocean currents and cold ocean currents.
- 2) Describe the flora and fauna of Ladhak.
- 3) What type of clothes the people of sahara desert wear?
- 4) What were the teachings of the saints of Maharashtra?
- 5) Who were pirs? Explain.
- 6) What are hagiographies?
- 7) What changes were brought about in the Indian society in the 19th century?
- 8) Media plays an important role in reforming the society. How?

9. Answer the following 5 out of 6 questions

(3 marks each)

(15 marks)

- 1) Discuss the responsibilities of media towards the country and society.
- 2) Describe the various aspects of the women's movement.
- 3) Trace the development of Kathak as a classical dance form.
- 4) What were the Major teachings of Baba Guru Nanak ji?
- 5) Describe the hydrological cycle.
- 6) Give a broad comparison between Ladakh and sahara on the basis of climate,vegetation,life of the people etc.

10. Case study based questions (1 mark each) (3 marks)

Read the passage given below and answer that follow

Under the mughal emperors and their nobles. kathak was performed in the court ,where it acquired its present features and developed into a form of dance with distinctive style. Subsequently, it developed in two traditions or *gharanas* .one in the courts of Rajasthan and other in Lucknow.Under the patronage of wajid ali shah ,the last Nawab of Awadh ,it grew into a mojour art form .By the third quarter of nineteenth century it was firmly entrenched in a dance form not only in these two regions, but in adjoining areas.



Bhagwan Mahaveer Public Sr. Sec. School, Banga

Subject: Social Science TERM - II

Class - VII [RS]

M.M—80

1. Choose the correct option (1 mark each) (10 marks)

- 1) Tsunami means :-
a) Terrarium b) Harbour waves c) ocean d) low t
- 2) Kolkata is an important port on the river :-
a) Hooghly b) Ganga c) Brahmaputra d) N
- 3) The Ladakh desert is mainly inhabited by :-
a) Christians and Muslims b) Buddhists and Mus.
c) Christians and Buddhists d) Hindus and Muslim
- 4) Who wrote Sultana's Dream :-
a) Ramabai b) Rashsundari devi
c) Rokeya hossain d) none of the above
- 5) Who invented television:-
a) John berring b) Gutenberg c) J.L Hayden d) J.L B
- 6) Things are sold cheapest in :-
a) weekly markets b) Malls
c) Neighbourhood Shops d) market complexes.
- 7) Which of these women set up a mission in Khedgaon to educate and train women.
a) Ramabai b) Rokeya Hossain
c) Rashsundari Devi d) none of these
- 8) Advaita means:-
a) Divya Prabandham b) ultimate reality
c) untouchable d) idol worship

- 9) Rasa Lila were :-
a) Dance forms b) Ballads c) Folk plays d) Fairy tales

- 10) Nadir shah plundered Delhi in
a) 1748 b) 1752 c) 1739 d) 1761

2. State whether the following are true or false (1 marks each) (6 marks)

- 1) In Punjab, the khokhar tribe was very influential.
- 2) Miniatures are large-paintings.
- 3) International Women's day is celebrated on 10th March every year.
- 4) Media always provides balanced information .
- 5) Scientists have actually found skeletons of fish in sahara desert.
- 6) The density of population of plains is very high.

3. Fill in the blanks (1 mark each) (6 marks)

- 1) The finest cricket bats are made up of woods of _____ trees.
- 2) The first indication that Tsunami is approaching is the rapid _____ of water from the coastal region.
- 3) Media sets the _____.
- 4) Chain of markets -wholesaler->retailer->_____.
- 5) Ahmad shah Abdali invaded India _____ times
- 6) The other word for maya is _____.

4. Match the following words (1 mark each) (6 marks each)

- | | |
|----------------------|--------------------------|
| 1) Gond | a) Lucknow |
| 2) Hagiography | b) shifting cultivation |
| 3) Rashesundari Devi | c) sets agenda |
| 4) Media | d) Amar jiban |
| 5) Willow | e) Religious biographies |
| 6) Imambara | f) cricket Bat |
| | g) Assam |

5. Put a cross against the wrong statement (1 mark)

- a) The sun's heat causes evaporation of water vapours.
- b) Our earth is like a terrarium
- c) The water of oceans is not salty
- d) Three-fourth of the earth is covered by water

6. Assertion -Reason type question (1mark)

In the given below question there are no statements marked as Assertion(A) and Reason(R) read the statements and choose the correct option

- a) both assertion and reason are correct and reason is correct explanation of assertion
- b) Both assertion and reason are correct, but reason is not correct explanation of assertion
- c) Assertion is true but reason is false
- d) Assertion is falls but reason is true

Assertion(A) : shops in neighbourhood are useful in many ways

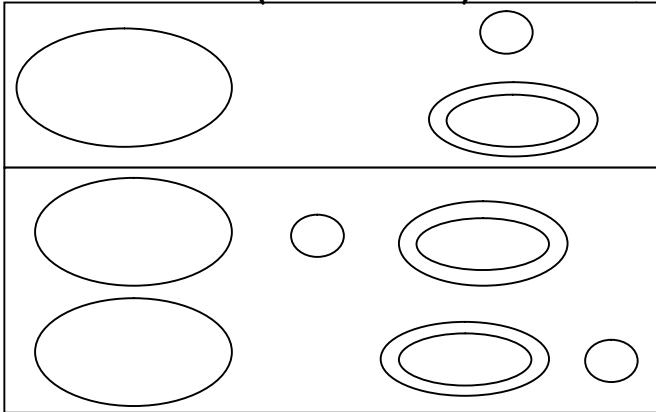
Reason(R). : They are near our home and we can go there any day of the week.

7. Answer the following questions (1marks each) (10marks)

- 1) Name the story by written Rokeya Hossain?
- 2) Define – censorship.
- 3) Who invented television?
- 4) In which year the law was passed for giving legal protection to women from domestic violence
- 5) Define - ocean currents
- 6) Kolkata is an important port on which river?
- 7) Name any 2 trees that grow in Ladakh?
- 8) How many villages made a chaurasi?
- 9) What was Present day Rajasthan called by the British?
- 10) Which 2 towns became important trading centres in the areas dominated by the jats ?

- 1) Which dance form developed under the Mughals?
a) Kathakali b) kathak c) kuchipudi d) Bharatanatyam
- 2) Who was the greatest patron of Kathak?
a) Akbar b) Mughal elite c) wajid Ali shah d) Bahadur shah II
- 3) Which was not one of the Gharanas of Kathak?
a) Jaipur b) Lucknow c) Patna d) none of these

11. Do as directed (1 mark each) (3 marks)



- 1) What do the diagram A and B represent?
a. _____ b. _____
- 2) Identify the animal
c. _____

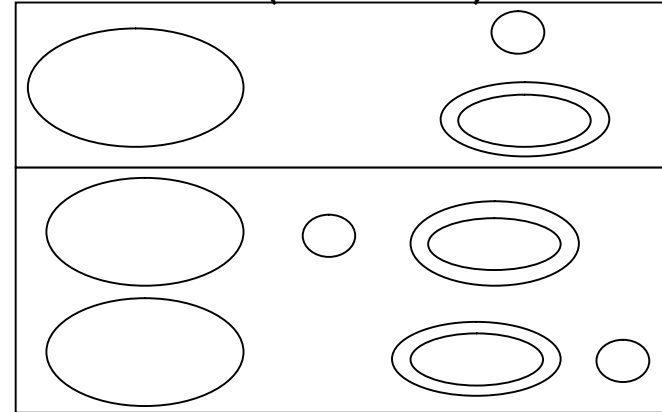


12. Mark on political map any 5 out of 6 (1 mark each) (5 marks)

- 1) Kolis
- 2) Dadu
- 3) Khond
- 4) Ramanuja
- 5) Bengal
- 6) Koyas

- 1) Which dance form developed under the Mughals?
a) Kathakali b) kathak c) kuchipudi d) Bharatanat
- 2) Who was the greatest patron of Kathak?
a) Akbar b) Mughal elite c) wajid Ali shah d) Bahadur s
- 3) Which was not one of the Gharanas of Kathak?
a) Jaipur b) Lucknow c) Patna d) none of the

11. Do as directed (1 mark each) (3 marks)



- 1) What do the diagram A and B represent?
a. _____ b. _____
- 2) Identify the animal
c. _____



12. Mark on political map any 5 out of 6 (1 mark each) (5 marks)

- 1) Kolis
- 2) Dadu
- 3) Khond
- 4) Ramanuja
- 5) Bengal
- 6) Koyas

8. Name the place where we can code the components added in the Design Window and instruct them the actions to be performed by them.
9. Name the SDG which focuses on the well-being and good health for all.
10. Name the SDG which ensure equal opportunities and end discrimination by eliminating discriminatory laws, policies and practices.

Q7. Short Question Answers: 2X7=14

1. Explain Pie Chart.
2. What is the use of Custom Sort?
3. What do you understand by Social networking?
4. Define Podcasting.
5. What is the use of Backpack?
6. How AI can be used in clean water and sanitation?
7. How AI can be used in Gender equality under SDG5?

Q7. Long Question Answers: (Do any 5) 3X5=15

1. What are the difference between line chart and XY scatter chart.
2. Write the steps to apply conditional formatting.
3. Write any three risks involved with Cloud computing.
4. Briefly explain any three types of apps with examples.
5. What is the aim of SDG 4?
6. What is the aim of SDG 14?



Q1. MCQ:

1. _____ Labels includes data values, category name, etc.
 - i. Information
 - ii. Data
 - iii. Axis
 - iv. Chart
2. _____ is not a category used in conditional formatting.
 - i. Data Bars
 - ii. A to Z
 - iii. Top/Bottom Rules
 - iv. Icon Sets
3. The _____ option is used to remove conditional formatting.
 - i. New Rule
 - ii. Clear Rules
 - iii. Remove Rules
 - iv. Delete Rules
4. Which of the following is known as platform dependent?
 - i. Native apps
 - ii. Hybrid apps
 - iii. Web apps
 - iv. None of these
5. _____ is a cloud storage service provider.
 - i. OneDrive
 - ii. Gmail
 - iii. Facebook
 - iv. None of these
6. By which year does the SDG 2 aims to end hunger?
 - i. 2025
 - ii. 2030
 - iii. 2035
 - iv. 3030
7. Which of the following SDG targets to prevent and reduce marine pollution, protect marine and coastal ecosystems, regulate harvesting and end destructive fishing practices?
 - i. SDG 13
 - ii. SDG 14
 - iii. SDG 1
 - iv. None of these

Q2. Fill in the blanks:

1X7=7

1. _____ is used to draw comparison and analyse the growth and trends among the values in a table.
2. _____ chart is used to display the quantitative magnitude of the data graphically.
3. When we apply filter feature, small arrows appear near _____.

4. _____ is a collection of web feeds which could be headlines, videos etc.
5. The process of making digital recordings (audio or video) that are available for downloading is called _____.
6. All apps in the Google Play Store are verified and certified by _____.
7. AI can be a vital _____ for the global community to achieve the targets of the United Nations Sustainable Development Goals.

Q3. True/False: 1X7=7

1. Data bars option is selected when you want to add data bars to the cells having numeric data.
2. The Add Level button is available under the Insert tab.
3. The Process of writing blogs is called Blogger.
4. You cannot promote business ideas or marketing on Quora.
5. Web application program is stored on remote server and accessed over the internet through a Web browser interface.
6. All apps in the App store and certified by Google.
7. SDG 2 aims to end hunger issues and ensure access to nutritious food for all children.

Q4. Application based question: 1.5X4=6

1. Suman wants to present the information in the form of a chart. She has a data of single series and the graph must show relative circular size of each value. Which chart type must she use?
2. John has prepared a list of students with their marks obtained in exams. He wants to separate unwanted data from a range of data. Suggest him a feature of Excel which helps him doing his work quickly.
3. Rihan is working on a group project on the Solar system with Deepak. It is difficult for them to share and edit the

files and keep a check on work as they are staying quite far from each other. Can you suggest some options for them so that they can share the files and complete their project on time without wasting time on travelling?

4. Rehana wants to create an app combining the features of native app and web app. Which app will she make?

Q5. Full Forms: (Do any 7) 1X7=7

- | | | | |
|---------|--------|--------|--------|
| 1. OTP | 2. COD | 3. PSP | 4. RSS |
| 5. SDGs | 6. URL | 7. CSS | 8. CVV |

Q6. Shortcut Keys: (Do any 7) 1X7=7

1. To create a new workbook
2. To close the current workbook
3. To move to the previous sheet
4. To move to the previous cell
5. Opens the Print Preview Window
6. Maximize or Restore Selected Workbook Window
7. Switches to the last tab
8. Select the address bar

Q7. Very Short Question: 1X10=10

1. What is an effective way to display data in a pictorial form?
2. Which chart shows the correlation between two sets of values.
3. Which area contains the actual chart and its components?
4. Which group of the Home tab contains the Sort & filter command.
5. In which year the first VoIP service was developed?
6. In which year twitter was launched?
7. Name the two main types of application.

- (iii) गांधीजी मीराबेन -----पुत्री मानते थे।
(iv) गांधीजी दाएं हाथ ----- लिखने लगे थे।

VI- व्यावहारिक व्याकरण: कोई छः भाग करो। (2×6=12)

क- वाक्यांश के लिए एक शब्द लिखिए।

- (i) जिसके आने की तिथि न हो। (ii) बिना विचारे किया गया विश्वास

ख-निम्नलिखित वाक्यों को शुद्ध करके लिखिए (2)

- (i) वह पागल आदमी हो गया। (ii) कृपया एक फूलों की माला ला दीजिए।

ग-नीचे दिए गए शब्दों के विशेषण बताइए (2)

- (i) कुछ लड़के पार्क में खेल रहे हैं (ii) सब्जी में बहुत नमक है।

घ-निम्नलिखित अनेकार्थी शब्दों के दो दो अर्थ बताइए।

- (i) पत्र (ii) फल

ङ-निम्नलिखित शब्दों का समास विग्रह करके उनके भेद लिखिए।

- (i) नवरत्न (ii) सिरदर्द

च - निम्न रेखांकित वाक्यों में क्रिया विशेषण का भेद बताइए।

- (i) चोर आसपास छिपा है। (ii) वह अचानक आ गया।

छ - विलोम शब्द लिखिए

- (i) अमृत (ii) अनुज

VII- निम्नलिखित लोकोक्तियों के अर्थ लिखकर वाक्य प्रयोग करें। (2×2=4)

- (i) अकेला चना भाड़ नहीं फोड़ सकता (ii) उलटा चोर कोतवाल को डांटे
(iii) एक अनार सौ बीमार

VIII. रचनात्मक लेखन (20)

प्रश्न 8. किसी एक विषय पर औपचारिक पत्र लिखिए:

चुनाव प्रचार में शहर के दीवारों पर लिखने, पोस्टर चिपकाने की वजह से दीवारों की हालत बड़ी अजीब हो गई है और शहर गंदा दिख रहा है इस समस्या के समाधान हेतु दैनिक समाचार पत्र के संपादक को पत्र लिखें। (5)

या

आपसे गलती से विद्यालय के परिसर में रखा गमला टूट गया और आपकी कक्षा अध्यापिका ने आपको ₹500 जुर्माना कर दिया। अपनी गलती को स्वीकार करते हुए तथा घर की आर्थिक दशा बताते हुए जुर्माना माफ करवाने की प्रार्थना करते हुए प्रधानाचार्य को प्रार्थना पत्र लिखें।

9. किसी एक विषय पर अनुच्छेद लिखें: (6)

जीवन में खेलों का महत्व



भगवान महावीर पब्लिक सीनियर सेकेंडरी स्कूल बंगा
कक्षा- सातवीं [रणजीत सिंह] कुल अंक:80
विषय- हिंदी

I-अपठित गद्यांश को पढ़कर पूछे गए प्रश्नों के उत्तर दीजिए।

जीवन के अंधकार में पुस्तकें प्रकाशित होती हैं। पुस्तकें हमारी अभिन्न मित्र हैं। जहाँ बहुत पुस्तकें एकत्रित करके रखी जाती हैं, उसे पुस्तकालय कहा जाता है। यानी पुस्तकों का घ पुस्तकालय में पुस्तकें विषयवार क्रम से रखी जाती हैं। प्रत्येक विद्यालय में पुस्तकालय हो जहाँ से शिक्षक व विद्यार्थी पुस्तकें लेकर अपना ज्ञान बढ़ाते हैं। पुस्तकों में दुनिया भर का छिपा है। पुस्तकालय में शांत वातावरण होता है और वहाँ एकाग्रता से पढ़ाई होती है। प्रत्येक शहर में सरकार की ओर से पुस्तकालय का प्रबंध होता है। पुस्तकें जेब में रखा बगीचा है अनेक पुस्तकें रखी हों, वह स्थान तो और भी महत्वपूर्ण हो जाता है।

1. पुस्तकों में क्या छिपा है ?
2. पुस्तकालय में पुस्तकें कैसे रखी जाती हैं ?
3. पुस्तकालय किसे कहा जाता है ?
4. पुस्तकालय का वातावरण कैसा होता है ?
5. पुस्तक किसके समान हैं ?

2-निम्नलिखित गद्यांश को पढ़कर बहुविकल्पीय प्रश्नों के उत्तर दीजिए

परंपराएँ, प्रथाएँ या रीति रिवाज मानव सभ्यता का अंग हैं। इन सभी के मूल में कोई न को भावना या उद्देश्य अवश्य रहता है, पर जब उसके साथ स्वार्थ का भाव जुड़ जाता है, तो ये बुराई बन जाती हैं। दहेज प्रथा का आरंभ भी अत्यंत पवित्र तथा स्नेहमयी भावना से हुआ था। कन्या के विवाह के समय अपनी पुत्री के प्रति अपना स्नेह प्रदर्शित करने तथा उसके भावी जीवन सुखी बनाने के उद्देश्य से भेंट स्वरूप कुछ वस्तुएँ दी जाती थीं। विवाहित जीवन के प्रारंभ में प्रकार के उपहारों का दिया जाना अत्यंत शुभ तथा मंगलकारी माना जाता था क्योंकि विव समय कन्या को खाली हाथ पति-गृह भेजना अपशकुन माना जाता था। धीरे-धीरे इस पवित्र स्नेह भावना का स्थान सौदेबाजी, लेन-देन, स्वार्थ तथा लालच ने ले लिया तथा यही दहेज प्रथा अभिशाप बन गई।

1. परंपराएँ या प्रथाएँ बुराई कब बन जाती है?

- (क) जब उनके साथ स्वार्थ का भाव जुड़ जाता है
(ख) जब उन्हें बदलने की कोशिश की जाती है
(ग) जब उन्हें समझना मुश्किल हो
(घ) उपरोक्त कोई नहीं।

2. दहेज प्रथा का प्रारंभ किस रूप में हुआ था?

- (क) स्नेह प्रदर्शित करने के रूप में (ख) अत्यंत पवित्र तथा स्नेहमयी भावना से
(ग) जीवन को सुखी बनाने के रूप में

(घ) उपरोक्त सभी।

3. प्रारंभ में कन्या के विवाह के अवसर पर उपहारों का दिया जाना शुभ क्यों माना जाता था?

(क) सौदेबाजी और लेन-देन के लिए

(ख) विवाह के समय कन्या को खाली हाथ-पतिगृह भेजना अपशकुन माना जाता था

(ग) दहेज प्रथा के कारण

(घ) उपरोक्त सभी।

4. अब दहेज प्रथा किस प्रकार अभिशाप बन गई है?

(क) सौदेबाजी, लेन-देन, स्वार्थ तथा लालच के कारण

(ख) भेंट स्वरूप कुछ वस्तुएँ देने के कारण

(ग) तरह-तरह के उपहारों के कारण

(घ) उपरोक्त कोई नहीं।

5. उपर्युक्त गद्यांश का उपयुक्त शीर्षक होगा-

(क) दहेज के लोभी

(ग) दहेज एक अभिशाप

(ख) दहेज प्रथा

(घ) उपरोक्त सभी।

II-निम्नलिखित शब्दों के अर्थ लिखिए। (6)

(i) स्मित (ii) रोष (iii) उद्यत (iv) बेगार (v) चटोर (vi) गमकौवा

III-निम्नलिखित प्रश्नों के उत्तर संक्षिप्त में दीजिए: (1×4=4)

(क) नक्षत्र योग में ब्राह्मण क्या करता था ?

(ख) पानी चोट खाकर भी क्या चाह रहा था?

(ग) पत्र में मीराबेन द्वारा गांधीजी और महादेव देसाई को भेजे गए किन उपहारों की चर्चा है?

(घ) विश्वनाथन आनंद के माता- पिता का नाम क्या है?

IV-निम्नलिखित प्रश्नों के उत्तर विस्तार से दीजिए। (2×4=8)

(क) इटली में रुसी ग्रैंड मास्टर ने व्यंग्य करते हुए आनंद से क्या कहा?

(ख) प्रारंभिक दौर में एवरेस्ट पर विजय प्राप्त करने वाली महिलाओं के बारे में बताइए?

(ग) ब्राह्मण ने धनवर्षण से पूर्व किन सुविधाओं की मांग की और क्यों ?

(घ) आओ फिर से दिया जलाएं", पाठ के आधार पर बताइए कि, कवि का ऐसा क्यों मानना है कि लक्ष्य आंखों से ओझल हो गया है?

(ङ) पत्र के बारे में जवाब देते हुए गांधी जी ने मीराबेन को क्या बताया?

V-पाठ्यपुस्तक संबंधी व्याकरण: (2×5=10)

निर्देशानुसार उत्तर दो। (कोई पांच भाग करो)

क-निम्नलिखित वाक्यों को शुद्ध करके लिखिए। (2)

1. गुरु जी शिष्य के साथ कक्षा से बाहर गया।

2. शतरंज का दुनिया में कई बदलाव हुए।

ख-समास विग्रह कीजिए।

1. पति - पत्नी

2. नेत्रहीन

ग-निम्नलिखित शब्दों के दो दो पर्यायवाची शब्द लिखिए। (2)

1. सूरज

2. आंख

घ-अनेक शब्दों से एक शब्दों का मिलान कीजिए।

(2)

1. जिसे पराजित ना किया जा सके। (पर्वतारोहण)

2. पहाड़ पर चढ़ना। (अतुलनीय)

3. जिसे लांघना कठिन हो। (अपराजित)

4. जिसकी तुलना न की जा सके। (दुर्लभ्य) (दुष्कर)

ङ-निम्नलिखित बहुविकल्पीय प्रश्नों के सही उत्तर लिखिए। (2)

(I) मीराबेन किसके लिए भजन भेजे हुए थे?

(i) वल्लभ भाई पटेल

(ii) स्वामी आनंद

(iii) गांधी जी

(iv) महादेव देसाई

(II) निम्नलिखित में से क्या हिमालय के सर्वोच्च पर्वत शिखर का नाम नहीं है?

(i) सागरमाथा

(ii) माउंट एवरेस्ट

(iii) कंचनजंगा

(iv) हिमालय

(III) माउंट एवरेस्ट की ऊंचाई कितनी है?

(i) 8848 मीटर

(ii) 29,028 मीटर

(iii) 27,000 मीटर

(iv) 6,000 मीटर

(IV) परछाई से कौन हार गया?

(i) चंद्रमा

(ii) सूरज

(iii) अंधियारा

(iv) दीपक

च- रिक्त स्थानों की पूर्ति कीजिए।

(I) मनुष्य असफलताओं से ----- होकर चुप बैठने वाला प्राणी नहीं है।

(II) विश्वनाथ की प्रारंभिक गुरु का नाम ----- था।

छ- निम्नलिखित वाक्यों में उचित कारक चिन्ह लगाइए।

(2)

(i) आनंद -----पांच विश्व शतरंज प्रतियोगिता जीती।

(ii) मोर -----पंख सुंदर होते हैं।

संकेत बिंदु: शारीरिक श्रम और खेल, खेल से शारीरिक और मानसिक स्वास्थ्य का लाभ, जीवन में खेलों को अपनाना आवश्यक

या

समय का महत्व

संकेत बिंदु: समय अमूल्य धन ,समय की कद्र करने से ही सफलता प्राप्ति ,प्रकृति द्वारा समय पालन,छात्र जीवन में समय का विशेष महत्व

या

मित्र के जन्मदिन का उत्सव

संकेत बिंदु: मित्र द्वारा आपको जन्मदिन पर बुलाना , जन्मदिन की तैयारियों में हाथ बंटाना , मित्रों रिश्तेदारों का आना , केक काटना , नाच -गाना उपहार देना और मिलना , रात का भोजन और घर लौटना

10.दिए गए किसी एक विषय पर सूचना लिखें: (5)

आपके विद्यालय में खेलाध्यक्ष की ओर से खो- खो की प्रतियोगिता करवाई जा रही है। छात्रों को सूचित करते हुए सूचना तैयार करें।

या

सरकारी अस्पताल द्वारा दांतों की जांच हेतुमार्च ,2024 को विद्यालय परिसर में कैंप लगाया जा रहा है। इस संबंधी प्रधानाचार्य की ओर से छात्रों को सूचित करते हुए सूचना तैयार करें

11. दिए गए किसी एक विषय पर आकर्षक विज्ञापन तैयार कीजिए। (4)

रेसिंग साइकिल के लिए एक आकर्षक विज्ञापन तैयार कीजिए।

अथवा

एप्पल मोबाइल के लिए एक आकर्षक विज्ञापन तैयार कीजिए।

संस्कृत भाग (5)

12.1.दिए गए वाक्यों के संस्कृत में अनुवाद कीजिए। किन्हीं तीन प्रश्नों के उत्तर दीजिए।

- वह आंखों से देखता है।
- वह किताब पढ़ता है।
- निष्ठा उसको कलम देती है।
- मोहन दूध पीता है।

12. 2. दिए गए वाक्यों में से किन्ही तीन वाक्यों का हिंदी में अनुवाद कीजिए।

- तौ पुस्तकम् पठति।
- मोहनः तम् मिष्ठानम् ददाति।
- अस्माकम् विद्यालयस्य नाम् भगवान् महावीरस्य नामधेयेन (नामे) अस्ति।
- ते नेत्राभ्यां पश्यन्ति।

संकेत बिंदु: शारीरिक श्रम और खेल ,खेल से शारीरिक और मानसिक स्वास्थ्य का लाभ , जीवन में खेलों को अपना आवश्यक

या

समय का महत्व

संकेत बिंदु: समय अमूल्य धन ,समय की कद्र करने से ही सफलता प्राप्ति ,प्रकृति द्वारा समय पालन,छात्र जीवन में समय का विशेष महत्व

या

मित्र के जन्मदिन का उत्सव

संकेत बिंदु: मित्र द्वारा आपको जन्मदिन पर बुलाना , जन्मदिन की तैयारियों में हाथ बंटाना , मित्रों रिश्तेदारों का आना , केक काटना , नाच -गाना उपहार देना और मिलना , रात का भोजन और घर लौटना

10.दिए गए किसी एक विषय पर सूचना लिखें: (5)

आपके विद्यालय में खेलाध्यक्ष की ओर से खो- खो की प्रतियोगिता करवाई जा रही है। छात्रों को सूचित करते हुए सूचना तैयार करें।

या

सरकारी अस्पताल द्वारा दांतों की जांच हेतुमार्च ,2024 को विद्यालय परिसर में कैंप लगाया जा रहा है। इस संबंधी प्रधानाचार्य की ओर से छात्रों को सूचित करते हुए सूचना तैयार करें

11. दिए गए किसी एक विषय पर आकर्षक विज्ञापन तैयार कीजिए। (4)

रेसिंग साइकिल के लिए एक आकर्षक विज्ञापन तैयार कीजिए।

अथवा

एप्पल मोबाइल के लिए एक आकर्षक विज्ञापन तैयार कीजिए।

संस्कृत भाग (5)

12.1.दिए गए वाक्यों के संस्कृत में अनुवाद कीजिए। किन्हीं तीन प्रश्नों के उत्तर दीजिए।

- वह आंखों से देखता है।
- वह किताब पढ़ता है।
- निष्ठा उसको कलम देती है।
- मोहन दूध पीता है।

12. 2. दिए गए वाक्यों में से किन्ही तीन वाक्यों का हिंदी में अनुवाद कीजिए।

- तौ पुस्तकम् पठति।
- मोहनः तम् मिष्ठानम् ददाति।
- अस्माकम् विद्यालयस्य नाम् भगवान् महावीरस्य नामधेयेन (नामे) अस्ति।
- ते नेत्राभ्यां पश्यन्ति।

(iii) ਵਿਰੋਧੀ ਸ਼ਬਦ ਕਿਹੋ ਜਿਹਾ ਅਰਥ ਰੱਖਦੇ ਹਨ ?

ਉਲਟਾ ਸਿੱਧਾ ਸਾਫ

(iv) ਚਾਨਣ ਸ਼ਬਦ ਲਈ ਸਹੀ ਵਿਰੋਧੀ ਸ਼ਬਦ ਹੋਵੇਗਾ ?

ਹਨੇਰਾ ਰੋਸ਼ਨੀ ਦੇਵੇਂ

(v) ਅਗੋਤਰ ਪਿਛੇਤਰ ਕੀ ਬਣਾਉਂਦੇ ਹਨ ?

ਨਾਂਵ ਵਿਸ਼ੇਸ਼ਣ ਨਵੇਂ ਸ਼ਬਦ

(vi) ਪਿਛੇਤਰ ਕਿੱਥੇ ਲੱਗਦਾ ਹੈ ?

ਅੱਗੇ ਪਿੱਛੇ ਉੱਪਰ

X. ਤੁਹਾਡੇ ਸਕੂਲ ਵਿੱਚ ਵਾਤਾਵਰਨ ਦੀ ਸਾਂਭ ਸੰਭਾਲ ਸਬੰਧੀ ਪੈਦੇ ਲਾਉਣ ਦੀ ਮੁਹਿੰਮ ਸ਼ੁਰੂ ਕੀਤੀ ਜਾ ਰਹੀ ਹੈ ਇਸ ਸਬੰਧੀ ਇੱਕ ਨੋਟਿਸ ਤਿਆਰ ਕਰੋ (4)

XI. ਦਿੱਤੇ ਗਏ ਚਿੱਤਰ ਦਾ ਵਰਣਨ ਪੰਜ -ਸੱਤ ਵਾਕਾਂ ਵਿੱਚ ਕਰੋ। (4)



XII. ਕਿਸੇ ਅਖਬਾਰ ਦੇ ਸੰਪਾਦਕ ਨੂੰ ਮੁਹੱਲੇ ਵਿੱਚ ਦੇਰ ਰਾਤ ਤੱਕ ਵੱਜਦੇ ਲਾਊਡ ਸਪੀਕਰਾਂ ਸਬੰਧੀ ਪੱਤਰ ਲਿਖੋ (5)

ਜਾਂ

ਤੁਹਾਡੇ ਮੁਹੱਲੇ /ਕਲੋਨੀ ਵਿੱਚ ਸਾਫ ਸਫਾਈ ਦਾ ਪ੍ਰਬੰਧ ਸਹੀ ਨਹੀਂ ਹੈ ਇਸ ਸਬੰਧੀ ਕਿਸੇ ਵੀ ਅਖਬਾਰ ਦੇ ਸੰਪਾਦਕ ਨੂੰ ਪੱਤਰ ਲਿਖੋ

XIII. ਕਿਸੇ ਇੱਕ ਵਿਸ਼ੇ ਤੇ ਲੇਖ ਰਚਨਾ ਕਰੋ (5)

ਸ੍ਰੀ ਗੁਰੂ ਨਾਨਕ ਦੇਵ ਜੀ ਜਾਂ ਭਗਤ ਸਿੰਘ



Bhagwan Mahaveer Public Sr. Sec School, Banga

TERM-II EXAM

Class 7th Punjabi

Time Allowed : 3 hrs

M.M :

I. ਹੇਠ ਲਿਖੇ ਪੈਰੇ ਨੂੰ ਧਿਆਨ ਨਾਲ ਪੜ੍ਹੋ ਅਤੇ ਪੁੱਛੇ ਗਏ ਪ੍ਰਸ਼ਨਾਂ ਦੇ ਉੱਤਰ ਦਿਓ :
ਗੱਪਾਂ ਗੱਲਾਂ ਦਾ ਵਿਗੜਿਆ ਹੋਇਆ ਰੂਪ ਹੁੰਦੀਆਂ ਹਨ। ਇਹ ਕੱਜੀਆਂ ਹੋਈਆਂ ਚੁਗਲਾਂ ਹੁੰਦੀਆਂ ਹਨ। ਗੱਪਾਂ ਮਾਰੀਆਂ ਜਾਂਦੀਆਂ ਹਨ, ਗੱਲਾਂ ਕੀਤੀਆਂ ਜਾਂਦੀਆਂ ਹਨ। ਇਸੇ ਵਿੱਚ ਇਹਨਾਂ ਦਾ ਅੰਤਰ ਹੈ। ਗੱਪਾਂ ਤਾਸ਼ ਖੇਡਣ ਵਾਂਗ ਹਨ, ਗੱਲਾਂ ਕਵਿਤਾ ਲਿਖਣ ਵਾਂਗ ਹਨ ਫੜ੍ਹਾਂ, ਖੇਖਲੇਪਣ ਦਾ ਬਾਹਰਲਾ ਖੜਾਕ ਹਨ। ਸਾਨੂੰ ਖੜਾਕ ਅਤੇ ਸੰਗੀਤ ਵਿੱਚ ਫਰਕ ਸਮਝਣਾ ਚਾਹੀਦਾ ਹੈ। ਜਿਆਦਾ ਗੱਪਾ ਮਾਰਨ ਨਾਲ ਕਈ ਵਾਰ ਸਮੇਂ ਦੀ ਬਰਬਾਦੀ ਹੀ ਹੈ ਤੇ ਪੱਲੇ ਕੁਝ ਨਹੀਂ ਪੈਂਦਾ।

(ੳ) ਗੱਪਾਂ ਦਾ ਸੰਬੰਧ ਕਿਹੜੀ ਖੇਡ ਨਾਲ ਦੱਸਿਆ ਗਿਆ ਹੈ

(ਅ) ਗੱਲਾਂ ਸਾਹਿਤ ਦੇ ਕਿਹੜੇ ਰੂਪ ਨਾਲ ਸੰਬੰਧਿਤ ਹਨ?

(ੲ) ਜਿਆਦਾ ਗੱਲਾਂ ਕਰਨੀਆਂ ਸਾਨੂੰ ਕੋਈ ਫਾਇਦਾ ਦਿੰਦੀਆਂ ਹਨ?

(ਸ) ਗੱਪਾਂ ਅਤੇ ਗੱਲਾਂ ਵਿੱਚ ਕੀ ਫਰਕ ਹੈ ?

(ਹ) ਸਾਨੂੰ ਕਿਸ ਵਿੱਚ ਫਰਕ ਸਮਝਣਾ ਚਾਹੀਦਾ ਹੈ?

(ਕ) ਗੱਪਾਂ ਕਿਨਾਂ ਦਾ ਵਿਗੜਿਆ ਹੋਇਆ ਰੂਪ ਹੈ?

II. ਬਹੁ ਵਿਕਲਪੀ ਪ੍ਰਸ਼ਨ ਹੱਲ ਕਰੋ :

1. ਪਸ਼ੂਆਂ ਦੇ ਗਰਦਨ ਉੱਪਰ ਰੱਖ ਕੇ ਕਿਹੜਾ ਸੰਦ ਵਰਤਿਆ ਜਾਂਦਾ ਹੈ

(i) ਕਸੀਆਂ (ii) ਪੰਜਾਲੀ (iii) ਦਾਹ (iv) ਹਲ

2. ਸਿੱਖ ਗੁਰੂਆਂ ਵਿੱਚੋਂ ਕਿਹੜੇ ਗੁਰੂ ਨੂੰ ਹਿੰਦ ਦੀ ਚਾਦਰ ਕਿਹਾ ਜਾਂਦਾ ਹੈ।

(i) ਸ੍ਰੀ ਗੁਰੂ ਨਾਨਕ ਦੇਵ ਜੀ (ii) ਸ੍ਰੀ ਗੁਰੂ ਤੇਗ ਬਹਾਦਰ ਜੀ
(iii) ਸ੍ਰੀ ਗੁਰੂ ਅਰਜਨ ਦੇਵ ਜੀ (iv) ਸ੍ਰੀ ਗੁਰੂ ਗੋਬਿੰਦ ਸਿੰਘ ਜੀ

3. ਅਰਮਾਨ ਦੇ ਪਿਤਾ ਜੀ ਨੇ ਉਸ ਨੂੰ ਕਿੱਥੇ ਪੜ੍ਹਨ ਦੀ ਸਲਾਹ ਦਿੱਤੀ?

(i) ਜਲੰਧਰ (ii) ਚੰਡੀਗੜ੍ਹ (iii) ਘਰ ਦੇ ਨੇੜੇ (iv) ਪਿੰਡ

4. ਦੁਲਾ ਭੱਟੀ ਦਾ ਜਨਮ ਕਿੱਥੇ ਹੋਇਆ ?

(i) ਪਿੰਡ ਭੱਟੀਆਂ (ii) ਦਿੱਲੀ (iii) ਆਗਰਾ (iv) ਇਹਨਾਂ ਵਿੱਚੋਂ ਕੋਈ

5. ਨਿਰੰਜਨ ਸਿੰਘ ਕੌਣ ਸਨ?

- (i) ਪ੍ਰਿੰਸੀਪਲ (ii) ਵਿਦਿਆਰਥੀ (iii) ਅਧਿਆਪਕ (iv) ਚਪੜਾਸੀ

6. ਦੁੱਲਾ ਭੱਟੀ ਦੇ ਦਾਦੇ ਦਾ ਕੀ ਨਾਂ ਸੀ?

- (i) ਫਰੀਦ ਭੱਟੀ (ii) ਟੇਡਰ ਮਲ (iii) ਰੋਬਿਨਹੁੱਡ (iv) ਸਾਂਦਲ ਪੱਟੀ

III. ਹੇਠ ਲਿਖੇ ਪ੍ਰਸ਼ਨਾਂ ਦੇ ਉੱਤਰ 25-30 ਸ਼ਬਦਾਂ ਵਿੱਚ ਲਿਖੋ (5x2=10)

1. ਖੇਤੀਬਾੜੀ ਕਰਨ ਵਿੱਚ ਪਸ਼ੂ ਕਿਵੇਂ ਸਹਾਇਕ ਹਨ ?
2. ਸ਼੍ਰੀ ਗੁਰੂ ਤੇਗ ਬਹਾਦਰ ਜੀ ਨੇ ਹਿੰਦ ਦੀ ਚਾਦਰ ਬਣ ਕੇ ਸਾਨੂੰ ਕੀ ਸਮਝਾਇਆ ਹੈ ?
3. ਅਰਮਾਨ ਨੇ ਪੰਜਾਬੀ ਦੀ ਕਿਤਾਬ ਵਿੱਚ ਕੀ ਪੜ੍ਹਿਆ ਸੀ ?
4. ਦੁੱਲਾ ਭੱਟੀ ਇੱਜਤਾਂ ਦਾ ਪਹਿਰੇਦਾਰ ਕਿਵੇਂ ਅਖਵਾਇਆ ?
5. ਸ਼ੇਖੂ ਦਾ ਪਾਲਣ ਪੋਸ਼ਣ ਕਿਸ ਦੇ ਘਰ ਹੋਇਆ ?
6. ਜਸਬੀਰ ਦੀ ਮਾਂ ਜਸਵੀਰ ਦੇ ਅਧਿਆਪਕਾਂ ਨੂੰ ਕਿਸ ਗੱਲ ਤੋਂ ਵਰਜਦੀ ਸੀ ?

IV. ਸਿੱਖਿਆ ਦਾ ਅਸਲੀ ਮਨੋਰਥ ਕੀ ਹੁੰਦਾ ਹੈ ਵਿਸਥਾਰ ਵਿੱਚ ਦੱਸੋ। (3)

ਜਾਂ

ਕਿਸੇਰ ਅਵਸਥਾ ਵਿੱਚ ਕੀ- ਕੀ ਸਾਵਧਾਨੀਆਂ ਰੱਖਣੀਆਂ ਚਾਹੀਦੀਆਂ ਹਨ?

V. ਖਾਲੀ ਸਥਾਨ ਭਰੋ (4)

- (i) ਪੁਰਾਣੇ ਸਮਿਆਂ ਵਿੱਚ ਖੇਤੀ _____ ਤੇ ਅਧਾਰਿਤ ਸੀ।
- (ii) ਪੁਰਾਣੇ ਸਮੇਂ ਵਿੱਚ ਲੋਕ ਆਪਣੇ ਹੱਥਾਂ ਅਤੇ ਪੱਟਾ ਉੱਪਰ ਮੇਲਿਆਂ ਵਿੱਚੋਂ _____ ਖੁਦਵਾਉਂਦੇ ਸਨ।
- (iii) ਪ੍ਰਸਿੱਧ ਲੋਕ ਗੀਤ _____ ਨੂੰ ਉਤਸਾਹ ਨਾਲ ਗਾਇਆ ਜਾਂਦਾ ਹੈ।
- (iv) ਦੋਵੇਂ ਖੁਸ਼ੀ ਦੇ _____ ਲਗਾਉਣ ਲੱਗੇ

VI. ਹੇਠ ਲਿਖੇ ਸ਼ਬਦਾਂ ਨੂੰ ਵਾਕਾਂ ਵਿੱਚ ਵਰਤੋ (5)

- (i) ਐਜ਼ਾਰ (ii) ਕਾਫ (iii) ਸੀਸ (iv) ਅਜੀਬ (v) ਕਬੀਲਾ (vi) ਸਰਬਪੱਖੀ

VII. ਦਿੱਤੇ ਗਏ ਸ਼ਬਦਾਂ ਦੇ ਅਰਥ ਲਿਖੋ। (4)

- (i) ਸਮਾਜ (ii) ਪ੍ਰਚੱਲਿਤ (iii) ਰਹਿੰਦ-ਖੂੰਹਦ (iv) ਮਕਤਲ (v) ਤੁਲਨਾ

VIII. ਪਾਠ ਪੁਸਤਕ ਵਿਚਲਾ ਵਿਆਕਰਨ ਭਾਗ (5 ਭਾਗਾਂ ਵਿੱਚੋਂ ਕੋਈ 4 ਭਾਗ ਹੱਲ ਕਰੋ)

1. ਬਹੁਤੇ ਸ਼ਬਦਾਂ ਦੀ ਥਾਂ ਇੱਕ ਸ਼ਬਦ ਲਿਖੋ :

(i) ਕੁੜੀ ਦੇ ਵਿਆਹ ਤੇ ਗਾਏ ਜਾਣ ਵਾਲੇ ਗੀਤ

(ii) ਆਗਿਆ ਦਾ ਪਾਲਣ ਕਰਨ ਵਾਲਾ

(iii) ਜੇ ਮਿੱਤਰ ਧੋਖਾ ਦੇ ਜਾਵੇ

2. ਦਿੱਤੇ ਗਏ ਸ਼ਬਦਾਂ ਦੇ ਵਿਰੋਧੀ ਸ਼ਬਦ ਲਿਖੋ :

(i) ਉਸ ਨੂੰ ਵਪਾਰ ਵਿੱਚ ਹਾਨੀ ਹੋਈ (ii) ਰਕੇਸ਼ ਆਸਤਕ ਹੈ

(iii) ਬਾਦਸ਼ਾਹ ਬਹੁਤ ਸਮਝਦਾਰ ਹੈ

3. ਹੇਠ ਲਿਖੇ ਵਾਕਾਂ ਅੱਗੇ (✓) ਅਤੇ ਗਲਤ ਅੱਗੇ (x) ਦਾ ਨਿਸ਼ਾਨ ਲਗਾਓ :

(i) ਜਸਬੀਰ ਨੂੰ ਨੈਕਰੀ ਨਾ ਮਿਲਣ ਦਾ ਕੋਈ ਗਿਲਾ ਨਹੀਂ ਸੀ

(ii) ਦੁੱਲੇ ਭੱਟੀ ਨੂੰ ਗੁੜ ਦੀ ਗੁੜਤੀ ਦਿੱਤੀ ਗਈ

(iii) ਦੁੱਲੇ ਭੱਟੀ ਨੂੰ ਬਾਗੀ ਸੂਰਮਾ ਵੀ ਆਖਦੇ ਹਨ

4. ਦਿੱਤੇ ਗਏ ਸ਼ਬਦਾਂ ਦਾ ਇੱਕ-ਇੱਕ ਸਮਾਨਾਰਥ ਸ਼ਬਦ ਲਿਖੋ :

(i) ਅਜਮਾਉਣਾ (ii) ਅੱਤਿਆਚਾਰ (iii) ਠੀਕ

5 ਹੇਠਲੇ ਵਾਕਾਂ ਵਿਚਲੇ ਸੰਬੰਧਕ ਚੁਣੋ :

(i) ਇਹ ਪੈਨ ਤਨਿਸ਼ਕ ਦਾ ਹੈ (ii) ਗਾਇਤਰੀ ਦੇ ਬਾਲ ਬਹੁਤ ਲੰਬੇ ਹਨ

(iii) ਧੰਨੇ ਕੋਲ ਇੱਕ ਮੱਝ ਹੈ

IX. ਵਿਆਕਰਣ ਭਾਗ ਹੱਲ ਕਰੋ (12)

1. ਹੇਠਾਂ ਲਿਖੇ ਵਾਕਾਂ ਵਿੱਚੋਂ ਕਾਲ ਦੀ ਕਿਸਮ ਦੱਸੋ (3)

(i) ਬੱਚਾ ਸੁੱਤਾ ਪਿਆ ਸੀ (ii) ਕਬੂਤਰ ਉੱਡ ਰਹੇ ਹੋਣਗੇ (iii) ਅਨੂ ਦੌੜ ਰਹੀ ਹੈ

2. ਮੁਹਾਵਰਿਆਂ ਦੇ ਅਰਥ ਦੱਸ ਕੇ ਵਾਕ ਬਣਾਓ (3)

(i) ਕੰਨ ਭਰਨੇ

(ii) ਖੀਸੇ ਭਰਨੇ

(iii) ਗੁੱਡੀ ਚੜਨੀ

(iv) ਘੱਟਾ ਛਾਣਦੇ ਫਿਰਨਾ

3. ਦਿੱਤੇ ਗਏ ਪ੍ਰਸ਼ਨਾਂ ਲਈ ਸਹੀ ਵਿਕਲਪ ਦੀ ਚੋਣ ਕਰੋ। (6)

(i) ਵਿਸ਼ਰਾਮ ਚਿੰਨ ਗੱਲਬਾਤ ਵਿੱਚ ਕੀ ਲਿਆਉਂਦੇ ਹਨ ?

ਖਰਵਾਪਨ ਬੇਤੁਕਾਪਨ ਸਪੱਸ਼ਟਤਾ

(ii) ਵਿਸ਼ਰਾਮ ਚਿੰਨ੍ਹ ਕੁੱਲ ਕਿੰਨੇ ਹਨ ?

ਤੇਰਾਂ

ਬਾਰਾਂ

ਗਿਆਰਾਂ