

III. ਹੇਠ ਲਿਖਿਆਂ ਦੇ ਸਮਾਜੀ ਸ਼ਬਦ ਬਣਾ ਕੇ ਲਿਖੋ:-

- i. ਜੋੜੇ ਰੱਖਣ ਦੀ ਥਾਂ:- ii. ਦੇਸ਼ ਨਾਲ ਪ੍ਰੇਮ

IV. ਹੇਠ ਲਿਖੇ ਮੁਹਾਵਰਿਆਂ ਵਿੱਚੋਂ ਕਿਸੇ ਦੋ ਦੇ ਅਰਥ ਦੱਸਦੇ ਹੋਏ ਇਸ ਤਰ੍ਹਾਂ ਵਾਕ ਬਣਾਓ ਕੇ ਅਰਥ ਸਪੱਸ਼ਟ ਹੋ ਜਾਣ :-

- i. ਉੱਲੂ ਬਣਾਉਣਾ ii. ਅੱਖਾਂ ਵਿੱਚ ਘੱਟਾ ਪਾਉਣਾ iii. ਇੱਕ ਅੱਖ ਨਾਲ ਵੇਖਣਾ

V. ਹੇਠ ਲਿਖਿਆਂ ਵਾਕਾਂ ਨੂੰ ਸਹੀ ਵਿਸਰਾਮ ਚਿੰਨ੍ਹ ਲਗਾਓ:-

- i. ਤੁਸੀਂ ਕਿਸ ਖੁਸ਼ੀ ਵਿੱਚ ਮਠਿਆਈ ਲਿਆਂਦੀ ਹੈ  
ii. ਸ਼ਾਬਾਸ਼ ਤੁਸੀਂ ਆਪਣੀ ਇਮਾਨਦਾਰੀ ਦਾ ਸਬੂਤ ਦਿੱਤਾ

VI. ਹੇਠ ਲਿਖਿਆਂ ਖ਼ਾਲੀ ਥਾਵਾਂ ਨੂੰ ਰੇਖਾਂਕਿਤ ਕੀਤੇ ਸ਼ਬਦਾਂ ਦੇ ਵਿਰੋਧੀ ਸ਼ਬਦ ਲਿਖ ਕੇ ਪੂਰੀਆਂ ਕਰੋ:

- i. ਦੀਪ ਦਾ ਭਰਾ ਬਹੁਤ \*ਬਹਾਦਰ\* ਹੈ ਪਰ ਦੀਪ \_\_\_\_\_  
ii. ਜਿਹੜੀ ਘੜੀ ਉਸਨੇ ਏਨੀ \*ਮਹਿੰਗੀ\* ਖਰੀਦੀ ਉਹ ਮੈਨੂੰ ਬਹੁਤ \_\_\_\_\_ ਮਿਲ ਗਈ।

VII. ਹੇਠ ਲਿਖੇ ਵਾਕਾਂ ਵਿੱਚੋਂ ਕਿਰਿਆ ਵਿਸ਼ੇਸ਼ਣ ਸ਼ਬਦਾਂ ਦੀ ਚੋਣ ਕਰੋ:-

- i. ਬੱਚੇ ਪਾਰਕ ਵਿੱਚ ਖੇਡ ਰਹੇ ਹਨ।  
ii. ਤੁਸੀਂ ਵਾਰ ਵਾਰ ਕਿਉਂ ਹੱਸ ਰਹੇ ਹੋ?

11. ਹੇਠ ਲਿਖਿਆਂ ਵਿਸ਼ਿਆਂ ਵਿੱਚੋਂ ਕਿਸੇ ਇੱਕ ਵਿਸ਼ੇ ਉੱਤੇ ਕੋਈ ਚਾਰ ਚਾਰ ਨਾਅਰੇ ਲਿਖੋ:- (4)

ਕੁੱਖਾਂ ਦੀ ਸੰਭਾਲ

ਜਾਂ

ਵਿੱਦਿਆ ਦਾ ਮਹੱਤਵ

12. ਤੁਹਾਡਾ ਮੋਟਰਸਾਈਕਲ ਚੋਰੀ ਹੋ ਗਿਆ ਹੈ। ਇਸ ਦੀ ਰਿਪੋਰਟ ਲਿਖਾਉਣ ਲਈ ਆਪਣੇ ਇਲਾਕੇ ਦੇ ਥਾਣੇ ਦੇ ਮੁੱਖੀ ਨੂੰ ਇੱਕ ਪੱਤਰ ਲਿਖੋ। (7)

ਜਾਂ

ਇੱਕ ਪੱਤਰ ਲਿੱਖ ਕੇ ਆਪਣੇ ਸ਼ਹਿਰ ਦੇ ਨਗਰ ਨਿਗਮ ਦੇ ਪ੍ਰਧਾਨ ਨੂੰ ਇਲਾਕੇ ਵਿੱਚ ਸਫ਼ਾਈ ਦੀ ਮਾੜੀ ਸਥਿਤੀ ਬਾਰੇ ਦੱਸਦੇ ਹੋਏ ਇਸਦਾ ਹੱਲ ਕਰਨ ਦੀ ਬੇਨਤੀ ਕਰੋ।

13. ਹੇਠ ਲਿਖਿਆਂ ਵਿਸ਼ਿਆਂ ਵਿੱਚੋਂ ਕਿਸੇ ਇੱਕ ਵਿਸ਼ੇ ਉੱਤੇ ਲੇਖ ਰਚਨਾ ਕਰੋ:- (7)

ਸ੍ਰੀ ਗੁਰੂ ਗੋਬਿੰਦ ਸਿੰਘ ਜੀ

ਜਾਂ

ਸ਼ਹੀਦ ਭਗਤ ਸਿੰਘ



Bhagwan Mahaveer Public Sr. Sec School , Bang

ਕਲਾਸ :- ਅੱਠਵੀਂ

ਵਿਸ਼ਾ :- ਪੰਜਾਬੀ

ਸਮਾਂ :- ਤਿੰਨ ਘੰਟੇ

ਕੁੱਲ ਅੰਕ :- 80

ਆਮ ਨਿਰਦੇਸ਼

1. ਹੇਠ ਲਿਖੇ ਨਿਰਦੇਸ਼ਾਂ ਨੂੰ ਧਿਆਨ ਨਾਲ ਪੜ੍ਹੋ ਅਤੇ ਉਹਨਾਂ ਦਾ ਪਾਲਣ ਕਰੋ:-
2. ਸਾਰੇ ਪ੍ਰਸ਼ਨ ਲਾਜ਼ਮੀ ਹਨ।
3. ਪ੍ਰਸ਼ਨਾਂ ਵਿੱਚ ਦਿੱਤੀ ਗਈ ਅੰਦਰੂਨੀ ਚੋਣ ਨੂੰ ਧਿਆਨ ਨਾਲ ਦੇਖ ਕੇ ਨਿਰਦੇਸ਼ਾਂ ਅਨੁਸਾਰ ਹੱਲ ਕੀਤਾ ਜਾਵੇ।
4. ਲਿਖਾਈ ਸਾਫ ਅਤੇ ਸੁੱਧ ਲਿਖੀ ਜਾਵੇ।
5. ਸਹੀ ਪ੍ਰਸ਼ਨ ਨੰਬਰ ਲਿਖ ਕੇ ਉੱਤਰਾਂ ਨੂੰ ਧਿਆਨ ਨਾਲ ਉੱਤਰ- ਸ਼ੀਟ 'ਤੇ ਲਿਖਿਆ ਜਾਵੇ।

1. ਹੇਠ ਲਿਖੇ ਪੈਰੇ ਨੂੰ ਧਿਆਨ ਨਾਲ ਪੜ੍ਹੋ ਅਤੇ ਪੁੱਛੇ ਗਏ ਪ੍ਰਸ਼ਨਾਂ ਦੇ ਉੱਤਰ ਦਿਓ:-

(1x 6=6)

ਇੱਕ ਵਾਰੀ ਸ੍ਰੀ ਗੁਰੂ ਨਾਨਕ ਦੇਵ ਜੀ ਆਪਣੇ ਸਾਥੀ ਮਰਦਾਨੇ ਦੇ ਨਾਲ ਘੁੰਮਦੇ-ਘੁੰਮਾਉਂਦੇ ਇੱਕ ਪਿੰਡ ਵਿੱਚ ਪੁੱਜੇ। ਰਾਤ ਬਿਤਾਉਣ ਲਈ ਉਹ ਉਸੇ ਪਿੰਡ ਵਿੱਚ ਰੁੱਕ ਗਏ। ਪਿੰਡ ਦੇ ਲੋਕ ਬੜੇ ਹੰਕਾਰੀ ਸਨ। ਗੁਰੂ ਜੀ ਦੇ ਵਾਰ-ਵਾਰ ਪੁੱਛਣ ਤੇ ਵੀ ਕਿਸੇ ਨੇ ਵੀ ਉਨ੍ਹਾਂ ਨੂੰ ਰਾਤ ਨਾ ਕੱਟਣ ਦਿੱਤੀ ਤੇ ਨਾ ਹੀ ਭੋਜਨ ਛਕਾਇਆ। ਗੁਰੂ ਜੀ ਅੰਤਰਜਾਮੀ ਸਨ। ਉਹ ਪਿੰਡ ਦੇ ਲੋਕਾਂ ਨੂੰ ਸਿੱਧੇ ਰਾਹ ਪਾਉਣ ਹੀ ਆਏ ਸਨ। ਅਗਲੇ ਦਿਨ ਉੱਥੋਂ ਤੁਰਨ ਵੇਲੇ ਗੁਰੂ ਜੀ ਨੇ ਪਿੰਡ ਵਾਲਿਆਂ ਨੂੰ ਵੱਸਦੇ ਰਹਿਣ ਦਾ ਅਸ਼ੀਰਵਾਦ ਦਿੱਤਾ। ਮਰਦਾਨਾ ਗੁਰੂ ਜੀ ਵੱਲ ਹੈਰਾਨੀ ਭਰੀਆਂ ਨਜ਼ਰਾਂ ਨਾਲ ਤੱਕਦਾ ਹੋਇਆ ਆਖਣ ਲੱਗਾ, ਗੁਰੂ ਜੀ ਤੁਸੀਂ ਤਾਂ ਪਿੰਡ ਵਾਸੀਆਂ ਨੂੰ ਬੜੀ ਵੱਡੀ ਅਸੀਸ ਦਿੱਤੀ ਹੈ।

ਪ੍ਰਸ਼ਨ:-

- i. ਗੁਰੂ ਨਾਨਕ ਦੇਵ ਜੀ ਦੇ ਸਾਥੀ ਕੌਣ ਸਨ ?
- ii. ਪਿੰਡ ਦੇ ਲੋਕ ਕਿਹੋ ਜਿਹੇ ਸਨ ?
- iii. ਗੁਰੂ ਨਾਨਕ ਦੇਵ ਜੀ ਨੇ ਪਿੰਡ ਵਾਸੀਆਂ ਨੂੰ ਕੀ ਅਸੀਸ ਦਿੱਤੀ ?
- iv. ਇੱਕ ਦਿਨ ਗੁਰੂ ਨਾਨਕ ਦੇਵ ਜੀ ਕਿੱਥੇ ਪਹੁੰਚੇ ?
- v. ਗੁਰੂ ਜੀ ਕਿਹੋ ਜਿਹੀ ਦ੍ਰਿਸ਼ਟੀ ਵਾਲੇ ਸਨ ?
- vi. ਪਿੰਡ ਵਾਲਿਆਂ ਨੇ ਗੁਰੂ ਜੀ ਨਾਲ ਕਿਵੇਂ ਦਾ ਵਰਤਾਓ ਕੀਤਾ ?

2. ਹੇਠ ਲਿਖੀ ਕਾਵਿ ਟੁਕੜੀ ਨੂੰ ਧਿਆਨ ਨਾਲ ਪੜ੍ਹੋ ਅਤੇ ਪੁੱਛੇ ਗਏ ਪ੍ਰਸ਼ਨਾਂ ਦੇ ਉੱਤਰ

ਆਪਣੇ ਸ਼ਬਦਾਂ ਵਿੱਚ ਬਣਾ ਕੇ ਲਿਖੋ:-

(1x4=4)

ਮਾਂ ਦੀ ਚੁੰਨੀ ਦੇ ਲੜ ਦੀ, ਗੱਲ ਬੜੀ ਹੀ ਨਿਰਾਲੀ ਐ।  
ਇਸ ਦੇ ਧਾਗਿਆਂ ਦੀ ਖੁਸ਼ਬੂ, ਮੈਂ ਸਾਹਾਂ ਨਾਲ ਸੰਭਾਲੀ ਐ।  
ਇਸ ਲੜ ਨੇ ਮੇਰੇ ਹੰਝੂ ਪੀਤੇ, ਮੂੰਹ ਕੰਨ ਵੀ ਬਹੁਤ ਕੀਤੇ ਸਾਫ਼।  
ਇਸ ਲੜ ਨਾਲ ਮੈਂ ਹੱਥ ਨੇ ਪੁੰਝੇ, ਤੌਲੀਏ ਦੀ ਥਾਂ ਆਇਆ ਰਾਸ।

**ਪ੍ਰਸ਼ਨ:-**

- ਮਾਂ ਦੀ ਚੁੰਨੀ ਦੇ ਲੜ ਦੀ ਗੱਲ ਕਿਸ ਤਰ੍ਹਾਂ ਦੀ ਹੈ?
- ਚੁੰਨੀ ਦੇ ਧਾਗਿਆਂ ਦੀ ਖੁਸ਼ਬੂ ਕਿਵੇਂ ਸਾਂਭੀ ਹੈ?
- ਚੁੰਨੀ ਦੇ ਲੜ ਨਾਲ ਕਵੀ ਕੀ ਪੁਝਣ ਦੀ ਗੱਲ ਕਰਦਾ ਹੈ?
- ਮਾਂ ਦੀ ਚੁੰਨੀ ਕਿਸ ਦੀ ਥਾਂ ਕਵੀ ਵਰਤਦਾ ਹੈ?

**3. ਸਹੀ ਉੱਤਰ ਦੀ ਚੋਣ ਕਰੋ:-**

**(1x5=5)**

- ਗੁਰੂ ਗੋਬਿੰਦ ਸਿੰਘ ਜੀ ਨੇ ਜ਼ਫ਼ਰਨਾਮਾ ਕਿਸ ਨੂੰ ਲਿਖਿਆ?
  - ਅਕਬਰ ਨੂੰ
  - ਔਰੰਗਜ਼ੇਬ ਨੂੰ
  - ਬਾਬਰ ਨੂੰ
  - ਵਜ਼ੀਰ ਖਾਨ ਨੂੰ
- ਲੇਖਕ ਕਿਸ ਕਲਾਸ ਦੀ ਗਾਰੂਪ ਫੋਟੋ ਦੇਖ ਰਿਹਾ ਸੀ ?
  - ਅੱਠਵੀਂ ਕਲਾਸ ਦੀ
  - ਸੱਤਵੀਂ ਕਲਾਸ ਦੀ
  - ਛੇਵੀਂ ਕਲਾਸ ਦੀ
  - ਦਸਵੀਂ ਕਲਾਸ ਦੀ
- ਮਹਾਤਮਾ ਬੁੱਧ ਜੀ ਨੂੰ ਕਿੰਨੀ ਉਮਰ ਵਿੱਚ ਨਿਰਵਾਣ ਪ੍ਰਾਪਤੀ ਹੋਈ ?
  - ਅੱਸੀ ਸਾਲ ਦੀ ਉਮਰ ਵਿੱਚ
  - ਨੌਬੇ ਸਾਲ ਦੀ ਉਮਰ ਵਿੱਚ
  - ਸੱਠ ਸਾਲ ਦੀ ਉਮਰ ਵਿੱਚ
  - ਪੰਜਾਹ ਸਾਲ ਦੀ ਉਮਰ ਵਿੱਚ
- ਪਰਿਵਾਰ ਦੀ ਸ਼ਾਨ ਕੌਣ ਵਧਾਉਂਦੇ ਹਨ ?
  - ਮਰਦ
  - ਔਰਤਾਂ
  - ਬਜ਼ੁਰਗ
  - ਬੱਚੇ
- ਗੁਰੂ ਅਮਰਦਾਸ ਜੀ ਦੇ ਸਮੇਂ ਮੁਗ਼ਲ ਬਾਦਸ਼ਾਹ ਕੌਣ ਸੀ ?
  - ਅਕਬਰ
  - ਜਹਾਂਗੀਰ
  - ਔਰੰਗਜ਼ੇਬ
  - ਬਹਾਦਰ ਸ਼ਾਹ

**4. ਹੇਠ ਲਿਖੇ ਪ੍ਰਸ਼ਨਾਂ ਵਿੱਚੋਂ ਕਿਸੇ ਚਾਰ ਪ੍ਰਸ਼ਨਾਂ ਦੇ ਉੱਤਰ 25-30 ਸ਼ਬਦਾਂ ਵਿੱਚ ਲਿਖੋ**

**(2X4=8)**

- ਰਾਜ ਦੀ ਬੇਟੀ ਨੇ ਕਿੰਨੇ ਰੁਪਏ ਮੰਗੇ ਅਤੇ ਕਿਉ ?
- ਅਕਬਰ ਨੇ ਗੁਰੂ ਦੇ ਲੰਗਰ ਵਿੱਚ ਜਾ ਕੇ ਕੀ ਵੇਖਿਆ?
- ਮਹਾਤਮਾ ਬੁੱਧ ਦਾ ਪਾਲਣ ਪੋਸ਼ਣ ਕਿਸ ਦੁਆਰਾ ਕੀਤਾ ਗਿਆ ?
- ਲੇਖਕ ਨੂੰ ਆਪਣੇ ਵਿੱਚ ਕੀ-ਕੀ ਕਮੀਆਂ ਲੱਗਦੀਆਂ ਸਨ?
- ਸ਼੍ਰੀ ਗੁਰੂ ਗੋਬਿੰਦ ਸਿੰਘ ਜੀ ਵਲੋਂ ਬਖਸ਼ੇ ਪੰਜ ਕਕਾਰਾਂ ਦੇ ਨਾਮ ਲਿਖੋ।

**5. ਹੇਠ ਲਿਖੇ ਪ੍ਰਸ਼ਨਾਂ ਵਿੱਚੋਂ ਕਿਸੇ ਇੱਕ ਦਾ ਆਪਣੇ ਸ਼ਬਦਾਂ ਵਿੱਚ ਉੱਤਰ ਦਿਓ: (3x1=1)**

- ਲੇਖਕ ਹਰੇਕ ਫੋਟੋ ਵਿੱਚ ਬੁੱਲ੍ਹ ਦਬਾ ਕੇ ਰੱਖਣ ਦਾ ਕੀ ਭੇਤ ਦੱਸਦਾ ਹੈ  
ਜਾਂ

- ਜਦੋਂ ਸਿਧਾਰਥ ਮਹੱਲ ਤੋਂ ਬਾਹਰ ਗਏ ਤਾਂ ਉਹਨਾਂ ਨੇ ਕਿਹੜੇ ਕਿਹੜੇ ਦ੍ਰਿਸ਼ ਦੇਖੇ ਅਤੇ ਉਸ ਦਾ ਉਹਨਾਂ ਦੇ ਮਨ ਉੱਤੇ ਕੀ ਪ੍ਰਭਾਵ ਪਿਆ ?

**6. ਖਾਲੀ ਸਥਾਨ ਭਰੋ:-**

**(1X3= 3)**

- ਗੁਰੂ ਗੋਬਿੰਦ ਸਿੰਘ ਜੀ \_\_\_\_\_ ਦੀ ਨੂੰ ਜੋਤੀ ਜੋਤ ਸਮਾਏ।
- ਇਸ ਦੇ ਬੁੱਲ੍ਹ ਤਾਂ ਆਪਣੀ ਬੀਬੀ ਵਾਂਗੂੰ \_\_\_\_\_ ਹਨ ।
- ਮਹਾਤਮਾ ਬੁੱਧ ਦੇ ਬਚਪਨ ਦਾ ਨਾਮ \_\_\_\_\_ ਸੀ ।

**7. ਹੇਠਾਂ ਦਿੱਤੇ ਸ਼ਬਦਾਂ ਵਿੱਚੋਂ ਕਿਸੇ ਚਾਰ ਦੇ ਅਰਥ ਲਿਖੋ:-**

**(1x4=4)**

ਸਰਬੰਸ, ਸਾਂਵਲਾ, ਤਪੱਸਿਆ, ਉਪਹਾਰ, ਪ੍ਰਥਾ

**8. ਹੇਠਾਂ ਲਿਖੇ ਸ਼ਬਦਾਂ ਵਿੱਚੋਂ ਕਿਸੇ ਪੰਜ ਦੇ ਵਾਕ ਬਣਾਉ:-**

**(1x5=5)**

ਮਿਹਰਬਾਨੀ, ਸੁੰਦਰਤਾ, ਭਵਿੱਖਬਾਣੀ, ਗੁਰਪੁਰਬ, ਉਪੇੜ-ਬੁਣ, ਮਹਿਸੂਸ

**9. ਪਾਠ ਪੁਸਤਕ ਤੇ ਅਧਾਰਿਤ ਵਿਆਕਰਨ ਭਾਗ:-**

**(3x4=12)**

**ਕੋਈ ਚਾਰ ਭਾਗ ਹੱਲ ਕਰੋ:-**

I. ਹੇਠ ਲਿਖਿਆਂ ਸ਼ਬਦਾਂ ਦੇ ਦੋ ਦੋ ਸਮਾਨਅਰਥਕ ਸ਼ਬਦ ਲਿਖੋ:-

- ਫੋਟੋ
- ਸਾਥੀ
- ਬੁਲੰਦੀ

II. ਦਿੱਤੇ ਗਏ ਸ਼ਬਦਾਂ ਨੂੰ ਸੁੱਧ ਕਰਕੇ ਲਿਖੋ:-

- ਪਰਬੰਧ
- ਸਿੱਦਾ
- ਵਿਸ਼ਬ

III. ਹੇਠ ਲਿਖੇ ਮੁਹਾਵਰਿਆਂ ਦੇ ਅਰਥ ਲਿਖੋ :-

- ਉੱਚਾ ਨੀਵਾਂ ਬੋਲਣਾ:-
- ਅੱਤ ਚੁੱਕਣੀ:-
- ਇੱਟ ਕੁੱਤੇ ਦਾ ਵੈਰ:-

IV. ਹੇਠਾਂ ਲਿਖੇ ਕਿਰਿਆ ਵਿਸ਼ੇਸ਼ਣ ਸ਼ਬਦਾਂ ਦੇ ਸਾਹਮਣੇ ਉਹਨਾਂ ਦੀ ਕਿਸਮ ਲਿਖੋ :-

- ਸ਼ਾਮ, ਅੱਜ, 3ਵਜੇ:-
- ਇਸ ਲਈ, ਕਿਉਂਕਿ, ਤਾਂ ਕਿ:-
- ਛੇਤੀ-ਛੇਤੀ, ਹੌਲੀ-ਹੌਲੀ, ਜਲਦੀ:-

V. ਬਹੁਤੇ ਸ਼ਬਦਾਂ ਦੀ ਥਾਂ ਇੱਕ ਸ਼ਬਦ ਲਿਖੋ:-

- ਆਗਿਆ ਦਾ ਪਾਲਣ ਕਰਨ ਵਾਲਾ:-
- ਜਿਹੜਾ ਹਰ ਥਾਂ ਮੌਜੂਦ ਹੋਵੇ:-
- ਸਭ ਦੇ ਮਨਾਂ ਨੂੰ ਪਿਆਰਾ ਲੱਗਣ ਵਾਲਾ:-

**10. ਵਿਵਹਾਰਿਕ ਵਿਆਕਰਨ:-**

**(2x6=12)**

**ਹੇਠ ਲਿਖਿਆਂ ਵਿੱਚੋਂ ਛੇ ਪ੍ਰਸ਼ਨ ਕਰੋ**

- ਸਥਾਨ ਵਾਚਕ ਕਿਰਿਆ ਵਿਸ਼ੇਸ਼ਣ ਦੀ ਪਰਿਭਾਸ਼ਾ ਉਦਾਹਰਨਾਂ ਸਹਿਤ ਲਿਖੋ।
- ਹੇਠ ਲਿਖਿਆਂ ਸ਼ਬਦਾਂ ਦੀ ਵਰਤੋਂ ਕਰਦੇ ਹੋਏ ਦੋ ਦੋ ਅਗੇਤਰ ਬਣਾਓ:-
  - ਕਮ :-
  - ਨਿਰ:-

**Q7. Short Question Answers: (Do any 7)****(2X7=14)**

1. What is topology?
2. What is Gateway?
3. What do you mean by a layer?
4. Write the names of any four selection tools.
5. What is the use of Ruler Tool in Photoshop?
6. What is the purpose of ALINK attribute?
7. What is Big Data?
8. Describe LAN.

**Q8. Application Based Questions ( Do any 4) (1.5X4=6)**

1. Sumit wants to set up a network for his organisation. He wants to use a topology in which all nodes are connected in a circular path. Which topology should he choose?
2. Nikhil visited as Zoo where he saw a variety of birds and animals. He captured a few photographs with a camera. In one photo, he is feeding the birds with other tourists. Which tool would you suggest to him to cut out his photo from the whole photo?
3. Divya was working on a picture in Photoshop without copying it and unknowingly edited that image by using different tools. The original image was destroyed by this act and she was unable to rectify it. What do you suggest to protect the original image?
4. Divya wants to add some images on the web page. Which tag should she use to do this?
5. Aaha is looking for a tool to create a sunrise sky effect. Which option will you suggest, where he can mix two or more colors to get that effect?

**Q9. Long Question Answers: (Do any 5)****3X5=15**

1. What is the difference between a web page and a website?
2. What is the role of Slice Tool when we are talking about a website?
3. Why Spot Healing Brush Tool is called as texture replacement tool?
4. Write HTML code to add audio in a web page.
5. Explain any two advantages of AI.
6. Explain any two real life usages of NLP.

**Bhagwan Mahaveer Public Senior Secondary Sch****Class 8<sup>th</sup> S (2023-24)****Subject: Artificial Intelligence****Term-I****M.M 80****Q1. MCQ:****(1X7=**

1. Which of the following computer network spans across city?  
a) LAN  
b) WAN  
c) MAN  
d) CAN
2. What does SMTP stands for?  
a) Simple Mail Transfer Protocol  
b) Simple Message Transfer Protocol  
c) Simple Mail Transport Protocol  
d) System Mail Transfer Protocol
3. Which of these tools helps you to insert text in the Photoshop document?  
a) Paint Bucket Tool  
b) Type Tool  
c) Pencil Tool  
d) Brush Tool
4. Which tool helps in putting textures as the background on Canvas?  
a) Pattern Stamp Tool  
b) Stamp Tool  
c) Sponge Tool  
d) Blur Tool
5. It is a highlighted text or image which when clicked takes to another webpage.  
a) Anchor  
b) Tag  
c) Hyperlink  
d) Table
6. What is Artificial Intelligence?  
a) Playing a game on computer  
b) Making a machine intelligent  
c) Programming on machine with your own intelligence  
d) Putting your intelligence in machine
7. Which feature of word processor is based on NLP?  
a) Spell Check  
b) CV  
c) Human  
d) Big Data

**Q2. Fill in the blanks:****1X7=7**

1. \_\_\_\_\_ is a set of rules that governs the communication between computers on a network.
2. \_\_\_\_\_ is a protocol used to send e-mail messages over the internet.
3. Pixels are the \_\_\_\_\_ on the computer screen.
4. Extension of Photoshop file is \_\_\_\_\_.
5. The \_\_\_\_\_ panel shows the numeric value of the color.
6. The \_\_\_\_\_ tag is used to link two webpages.
7. \_\_\_\_\_ have the tendency to get bored while performing repetitive tasks.

**Q3. Write True/ False:****1X7=7**

1. In Bus topology, all the nodes are connected to a single common path.
2. Gradient background can be created with the help of the Paint Bucket Tool.
3. NLP proves to be quite useful in voice text messaging and virtual assistants.
4. With the help of Hand Tool, we can even rotate the canvas.
5. The default colour of the visited link is blue.
6. FORM tag is used to create the form boundary on the webpage.
7. Pen Tool can create straight and curved lines, remove objects, design shape, etc.

**Q4. Write the full form of the following: (Do any 7) 1X7=7**

- |        |         |         |        |
|--------|---------|---------|--------|
| 1) WAN | 2) HTTP | 3) HTML | 4) URL |
| 5) USB | 6) ISP  | 7) GUI  | 8) NLP |

**Q5. Write the shortcut keys for the following. (Do any 7)****(1X7=7)**

1. To create a new workbook
2. To save a workbook
3. To select the entire worksheet
4. To undo an action
5. To repeat the last action
6. To add a new slide
7. To move to the previous cell.
8. To switch between different open presentations.

**Q6. Very short Questions. (Do any 10)****1X10=10**

1. Deepak wants to setup a server which manages all the network traffic. What type of server does he want to setup?
2. Name the Network Topology in which Central nodes act as a hub.
3. Which selection tool works like a pencil?
4. In the color Replacement Tool, which option helps in selecting the range of color and replacing it with the foreground color?
5. Which tool is used to make the image hazy?
6. Which tool is used to remove the background of an image?
7. What does HREF stand for?
8. Define frames.
9. Which technology will be used to track player movements in tennis?
10. Name the sub-field of AI which helps in communication between human and computer in natural language?
11. In which technology every node is connected to each other node.

35) The length and breadth of a rectangle are in the ratio 4:3.

If its perimeter is 154 cm, find its length and breadth.

36) Rashmi has a road map with a scale of 1 cm representing 18 km. She drives on the road for 72 km. What would be her distance covered on the map?

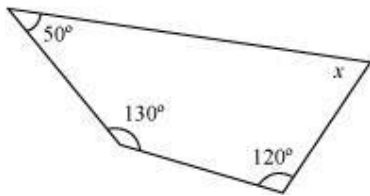
**Section- D**

**(4×5=20)**

37) In a quadrilateral ABCD, the measure of the three angles at A, B & C of the quadrilateral are  $110^\circ$ ,  $70^\circ$  and  $80^\circ$  respectively. Find the measure of the 4<sup>th</sup> angle?

**Or**

37) Find the angle measure  $x$  in the following figures.



38) The marked price of a particular water cooler is ₹4650. The shopkeeper proposes an off-season discount of 18% on it. Find its selling price.

39) Sachin bought a pair of Reebok shoes at a sale of 25%. If the amount he paid was Rs 2700, find the marked price.

**Or**

39) There are 24% of boys in a school. If the number of girls is 456, find the total number of students in the school.

40) A car travels 14 km in 25 minutes. Find out how far the car can travel in 5 hours if the speed remains the same?



**Bhagwan Mahaveer Public Senior Secondary School**

**Class 8<sup>th</sup> S (2023-24)**

**Subject : Mathematics**

**Term-I**

**M.M 8**

**Note- All questions are compulsory.**

**Section - A**

**(1×20=20)**

**Multiple choice questions**

1) The associative property is applicable to:

- A. Addition and subtraction      B. Multiplication and division  
C. Addition and Multiplication      D. Subtraction and Division

2) Each of the angles of a square is:

- A. Acute angle      B. Right angle  
C. Obtuse angle      D. 180 degrees

3) The degree of  $x^2 - 5x + 2 = x^3$  is:

- A. 3      B. 2      C. 1      D. 0

4) The percentage of 1:4 is:

- A. 75%      B. 50%      C. 25%      D. 100%

5) Surface area of cube of edge 'a' is:

- A.  $4a^2$       B.  $6a^2$       C.  $3a^2$       D.  $a^3$

**Fill ups:-**

6) The perimeter of a square and its side is in..... proportion

- a) Direct proportion      b) Indirect proportion

7) 1cm = ..... millilitres.

- a) 100      b) 10      c) 1000      d) 10000

8) The full form of VAT is

- a) Value at tax      b) Value our tax  
c) Value added tax      d) Value on tax


9) The sum of the measures of all the four angles of a quadrilateral is.....

- a) 180 degree      b) 360 degree  
c) 540 degree      d) 720 degree

10) The standard form of a linear equation in one variable is

- a)  $ax+b+c=0$       b)  $ax^2+b=0$   
c)  $ax+b=0$       d)  $ax^3+bx^2+cx+d=0$

- 11) If the number of books is tripled, then their cost increased..... times.  
 a) double    b) tripled    c) four times    d) none of these
- 12) The diagonal of a rhombus bisect each other at.....  
 a) 90 degree    b) 180 degree
- 13) The diagram has the shape of a .....



- a) Triangle    b) Trapezium    c) Rhombus    d) Square

**Say true or false :-**

- 14) Commutative property holds for subtraction.  
 15) Is  $2x-4=6$  a linear equation in one variable ? (T/F)  
 16) Scalene triangle is a regular polygon. (T/F)  
 17) Write the formula of compound interest.  
 18) Write the area of square of side length 4cm.  
 19) Find the value of  $x$  in  $\frac{x}{20} = 100$ .  
 20) Find  $x$  in  $12x - 14x = 56$

**Section -B (2×8=16)**

- 21) If  $x$  and  $y$  vary inversely with respect of each other such that  $x = 15$  when  $y = 6$ . Find the value of  $x$  when  $y = 15$ .  
 22) Represent  $\frac{-2}{7}$  on the number line.  
 23) Check whether the linear equation  $3x + 5 = 11$  is true for  $x = 2$ .  
 24) If the exterior angle of a regular polygon is 45 degree. Find the number of sides?

**Or**

- 24) What are the properties of square?  
 25) Evaluate 20 % of 400.

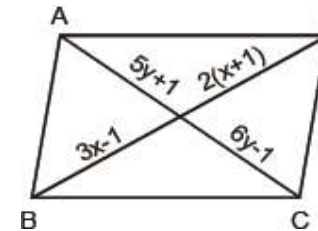
- 26) The area of a rectangle is  $544 \text{ cm}^2$ . If its length is 32 cm, find its breadth.

**Or**

- 26) If the lengths of the diagonals of a rhombus are 16 cm and 12 cm, find its area.  
 27) Find the value of  $x$  in  $9x + 5 = 4(x - 2) + 8$   
 28) What properties, the following expressions show?  
 (i)  $\frac{2}{3} + \frac{4}{5} = \frac{4}{5} + \frac{2}{3}$     (ii)  $\frac{1}{3} \times \frac{2}{3} = \frac{2}{3} \times \frac{1}{3}$

**Section - C (3×8=24)**

- 29) Find the sum of additive inverse and multiplicative inverse of 7.  
 30) Find  $\frac{8}{x} = \frac{5}{x-1}$   
 31) Find value of  $x$  and  $y$  in the following figures.  
 (i) where ABCD is a parallelogram.



- 32) What amount Harish has to pay at the end of 3 years on sum of ₹40,000 at an interest of 16% compounded annually

**Or**

- 32) Find the cost price when: SP = ₹34.40 and Gain =  $7 \frac{1}{2} \%$   
 33) Find the height of a cuboid whose base area is  $18 \text{ cm}^2$  and volume is  $900 \text{ cm}^3$ .

**Or**

- 33) The area of a circle is  $616 \text{ cm}^2$ . Find its diameter and circumference.  
 34) A machine in a soft drink factory fills 840 bottles in six hours. How many bottles will it fill in five hours?

**Or**

- 34) If 15 workers can build a wall in 48 hours. How many workers will be required to do the same work in 30 hours?

**Section C (Attempt any six)**

**Short Answer Questions**

**(3×6=18)**

1. How do leguminous plant increase soil fertility? (3)
2. a) What is plastic? (1)  
b) Write any two uses of plastics. (2)
3. a) List two uses of coal. (2)  
b) Why do we not use coal gas as a cooking fuel? (1)
4. a) What is migration ? (1)  
b) Why do animals migrate ? State two reasons. (2)
5. Draw a diagram to show the formation of an image of a point object on a plane mirror. (3)
6. a) Define Pollutant (1)  
b) Give two examples of pollutant. (2)
7. Differentiate between thermosetting plastic and thermoplastic. List three differences with example. (3)

**Section D (Attempt any four)**

**Long Answer Questions**

**(4×4=16)**

1. The process by which spoilage of food is prevented using chemical or physical methods is called food preservation.  
A) Which chemical is used as food preservative (1)  
B) How is food preserved by freezing (1)  
C) Heating prevents spoilage of food. Explain (1)  
D) Give two advantages of food preservation (1)
2. A) Is it correct to call petroleum and natural gas fossil fuel? Justify your answer (2)  
B) Give any two alternatives of the fuels that we use daily (2)



**Bhagwan Mahaveer Public Senior Secondary School**

**Class 8<sup>th</sup> S (2023-24)**

**Subject : Science**

**Term-I**

**M.M**

**Section A**

**All questions are compulsory**

**MCQs**

**(1×8=8)**

1. Which of the following is called 'Black Gold' ?  
a) Iron b) Magnesium c) Petroleum d) Gold
2. The illegal hunting of wild animals for commercial use is called \_\_\_\_\_.  
a) Reforestation b) poaching c) conservation d) intrus
3. Animals are hunted for trading their  
a) skin b) fur c) tusk d) all of the
4. Which one of the following ways is not used to reduce friction?  
a) polishing b) lubricating c) using sand d) using ball bearing
5. Cyclists normally bend their body forward while cycling in order to  
a) reduce their weight b) reduce air drag  
c) feel comfortable d) reduce their speed
6. How many images are obtained when two plane mirrors are arranged parallel to each other ?  
a) one b) infinite c) two d) zero
7. The white marble of the Taj Mahal is turning slightly yellow in recent times which one of these factors have contributed towards the yellowing of the marble ?

a) proximity to Yamuna river

b) presence of smog

c) proximity to Mathura oil refinery

d) Prolonged exposure to sunlight

8. \_\_\_\_\_ bacteria is present in curd

a) *Lactobacillus*

b) *Streptococcus*

c) *Vibrio*

d) *Escherichiacoli*

**Fill in the blanks**

**(1×8=8)**

1. The ability of one's body to resist a disease is known as \_\_\_\_\_.

2. Cotton fibre is a polymer made up of \_\_\_\_\_.

3. Natural fibres like \_\_\_\_\_, wool and silk absorb a lot of water so they do not dry out rapidly.

4. Coke contains \_\_\_\_\_ % carbon.

5. Athletes wear spiked shoes to \_\_\_\_\_ friction.

6. Water that is suitable for drinking is called \_\_\_\_\_.

7. The rainwater containing large amount of dissolved acids is called \_\_\_\_\_.

8. The frictional force exerted by fluid is called \_\_\_\_\_.

**True/ False**

**(1×4=4)**

1. Plastics are non biodegradable substances.

2. CNG is non polluting fuel used in vehicles.

3. Increase in the concentration of carbon dioxide is not a leading cause of global warming.

4. Lubricants are the substances that reduce friction.

**Very Very Short Question Answers**

**(1×10=10)**

1. Name the antibiotic and its source discovered by Alexander Fleming.

2. Which fibre is also called artificial silk ?

3. Electrical switches are made by which form of plastic?

4. Who published the Red data Book?

5. Are dinosaurs endangered or extinct ?

6. Define friction.

7. What is dispersion of light?

8. List four food items rich in vitamin A.

9. Why is chlorine added to filtered water before supplying it?

10. Name three Greenhouse gases.

**Section B(Attempt any Eight)**

**Very Short Question Answers**

**(2×8=16)**

1. What is 5 – R principle (2)

2. Why does petroleum float on water? (2)

3. A) What are exotic species? (1)

B) Give two examples of exotic species. (1)

4. State two advantage of maintaining the Red Data book. (2)

5. What is the specific shape given to boats and ships? How is it useful ? (2)

6. Give one example of each

a) Sliding friction (1)

b) Rolling friction (1)

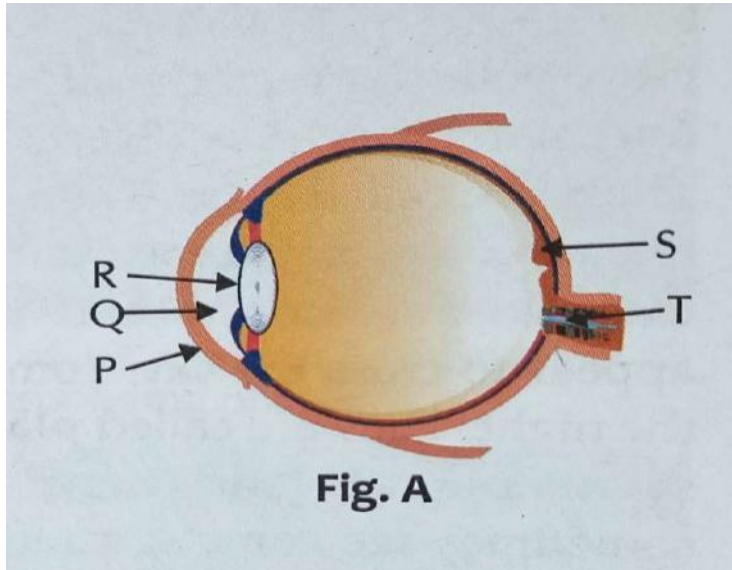
7. State the Laws of Reflection (2)

8. Name and define the process that enables us to perceive motion in cartoon films. (2)

9. a) What are fossil fuels? (1)

b) How do fossil fuels cause Air Pollution? (1)

3. Observe the diagrams of the human eye given in figure A.



A) Label the parts P, Q, R, S and T (2)

B) What is the role of rods and cones in the eye (1)

C) What is the power of accommodation of an eye (1)

4. List any two methods to control –

A) Air pollution (2)

B) Water pollution (2)

5. A) What is a vaccine (2)

B) How does a vaccine work (2)



M M : 80

Time allowed:3hr

Q1.Tick  the correct answer.

( 1×10=10)

1)James Mill was a

- a) political Advisor
- b) Hardcore imperialist
- c) Historian
- d) Scottish Economist

2) The Lok Sabha is usually elected once every

- a) two years
- b) three years
- c) Four years
- d) Five years

3) Leaders and reformers wrote to

- a) Express their feelings
- b) Organise information
- c) Spread their ideas
- d) Communicate complex Informationclearly.

4) Vasco da Gama was a

- a) Dutch sailor
- b) French explorer
- c) British trader
- d) Portuguese sailor

5) The constitution plays an important role in

- a) Undemocratic countries
- b) Monarchy government
- c) Democratic countries
- d) None of the above.

6) Which one of the following methods is most appropriate to check soil erosion on Steep slopes?

- a) Embankments
- b) Croprotation
- c) terrace cultivation
- d) Cover crops

7) The kalamkari print was created by theweavers of

- a) Madhyapadesh
- b) Andhra Pradesh
- c) Uttar Pradesh
- d) Arunachal pradesh

8)Rosa parks' refusal to give up her seat toa white man sparked off which movement In the USA?

- a) Anti -slavery Movement
- b) Egalitarian Movement
- c) Civil Rights Movement
- d) Feminine Movement

9) Punjab and Haryana share a common high court at

- a) Chandigarh
- b) Delhi
- c) Ambala
- d) patiala

10)Right to Equality in our constitution hasabolished the practice of

- a) conferring titles
- b) Untouchability
- c) Sati
- d) none of the above

Q2.State whether the following statements are true or false. (1×5=5)

1. The Parliament is the most important symbol of democracy .
- 2.Time and technology are two important factors that can change Substances into resources .
- 3.The constitution of independent India laiddown the principle of universal adult franchise.
4. There were two main system of indigo cultivation -nij and ryoti.
5. Domestic Violence Act, 2005 addresses all issues related to women.

Q3.fill in the blanks.

( 1×5=5)

1. Article..... States that the state cannot discriminate against a citizen on the basis of religion, race, and sex etc.

2 Indigo was preferred as a dye because it produced a rich Colour

4. Government Schools cannot promote any..... Religion in their morning prayers.
5. The most important aspect of secularism is its separation of religion from..... Power.

**Q.4. Match the following columns**

**(1×5=5)**

- |                        |                                       |
|------------------------|---------------------------------------|
| 1. Lord Mountbatten    | A. Protection of ecological integrity |
| 2. Battle of Plassey.  | B. Fundamental Rights                 |
| 3. Rajya Sabha.        | C. Last Viceroy of India              |
| 4. Indian Constitution | D. 1757                               |
| 5. National park.      | E. Councils of states.                |

**Q5. Very short Answer type question (Attempt any ten)**

**(1×10 = 10)**

1. What is the full form of FIR ?
2. Which bodies make laws?
3. Who became the Nawab of Bengal When Alivardi Khan died?
4. Name the three presidency cities
5. Give two examples of resources that have an economic value.
6. List out any four uses of Land.
7. Who was the President of the Constituent Assembly ?
8. Who was Lord Cornwallis?
9. Write the names of any two non secular countries?
10. What is a Mahal?
11. Which body can cancel unpopular law?

**Q.6 Short Answer type questions (Attempt any Seven )**

**(2\*7=14)**

1. How are forests useful to man?
2. Differentiate between biotic and abiotic Resources ?
3. Name the three different levels of courts in our country ?
4. Who was James Mill? How did he periodise Indian History?
5. How did the Bengal economy face deep crisis even after the company got the Diwani rights?
6. What is meant by Secularism?
7. Secularism in India promotes certain values like equality. Explain other values associated with secularism?
8. Define the term 'puppet ruler'? In which way did the British want Sirajuddaulah to become a 'puppet ruler'?
9. What was the attitude of the Constituent Assembly in regard to application of law in free India?

**Q7. Long Answer type questions ( Attempt any six)**

**(3\*6=18)**

1. You are a 'soil conservation' expert posted in an area where there has been much degradation of soil. Suggest some measure to stop soil degradation?
2. Explain 'justice delayed is justice denied'.
3. How does a bill become a law?
4. Between the battle of Plassey and battle of Buxar which one had more far reaching effects ?
5. Differentiate between Fundamental Rights and fundamental Duties.
6. How can we conclude India is a secular state.
7. What are the chief features of the Indian Constitution ?

**Q 8. put a cross mark(×) against a wrong statement given below. (1\*3=3)**

- 1) Some principles of Sustainable development are
- a) Respect and care for all forms of life.
  - b) Improving the quality of human life.
  - c) Conserving earth's vitality and diversity.
  - d) Not caring for the Environment.
- 2) a) The joint sitting of two houses is called by president.  
b) The Prime Minister of India is the leader of ruling party in the Lok Sabha.  
c) The right to vote is given to all adults who attained the age of 20.  
d) The Parliament consists of President, Rajya Sabha, and Lok Sabha
- 3) a) Warren Hastings became the first Governor General of Bengal.  
b) The national museum is located in Kolkata.  
c) Medieval was a term used to describe the middle ages.  
d) James Rennell produced the first map of Hindustan .

**Q9. Picture based questions**

**( 1\*3=3)**

- 1) The person in the picture given below is of.....



- 2) Depicted in the picture given below is Robert Clive accepting the..... Of Bengal from the Mughal ruler in 1765.



**3 ) Identify the picture**



**Q10. Case study Based questions( 1×2=2)**

These resources are those which have a limited stock. Once the stocks are exhausted it may take thousands of years to be renewed or replenished. Since this period is much more than human life spans, such resources are considered non Renewable .Coal and petroleum and natural gas are some examples. The distribution of natural resources depends upon number of physical factors like terrain, climate, and altitude. The distribution of resources is unequal because these factors differ so much over the earth.

Q1. What are the physical factors that affect the distribution of natural resources?

Q2 The distribution of resources is unequal. Justify the statement.

**Q11. Map Based questions****(1\*5=5 )**

1). Mark the following state with their capital in the Map.

a) Rajasthan

2.) Mark any two soils in the Map.

3) Mark the place Where Battle of Buxar was fought.

4) Mark the Tropical Evergreen Forests.



## भगवान महावीर पब्लिक सीनियर सेकेंडरी स्कूल बंगा

कक्षा - आठवीं (Term - I)

विषय - हिंदी

कूल अंक-80

### 1-अपठित गद्यांश को पढ़कर पूछे गए प्रश्नों के उत्तर दीजिए।

(5)

धर्मनिरपेक्षता की भावना और नीति का विकास विज्ञान और लोकतंत्र की भावनाओं के विकास के साथ हुआ है। इसके मूल में मानवतावादी भावनाएं ही काम करती दिखाई देती हैं। मानव को अपने विश्वास और मूल्यों के साथ जीवन जीने का पूर्ण अधिकार है। यकीन ही धर्मनिरपेक्षता का मूल आधार है। प्रायः सभी जनतंत्र और प्रजातंत्रीय देश इसी मूल सिद्धांत के आधार पर चलकर प्रगति कर रहे हैं सभी धर्मावलंबियों के प्रति समानता का व्यवहार करना ही धर्म-निरपेक्षता का मूल आधार है।

क- धर्मनिरपेक्षता भावना और नीति का विकास किसकी भावनाओं के विकास के साथ हुआ है?

ख -मानव को क्या अधिकार हैं?

ग- हमें सभी धर्मावलंबियों के प्रति समानता का व्यवहार क्यों करना चाहिए ?

घ- प्रजातंत्रीय शब्द में कौन सा प्रत्यय है?

ड- (उन्नति) शब्द का पर्यायवाची गद्यांश में से ढूंढ कर लिखिए?

### 2-निम्नलिखित गद्यांश को पढ़कर पूछे गए बहुविकल्पीय प्रश्नों के उत्तर दीजिए।

(5)

आज आदमी धन के पीछे अंधाधुंध दौड़ रहा है। पांच रुपए मिलने पर दस मिलने पर सौ और सौ मिलने पर हजार की लालसा लिए वह इस अंधी दौड़ में शामिल है। इस दौड़ का कोई अंत नहीं है। धन की दौड़ में सभी पारिवारिक और मानवीय संबंध पीछे छूट गए हैं। व्यक्ति सत्य -असत्य, उचित अनुचित, न्याय अन्याय, और अपने -पराए के भेदभाव को भूल गया है। उसके पास अपनी पत्नी और संतान के लिए भी समय नहीं। धन के लिए पुत्र का पिता के साथ, बेटी का मां के साथ पति का पत्नी के साथ झगड़ा हो रहा है। भाई -भाई के खून का प्यासा है। धन की लालसा व्यक्ति को जधन्य से जधन्य कार्य करने के लिए उकसा रही है इस लालसा का ही परिणाम है की जगह-जगह हत्या, लूट, अपहरण और चोरी डकैती की घटनाएं बढ़ रही है। इस रोगी मनोवृत्ति को बदलने के लिए हमें हर स्तर पर प्रयत्न करने होंगे, जिनमें अपने मन पर अंकुश लगाना और लोग स्वार्थ तथा असंतोष की वृत्तियों को काबू में रखना शामिल है।

#### 1-आज आदमी किस अंधी दौड़ में शामिल है?

क-धन की                      ख-प्रतिष्ठा की                      ग-सुख की।                      घ-ऐश्वर्या की

#### 2-इस दौड़ का मानवीय संबंधों पर क्या प्रभाव पड़ रहा है?

क- व्यक्ति स्वार्थी हो गया है।                      ख- पारिवारिक और मानवीय संबंध पीछे छूट गए हैं।  
ग- व्यक्ति अहंकारी और लालची हो गया है।                      घ- उसकी शांति और संतोष की भावना समाप्त हो गई है।

#### 3-इस अंधी दौड़ के कारण व्यक्ति किन- किन बातों को भूल गया है।

क-सत्य -असत्य, धर्म और अधर्म तथा अपने पराये के भेदभाव को  
ख-पाप- पुण्य, सच्चाई- ईमानदारी तथा सत्य-असत्य के भेदभाव को  
ग-उचित -अनुचित, न्याय -अन्याय तथा धर्म अधर्म के भेदभाव को।

#### 4-धन की लालसा के क्या दुष्परिणाम हो रहे हैं?

क-अपराधिक घटनाएं                      ख-समाज में असंतोष                      ग -घृणा एवं शत्रु का वातावरण

#### 5-मानवी शब्द में मूल शब्द और प्रत्यय क्या है?

क-मान+वीय।                      ख-मानवी +य                      ग- मानव +इय।                      घ-मानव+ईय

#### 2-निम्नलिखित शब्दों के अर्थ लिखें।

(6)

पाखंड, काल, अनमनी, बाध्य, सारथी, पेशगी, धारणा

**3-निम्नलिखित प्रश्नों के उत्तर संक्षेप में दीजिए।**

**(1×4=4)**

क- नमक का दरोगा कहानी के माध्यम से बच्चों को क्या सीख मिलती है?

ख- बूंद मोती कैसे बन गई?

ग- जब मैं पहली पुस्तक खरीदी पाठ के आधार पर बताइए कि "ट्रस्टी द रंग" किताब में किसका वर्णन था?

घ- इस एकांकी में किसने अर्जुन के मन में सोए हुए विवेक को जगाया?

**4- निम्नलिखित प्रश्नों के उत्तर विस्तार से दीजिए।**

**(2×4=8)**

क- साइकिल की सवारी पाठ के आधार पर बताइए कि लेखक की पत्नी तांगे पर कहां घूमने निकली थी। और उसके सामने क्या घटना घटी?

ख- "उठो पाठ गांडीव संभालो" कहानी में आत्मा के बारे में क्या बताया गया है?

ग- "जब मैंने पहली पुस्तक खरीदी" पाठ में लेखक को अंग्रेजी में सर्वाधिक अंक लाने पर कौन सी दो पुस्तकें मिली और उन में किन विषयों की जानकारी थी?

घ- ईमानदार होने पर भी वशीधर को नौकरी से क्यों हटाना पड़ा ? पाठ के आधार पर अपने शब्दों में लिखिए?

ङ- पाठ के माध्यम से बताइए कि लोग कब और क्यों झिझकते हैं क्या उनका ऐसा करना उचित है?

**5- पाठ्यपुस्तक संबंधी व्याकरण:। निर्देशानुसार उत्तर दो (कोई 7 भाग करो)**

**(2×7=14)**

क- विपरीतार्थक शब्द लिखिए।

**(2)**

(i) विजय (ii) पक्ष

ख- निम्नलिखित रेखांकित शब्दों का लिंग परिवर्तन कर वाक्य बनाइए।

**(2)**

i- लेखक बहुत संकोची था

ii-हमारे लड़के ने चुपचाप ही यह विद्या सीख ली।

ग- निम्नलिखित शब्दों के दो दो पर्यायवाची शब्द लिखें।

**(2)**

1-आकाश

2- पाठशाला

घ- निम्नलिखित समास विग्रह का सामासिक शब्द लिखिए।

**(2)**

(i) कमल के समान नयन .....

(ii) चार राहों का समूह .....

ङ- निम्नलिखित बहुविकल्पीय प्रश्नों के सही उत्तर लिखिए।

**(2)**

1- अलोपीदीन कैसे व्यक्ति थे?

क-धनलोलुप।

ख-देशभक्त

ग- स्वाभिमानी

घ- भ्रष्टाचारी

2- महाभारत के युद्ध में अर्जुन के सारथी कौन थे?

क-शल्य।

ख-श्री कृष्णा

ग-शकुनी।

घ-बलराम

**3-साइकिल सीखने के एवज में उस्ताद को कितनी फीस देनी पड़ी?**

क-दस रुपए

ख-बीस रुपए

ग-पच्चीस रुपए।

घ-पचास रुपये

**4-समाचार पत्रों में किस प्रकार के समाचार भरे रहते हैं।**

क-ठगी।

ख-डकैती, चोरी

ग- तस्करी।

घ-आस्था, दर्शन

**ज-निम्नलिखित वाक्यों के काल निर्देशानुसार बदलिए।**

**(2)**

क-मोहन बाजार गया था। (वर्तमान काल)

ख-नए कपड़े सिल रही है। (भूतकाल)

**झ- निम्नलिखित उर्दू शब्दों का समानार्थी हिंदी में शब्द लिखिए।**

**(2)**

क-शुरुआत.....

ख- ज़रूरी .....

**छ- निम्नलिखित वाक्य में उचित विस्मयादिकबोधक शब्द लिखिए।**

क-.....मुझे सद्बुद्धि दो

ख-.....यह कितनी गंदगी है

**6- व्यावहारिक व्याकरण:।**

**(2×6=12)**

**निर्देशानुसार उत्तर दीजिए (कोई 6 भाग करो)**

क-निम्नलिखित शब्दों के दो- दो अनेकार्थी शब्द लिखिए

**(2)**

i) हित

(ii) अंबर

ख-निम्नलिखित शब्दों के वर्ण -विच्छेद कीजिए। (2)

त्रिभुज, संन्यासी।

ग-दिए गए शब्दों के समस्तपदों का विग्रह कीजिए तथा समास का नाम लिखिए। (2)

i) नवरत्न (ii) यज्ञशाला

घ-निम्नलिखित शब्दों में आहट प्रत्यय का प्रयोग करते हुए भाववाचक संज्ञा बनाइए। (2)

गड़गड़ाना, चिल्लाना

ड-निम्नलिखित वाक्यों में रेखांकित पदों में कारक बताइए। (2)

i) पिताजी ने नौकर को बुलाया।.....

ii)-लड़के कुत्ते से डरते हैं।.....

च-निम्नलिखित अनेक शब्दों के लिए एक शब्द लिखें (2)

1-जो ईश्वर में विश्वास रखता हो.....

2-युग का निर्माण करने वाला.....

छ-दिए गए वाक्यों में रेखांकित शब्दों का वचन बदलकर वाक्य को दोबारा बनाइए।

1-इस दवाई को बच्चे से दूर रखो।

2-नदी में पानी भर जाने से सड़क पर भी पानी भर गया।

7-निम्नलिखित मुहावरे का अर्थ लिखकर वाक्य में प्रयोग कीजिए। (2×3=6)

1-अकल पर पत्थर पड़ना, अपनी खिचड़ी अलग पकाना, ईद का चांद होना, उड़ती चिड़िया पहचानना,

8-रचनात्मक लेखन। (20)

क- दुर्घटनाग्रस्त होने के कारण परीक्षा देने में अपनी असमर्थता प्रकट करते हुए प्रधानाचार्य को एक प्रार्थना पत्र लिखिए (5)

**अथवा**

मान लीजिए कि आपका नाम रमेश है। आपके क्षेत्र में चोरी डकैती, लूट की घटनाएं दिन- प्रतिदिन बढ़ती जा रही है इस और थानाध्यक्ष का ध्यान आकर्षित करने हेतु संपादक को पत्र लिखिए।

ख-विज्ञापन लेखन (5)

किसी आयुर्वेदिक टूथपेस्ट का एक आकर्षक विज्ञापन तैयार कीजिए।

**अथवा**

आपके अपने शहर में कपड़ों का एक नया शोरूम खुला है उसमें बिक्री हेतु आकर्षक विज्ञापन लिखिए

ग-सूचना लेखन।

आपके स्कूल में एक दिन के लिए रक्तदान शिविर केंद्र का आयोजन किया जा रहा है कक्षा दसवीं से 12वीं तक के सभी छात्रों को सूचित करते हुए एक सूचना लेखन तैयार कीजिए। (5)

**अथवा**

आपकी स्कूल में कबड्डी प्रतियोगिता का आयोजन किया जा रहा है खेल अध्यक्ष की ओर से छात्रों को सूचित करते हुए सूचना लिखिए।

घ- डायरी लेखन

आपकी वार्षिक परीक्षाएं आने वाली है अपनी मनःस्थिति का वर्णन करते हुए डायरी लेखन कीजिए। (5)

**अथवा**

मान लीजिए कि आपने पहली बार अपने स्कूल में 15 अगस्त के समारोह पर मंच संचालक की भूमिका निभाई है।

उससे होने वाले अनुभव को डायरी के रूप में लिखिए



**Section A (Reading )**

**1. Read the passage and answer the questions that follow. (8)**

1. Lifestyle diseases are the diseases associated with the way people lead their lives. These include heart diseases, diabetes, obesity, etc. Across the world, about 14.2 million people between the ages of 30 and 69 years die prematurely each year from these diseases. Undoubtedly, urbanization and medical advancement have brought about tremendous improvements in healthcare and the general standards of living. But there have been many negative implications of the changed lifestyle behaviours as well. Dealing with day-to-day struggles, we often compromise on diet, exercise, rest and relaxation, making convenient but poor choices.

2. While the toll from infectious diseases like tuberculosis, influenza and smallpox has greatly reduced, lifestyle diseases such as depression, anxiety, psycho-emotional disturbances, unsocial responses, insomnia, eating disorders, drug addiction, cardiovascular diseases, gastric ulcers, obesity, early ageing, and cancer have seen a dramatic rise. Consequently, these diseases have emerged as bigger killers than most infectious or hereditary ones.

3. Undoubtedly, technology has made our life simpler, but it has also caused a dramatic increase in pollution. This pollution of air, water, soil, noise and light has led to myriad problems. Noise pollution has led to an increase in neurotic problems, hypertension, respiratory problems and heart related diseases, while air pollution is responsible for many respiratory ailments and cancer. Water pollution has led to various water-borne diseases such as allergies, cholera, gastroenteritis and jaundice. Unhealthy food and a lack of exercise are a risk factor for various diseases.

4. In order to lead a healthy life in the present times, we must reduce the consumption of fast food, soft drinks and excessive consumption of fat. These should be replaced with cereals, vegetables, pulses, rice and milk. Physical exercise should be a part of our daily routine. We must have pollution-free zones. Over and above, we must develop a positive attitude in life. This will help us relax. We can improve our lives by reducing these diseases including the type of work we do, environmental factors that affect our living conditions, work environment, the food we eat, our exercise habits and stress.

1. What are lifestyle diseases?
2. What are the two factors that brought tremendous change improvement in healthcare and living?
3. Why should we develop a positive attitude in life?
4. What are the adverse effects of noise pollution?
5. What has been the impact of Air pollution on us.
6. Mention two healthy and two unhealthy food items.
7. Use the following words to make sentences

1. Technology
2. Disease

**2. Read the passage given below and answer carefully: (8)**

One day the old emperor Shahjahan became ill. His son Aurangzeb, who always wanted to be the emperor, put his father in a jail. Jahanara Begum, the eldest child of

share the suffering of my father. He needs me in his old age, and I shall never leave him.” Shahjahan lived in the jail for seven years and then he died. During that period, Princess Jahanara stayed with him and took care of him. After the death of her father, she returned to her own palace. She continued to live there and spent the rest of her life serving the needy and the poor. Before her death, she gave away all her money to the poor and the needy. She was highly educated and well-versed in Persian and Arabic, as well as a writer, painter and poet. Jahanara was Shahjahan’s preferred child. Legend says that once when Aurangzeb was severely sick, Jahanara took care of him. Jahanara died on September 5, 1681, at the age of 67. Upon her death, Aurangzeb gave her the posthumous title: Sahibat-uz-Zamani (mistress of age).

1. What was Aurangzeb’s aim in life?
2. Who was the eldest child of Shahjahan?
3. How many years Shahjahan spent in Jail?
4. What did Jahanara do after the death of her father.
5. When did Jahanara die?
6. What was the title that Aurangzeb gave to Jahanara?
7. Find the words in the passage which mean the same as:
  - (a) King
  - (b) Sick

### Section B

#### Grammar and writing skills

**Each question will carry 0.5 marks. Do as directed.**

**16**

**Q3.** Complete the sentences with the correct present form of the verbs given.

- 1) \_\_\_\_ (you/eat) a lot of vegetables when you're on this diet?
- 2) Fill in the blanks with future tense.

The markets \_\_\_\_ be closed on Sunday.

3) Fill in the blanks with simple past or past continuous.

1) While he \_\_\_\_ the plants, it \_\_\_\_ to rain. (Water, begin)

4) complete the sentence with passive voice of future tense.

- a. By that time, artificial food \_\_\_\_ (invent) by scientists in laboratories so food won't be a problem.
- b. Many cities \_\_\_\_ (build) underground or under the sea.

**Q4.** Fill in the blanks with demonstratives.

- a. Can you hold \_\_\_\_ bag for a moment?
- b. I want to take a photo of \_\_\_\_ mountain over there.

Match to form sentences: -

- |                                 |   |
|---------------------------------|---|
| A. In my opinion, either of the | parks would be Suitable for the concert   |
| B In my opinion, either.        | Park would be suitable for Either concert |
| In my opinion, either of the    | parks would be Suitable for the concert   |

**Q3.** Complete the following sentences.

- a. Can I give you \_\_\_\_?
  1. An advice
  2. A piece of advice
- b. What \_\_\_\_ we are having?
  1. A terrible weather
  2. Terrible weather
- c. Not all young people want to go to \_\_\_\_\_.
  1. University
  2. The university

**Q4.** Fill in the blanks by using given hints:- (Starry , Tall, high, Easy, Dark)

- a. That \_\_\_\_ man is not at all careful about his diet. That's why he is so fat.
- b. It was an \_\_\_\_\_ question.
- c. The \_\_\_\_\_ mountains, the green Lake, the chirping birds, sang the glory of king.

d. In the \_\_\_\_\_ night, the moon shone beautifully.

**Q5.** a. Underline the adverb and write down its type Change

1. Please speak softly
2. My mother seldom gets angry

b. Fill in the blanks with correct form of adverb.

3. She writes \_\_\_\_\_ ( beauty).
4. They ran \_\_\_\_\_. (Quick)

**Q6.** Choose the correct option to fill in the blanks.

a. \_\_\_\_\_ I speak to the governor, please?

1. May
2. Can
3. Will

b. The wind is cool, it \_\_\_\_\_ rain soon.

1. May
2. Can
3. Might

c. The strong \_\_\_\_\_ help the weak.

1. Must
2. Will
3. Ought to

d. I \_\_\_\_\_ feed poor people on my birthday

1. Need
2. Will
3. Dare

**Q7.** A. Fill in the blanks with suitable connectors:-

1. It has been a year \_\_\_\_\_ we met. (For/since)
2. \_\_\_\_\_ he was hungry, he waited for others to join. (But/though)
3. Seeing that/ because of his behaviour, he was often sent out of class.

**Q8.** Complete the blanks using So, Such, Too, Enough

1. He takes \_\_\_\_\_ many risks.
2. There was \_\_\_\_\_ a lot of noise from traffic.
3. It was \_\_\_\_\_ boring that I just couldn't sit there till the end.
4. I think it's big \_\_\_\_\_ for all our furniture

**Q9.** Identify simile or metaphors

1. Arya sings like a nightingale
2. Time is money.

**Q10.** Choose the correct option:-

Apple of the eye.

1. Very happy
2. Start from beginning again
3. Favourite

**Q11.** Write an email to the MLA of your locality and tell him about the poor condition of your local bus stand.

5

Or

Your school email ID is not working properly. Write an email to your school IT department and request them sort the problem.

**Q12.** Your team won inter inter-house kabaddi competition. Write a diary entry and express your feelings.

6

Or

You fought with your younger brother/ sister but later you realise your mistake. Write a diary entry.

**Q13.** Write a letter to the editor and tell them the problem of water supply in your area. You are Harsh/ Harshita, B- 79, Moti Nagar, Jalandhar.

Hints:- residents of- severe water shortage – usual problem of summer - miserable conditions of children - no response from authorities – people are fighting over water.

Write an application to the principal complaining against inappropriate behaviour of senior students. As you saw them fighting in recess time.

Hints:- noticed rude behaviour - seniors are fighting - in front of canteen- disturbs discipline - investigate the matter.

**Section C (Literature)**

**Q 14 a.** Read the extract and answer the questions:-

Do we interfere with judges decisions, not unless they want to eliminate the contestant viewers love most.

1. Who is referred to as 'we' here?
2. Why do they interfere when judges eliminate a popular contestant?

b. Fill in the blanks.

1. The writer was \_\_\_\_ to visit the town.
2. The unusual \_\_\_\_ at Coober Pedy attracted tourists

c. Correct the statement

In one of the pictures Tippi can be seen cuddling a rabbit.

c. Match correct poetic devices:+

As strong as iron. Alliteration

Parson pray.

Simile

Personification

Each question carry 0.5 marks. Do as directed.

6

b. Add preffixun/ dis/ in

\_\_\_\_ honest

\_\_\_\_ visible

\_\_\_\_ fair

\_\_\_\_ realistic

c. Make at least two new words from the letters.

Thunderclap. \_\_\_\_\_

Calligraphy. \_\_\_\_\_

d. Write whether the statement is True of false.

1. The narrator is 5 years younger than his brother \_\_\_\_
2. The elder brother was fond of sketching, kites and hockey sticks \_\_\_\_

f. Identify the repetition in given lines.

1. Crumbling doors, crumbling rafters
2. Time after time

g. Complete the chart

Verb.Noun.Adjective.

\_\_\_\_. Inspiration. Inspired

\_\_\_\_. Identify

Harm.Harm. \_\_\_\_\_

**Q 15.** Write down the meaning of words:- 6

1. Dwelling
2. Rebel
2. Might mam
3. Orphans
4. Illustrate
5. Studious

6. Eliminate

Q16. Answer any 5 questions:- 10

1. What is the role of a casting director.
2. What does the poet ask the wind not to do ?
3. Describe the dwellings in Coober Pedy.
4. How is rap used to connect to the audience?
5. How does poet describe the blacksmith
6. What do constant nagging and scolding lead to.

Q17. Answer any one question:- 3

In your opinion, are studies the only parameter to assess one's calibre?

Or

If you were a contestant in a reality show what would be your central focus?