



Bhagwan Mahaveer Public Sr Sec School, Banga
Class – 6th (2022-23)

Subject: Artificial Intelligence (JS&FS) M.M=80

1. Fill in the blanks:

[1x8=8]

1. A _____ is a collection of related web pages.
2. Margin properties allow you to set the _____ around an element.
3. An HTML document is saved with _____ extension.
4. Every property has a _____ according to which the selector is displayed.
5. The term AI was coined in year _____.
6. AI processes large amount of data using _____.
7. _____ is also known as USB modem.
8. Monetary theft from bank account linked to internet comes under _____.

2. True False:

[1x8=8]

1. The first page of website is called the main page.
2. You can use
 tag multiple times to insert multiple line breaks in web page.
3. The goal of Artificial intelligence is to replace human being.
4. G in 3G and 4G stands for gravitation.
5. A Responsible digital citizen exhibits responsible online behaviour.
6. It is necessary to log out of your account after using them for safety.
7. It is safe to mention your password in an email.
8. Self aware machine have already been developed.

3. MCQ:

[1x8=8]

1. Which of the following is not a container tag.
(a) <body> (b) <HTML> (c)

3. Which of the following is used to apply style to a particular element?
(a) internal style (b) external style (c) inline style
3. CSS stands for
(a) Class style sheet (b) Cascading style sheet (c) Cascading simple set
4. The term Artificial Intelligence was first coined by
(a) Alan Turing (b) Garry Kasparov (c) John MC Carthy
5. Which of the following is not a type of internet connection.
(a) dial up (b) broadband (c) Google Drive
6. Text written in all capital letters is considered
(a) yelling (b) singing (c) a sudden expression
7. Which of the following is a punishable offence as per cyber law?
(a) Cyberbullying (b) starting your website (c) using internet banking
8. Your digital footprint is not viewed as reference point.
(a) during school admission process
(b) for selection into University
(c) while appearing for an exam

4. Shortcut keys(Any 6):

[1x6=6]

1. To close current task
2. To rename selected item
3. Minimize all open windows
4. Print Document

5. Take help in any software
6. Take screenshot and save on clipboard.
7. Refresh page

5. Full forms (Any 6):

[1x6=6]

- | | | | |
|---------|--------|--------|--------|
| 1. HTML | 2. AGI | 3. ANI | |
| 4. URL | 5. WAP | 6. ML | 7. ANN |

6. Match the following:

[1x6=6]

1. These tags help us to explain our codes, but are ignored by the browsers	A. <style> tag
2. An external CSS file is saved with this extension.	B. Machine Learning
3. It is the tag used to apply internal style.	C. <!... comment...>
4. The ability of machines to build analytical models is called	D. Report Abuse
5. This option reports a complaint against a particular user over the platform for cyber harassment	E. Cybercrime
6. Defaming someone by posting their personal information on social media, is a form of	F. CSS

7. Very short questions(Any 8):

[1x8=8]

- Q1. What is a tag.
- Q2. It refers to the tag to which style is to be applied.
- Q3. These properties are used to modify visual appearance of the text.
- Q4. Briefly explain Computer vision domain of AI.
- Q5. Name any one Internet service provider.
- Q6. This tag marks the beginning of paragraph.
- Q7. Name the technology that offers highest speed for the mobile broadband internet.
- Q8. It is an Empty tag which adds horizontal line across a web page.
- Q9. In CSS, these properties allow you to set the value of multiple CSS properties simultaneously.

8. Short questions (Any 6):


[2x6=12]

- Q1. Define web page and website.
- Q2. What is Inline style?
- Q3. Define the term Artificial Intelligence.
- Q4. Define ANI and AGI.
- Q5. What do you mean by responsible online behaviour?
- Q6. Define digital footprint.
- Q7. What do you mean by cyberbullying?

9. Long questions (Any 6):

[3x6=18]

- Q1. Explain the tools required to create HTML document.
- Q2. Discuss HTML5 documents structure in detail.
- Q3. Explain the purpose and advantages of using CSS.
- Q4. What are the ethical issues covered in development of AI.
- Q5. Write steps for sharing files on Google Drive.
- Q6. List three essential email etiquettes.
- Q7. What etiquettes should you follow on social media?





Bhagwan Mahaveer Public Sr. Sec. School, Banga

CLASS- VI (JS and FS)

Sub : English Term - II (2022-23)

TIME: 3 Hrs.

M.M. - 80

I. Read the following passage carefully.

(8)

KICHA, THE WONDER CHEF

1. Ten-year-old Nihal Raj, the little chef from Kerala has been cooking since he was four. He has his own YouTube channel and has featured in several international shows.
2. Popularly known as "Little Chef Kicha", Nihal Raj hails from Kochi, Kerala. Born to Rajagopal Krishnan and Ruby Rajagopal, Kicha started cooking when he was very young. He would help his mother, a homemaker, in the kitchen and would ask her many questions.
3. One day, he decided to make popsicles and asked his dad to film him. His dad was impressed with Kicha's skills and instructions, and decided to upload the video on Facebook. As soon as he posted the video, he started receiving words of appreciation. Thus, he decided to start a YouTube channel in January 2015 called KichaTubeHD and uploaded the video there.
4. The videos are uploaded as and when Kicha feels like shooting. The recipes for the channel are provided by his mother, who would keep them simple and child-friendly. She ensures the recipes do not involve fire in any way and that if chopping or working with fire is called for, Kicha informs that it is done by an adult for him. Today, Kicha's channel has almost 40k subscribers and more than 100 recipes for delicious items such as oatmeal cookies, coconut payasam, rainbow idli, ice-cream and cakes.
5. As Kicha's channel started becoming popular, his father received a mail from a U.S.-based casting company asking for rights to Kicha's Mickey Mouse Mango Ice-cream. This was a USD 2,000 deal with Facebook, which acquired non-exclusive rights to the video. As soon as Facebook put up the video, Kicha and his channel gained instant recognition.
6. In September 2016, he received an invite to feature in The Ellen DeGeneres Show hosted by Ellen DeGeneres, an American comedian, television host and producer. Kicha made 'puttu', a popular breakfast in Kerala, for Ellen. In January 2020, Kicha won the Global Child Prodigy Award and was among the top 100 prodigies of the year.

1. Tick the correct option(s) for each of the following statements:

- (a) Kicha learnt cooking from
(i) his school (ii) YouTube (iii) his dad (iv) his mother
- (b) Which of the following qualities of Kicha does **paragraph 2** reveal?
(i) irritability (ii) patience (iii) curiosity (iv) helpfulness
- (c) **Two** reasons that made Rajagopal Krishnan upload Kicha's video of popsicles on Facebook were:
(i) Kicha's popsicle making skills
(ii) Kicha's interest in cooking
(iii) Kicha's way of giving instructions
(iv) Kicha's habit of helping his mother in the kitchen
- (d) **Two** safety precautions Kicha's mother takes, are:
(i) She chops the vegetables for Kicha
(ii) She creates simple and child-friendly recipes.
(iii) She posts Kicha's videos on YouTube.
(iv) As far as possible, she creates recipes that do not require any chopping or fire.
- (e) A subscriber' is someone who
(i) tastes dishes made by others
(ii) appears on TV, radio and internet shows
(iii) views, reads or listens to something regularly
(iv) writes articles for newspapers, magazines and websites etc.

2. Write 'T' if the statements are 'True' and 'F' if they are 'False':

1. According to the passage, the first dish that Kicha made was popsicles.

3. Answer the following question:

How many subscribers does Kicha's channel has?

2. Read the following passage carefully:

(8)

CAN THERE BE VACCINES AGAINST ALL DISEASES?

1. Vaccination is a very important part of family and public health. Vaccines prevent the spread of contagious, dangerous, and even deadly diseases. These include measles, polio, mumps, chicken pox, whooping cough, diphtheria and HPV.
2. A vaccine is a way to build up your body's natural immunity to a disease. This keeps you from getting and spreading the disease. Vaccines provide a build-up of antibodies before you get sick. That way, you don't have to go through the symptoms of the illness.
3. Recently, there were reports that more children were getting measles because their parents did not vaccinate them in time. Today, vaccines are available for more than 20 life-threatening diseases such as chicken pox, mumps and tetanus. Vaccines have saved the lives of millions since they were introduced. Small pox was wiped out by vaccination.
4. Vaccines are made from weakened or dead germs. When injected into a human body, these vaccines stimulate the body to form antibodies (special proteins produced by the body to fight bacteria and viruses). Thereafter, if the same kinds of disease germs enter our body, these antibodies attack the invading germs and destroy them.
5. One cannot be vaccinated against genetic disorders like haemophilia, albinism, colour blindness, and so on, as these diseases are not caused by bacteria or viruses. Scientists have identified more than 100 different viruses that can cause common cold, but a vaccine against common cold will not work because a specific antibody is effective only against a specific kind of bacterium or virus.
6. Although mankind has got vaccines against some varieties of Covid-19, the virus is mutating fast and is making the existing vaccines less effective or totally ineffective.

1. Complete the following statements by filling in each blank with one or two words only.

- (a) Measles, polio, mumps, chicken pox, whooping cough, diphtheria and HPV are examples of _____ dangerous and deadly diseases.
- (b) Vaccines build up our body's natural _____ to a disease.
- (c) Vaccines build _____ in our bodies that help us in fighting the attack of some deadly diseases.
- (d) According to some recent reports, more children were being affected by _____ because they did not get _____ in time.
- (e) An example of diseases wiped out by vaccination is _____ .

2. Complete the following statements:

- A. Genetic diseases are not treatable with the help of vaccines because _____.
- B. One reason why it is difficult to make a single vaccine for the common cold is _____.

Section-B

3. Do as directed:

(20)

I. Choose the correct verb to fill in the blanks:

- a. The orator and the statesman _____ dead. (is, are)
- b. There _____ five pens in this box. (is, are)
- c. The lady with six cats _____ in the next house. (live.lives)
- d. Gymnastics _____ very easy for Anita. (is/ are)

II. Change the following sentences from **active to passive**:

- a. Dolly is painting a picture.
- b. Raman lost his book yesterday.
- c. The children have plucked flowers.
- d. She will draw a sketch.

III. Change the following **direct** sentences into **indirect** sentences:

- a. He said, " Might is right. "
- b. John said to me, " I need your help."

6. Write a letter of apology to the H.O.D. of I.T. Cell for not properly using the classroom projector, because of which the projector of your classroom has been out of service.

(7)

OR

Write a letter to the Principal of your school, requesting him/her to start a special English class for the preparation of your Term-II exams.

SECTION-C

7. Give the meanings of the following words: (any seven)

(1x7=7)

sequels, chatter, forsook, vanished, excerpt, agitated, consume, decided

8. Answer the following questions: (any five)

(2x5=10)

- a. What did the mock Turtle learn in his regular course?
- b. What did Abou Ben want to know from the angel? What reply did he get?
- c. Why had Dashu approached Jagabadhu?
- d. What is a looking - glass? What is compared to a looking - glass?
- e. Name the two most important science fiction writers. Also write about their writing are as well?
- f. How did Crusoe spend his time between the farming months?

9. Answer the following question:

(3)

At the end, Dashu says, "We should all know the importance of sharing what we know with others." What does this tell us about Dashu?

Or

"It's all her fancy. In fact, no one is ever executed, you know. Come on!"

- i. Who was the speaker?
- ii. Whose fancy was being spoken about?
- iii. Why was no one ever executed?

10. Do as directed:

(5)

i. Choose the best answer:

- a. I can't speak properly today. My voice is quite _____. (hoarse/horse)
- b. He is a man who is known for his _____ (principles/principals)

ii. Complete the following sentences by using the following phrasal verbs:

Caught at, caught out by, caught on

- a. He _____ her arm as she tried to move away.
- b. Sports drinks have _____ as buyers have become more health conscious.

iii. Tick the correct form of verb to complete the sentences:

- a. Economics **is/are** a very interesting subject.
- b. Neither of the answers **is/are** correct!

iv. Put a cross(×) against the incorrect collocations:

- | | | |
|---------------|---------------------|-----------------|
| a. keep | | |
| i. the time | ii. the appointment | iii. one's word |
| b. make | | |
| i. companions | ii. Friends | iii. enemies |

v. Who spoke the following words and to whom?

"We called him Tortoise because he taught us."

vi. Use the clue. Make complete conditional sentence.

- a. she/ not pass/the exam/be/upset



Bhagwan Mahaveer Public Sr. Sec. School, Banga

Class: 6th (FS & JS)

Subject: Maths Term - II (2022-23)

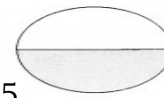
M.M: 60

Attempt all questions.

Section-A

Each question carries one marks: (1x10=10)

1. The sum of angles of a quadrilateral is_____.
2. Instrument used to measure angle is called_____.
3. The fraction representing the shaded portion is



- a) $1/2$ b) $3/5$ c) $4/1$ d) $4/5$
4. Write in fraction :- seven-fifth
 5. Perimeter of rectangle = _____
 6. If side of square is 2 cm what will be the area of square
 7. Coefficient of 9 in $9xy$ _____
 8. Round the like fraction :- $2/3$, $10/15$, $6/5$, $7/8$
 9. 75 degree is _____ angle.
 10. One revolution of a circle is ____ degree.

Section-B

Each question carries 2 marks : (2x8=16)

11. Convert $7/2$ into mixed fraction.
12. Express $5/10$ into simplest form.
13. If length and breadth of rectangle is 4cm and 6 cm. Find its area.
14. Find the perimeter of an equilateral triangle whose each side measure is 12 cm.

Or

Find the perimeter of regular hexagon if one of its side is 10 cm

15. Write in equation :- 5 is subtracted from a.
16. Write in exponential form :- $a \times a \times b \times c \times c$
17. Construct the bisector of line 5 cm.
18. Which direction will you face if you start facing west and make $1/2$ a revolution clockwise?

Or

Where will the hour hand of a clock if it starts at 2 and makes $\frac{3}{4}$ of a revolution clockwise?

Section-C

Each question carries 3 marks : (3x8=24)

19. Find the first three equivalent fraction of $\frac{3}{8}$.

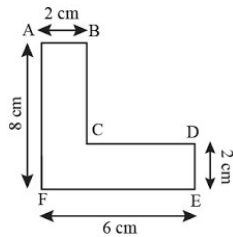
Or

Put (<, >, =)

a) $\frac{3}{4}$ ___ $\frac{3}{7}$ b) $\frac{2}{5}$ ___ $\frac{10}{25}$ c) $\frac{2}{4}$ ___ $\frac{6}{4}$

20. Two sides of a triangle are 14 cm and 20 cm .The perimeter of the triangle is 48 cm. What is the measure of its third side?

21. Find the area of given figure



22. Evaluate the following:- $x=2$, $y=3$, $z=1$. Find the value of $x^2 - y+z$

23. Fill the table :-

Algebraic expression	Variable	Constant	Operation
$Y+2$			
$5x^3+y-1$			

Or

Give one example of each

1) monomial 2) binomial 3) trinomial

24. Construct 60 degree angle by using compass.

25. Name the triangle :

a) having all sides equal. b) having all different sides
c) having two sides equal and one different

26. Fill in the blanks:-

Shapes	Faces	Edges	Vertices
Cube			
Cone			

Section-D

Each of the following carries 5 marks: (5x6=30)

27. What fraction of a revolution clockwise does the hour hand of a clock turn through goes from

a) 2 to 8 b) 4 to 7 c) 6 to 3 d) 1 to 10

28. Add $\frac{2}{6} + \frac{5}{6} + \frac{3}{12}$

29. Gunjan was making dessert for the dinner . She used $\frac{3}{4}$ kg sugar to make gulab jamun and $\frac{2}{5}$ kg sugar for kheer . How much sugar did she use in total.

30. The area of rectangular field is 6300 sq.m and it's length 90 m. What is the breadth of the field.

31. Construct the bisector of 120 degree

Or

Construct 45 degree angle.

32. Manoj is y years old now. What would be his age 5 years after and 5 years ago?



Bhagwan Mahaveer Public Sen. Sec. School Banga

Class- 6th JS & FS

Subject – Science (086)

M:M 8

(Section- A)

MCQ's

8×1=8

- _____ carries fine powdery particles called pollens.
a. Filament b. Anther c. Stigma d. Style
- Which of these gases is required by plants to make protein?
a. Methane b. Nitrogen c. Oxygen d. Carbon dioxide
- How many bones do human beings have?
a. 300 b. 206 c. 642 d. None of these
- A satellite is travelling around the Earth. The motion of the satellite is
a. Periodic b. Non- periodic c. Rectilinear d. Random
- _____ is a small coiled wire that glows in an electric bulb.
a. Conductor b. Filament c. Switch d. Circuit
- Which plant does not have a weak stem?
a. Watermelon b. Bottle gourd c. Grapevine d. Mustard
- Which among these is an incorrect pair?
a. Toes - Hinge joint b. Wrist – Gliding joint
c. Ankle – Pivot joint d. Hip - Ball and Socket joint
- The bouncing back of light is called _____.
a. Reflection b. bending c. absorption d. None of these

Fill in the blanks----

8×1=8

- The measure of water vapour in the air is called_____.
- The movement in a snake is called _____.
- _____ is an involuntary muscle.
- The_____ develops into a fruit.
- The_____ surface will show regular reflection.
- The blades of a windmill show_____ motion.
- Plastics and Rubber are both the examples of _____.
- Current does not flow in _____ circuit.

True/False

4×1=4

- Cartilage is an inflexible tissue.
- All gases in the air help in burning.
- Image formed in a pinhole camera is inverted.
- Two cells are connected end-to- end make a battery.

(Section-B)

10×1=10

Each questions carry 1 marks-

1. A device that converts chemical energy into electrical energy.
2. Materials that do not allow current to flow through them.
3. What type of image is formed in a pinhole camera?
4. Name the thick blanket of air surrounding the Earth.
5. Name the motion of a bullet.
6. Name the motion of a swing.
7. What is gait?
8. How many pairs of legs does a cockroach have?
9. What are sepals?
10. Why does the banyan tree have prop roots?

(Section- C)

8×2=16

Attempt the questions each questions carry 2 marks.

1. Write any two functions of stem.

Or

What are the difference between apical and axillary bud?

2. Name the 3 bones seen in forelimb.

Or

What is ribcage? Write it's one functions.

3. What is the difference between rectilinear and curvilinear motion.
4. What are the difference between open and closed circuit?
5. What is an image? How is it formed ?
6. What is reflection of light? Define smooth surface.
7. What is acid rain?
8. How is Ozone hole formed?

(Section-D)

6×3=18

Attempt any 6 question each question carry 3 marks-

1. Give the Composition of air with a pie chart.

Or

Write any three effects of air pollution.

2. What are the necessary Conditions for the formation of a Shadow?

3. No current flows in an open circuit. Why?
4. What are Rotational motions. Give two examples.
5. Write three features seen in birds that help to fly.
6. What are the different parts of leaf. Explain with diagram.
7. Differentiate between self and cross – pollination.

(Section-E)

4×4=16

Attempt any 4 questions-

1. Explain the structure of a flower with the help of well labelled diagram.

Or

Describe the different stem modification seen in plants.

2. With the help of a diagram, show the different motion shown by the earth.
3. What is Global warming? Explain how air support life.
4. Describe the structure of an electric bulb.
5. With symbolic representation, explain the different types of circuit.

8. Put a cross marks against it.

(1×3=3)

1. (A) Thorny bushes are found in dry Area of India
(B) Cactus and babool are common in Rajasthan
(C) Mountain vegetation is found at low Heights
2. Another name For a Patwari is :-
(A) Lekhpal (B) Kanugo (C) Grampal
3. Which of these is a non – farming rural activity?
(A) Collecting Tendu Leaves
(B) Dairy and Animal Husbandry
(C) Agriculture

9. Identify the picture and name them:

(1×3=3)



10. On the given map of India fill the following:

(1×5=5)

1. Two Ghats
2. Any One Neighbours Country
3. Indian OCEAN
4. River GANGA
5. Ancient City Kanauj Or Rajasthan



Bhagwan Mahaveer Public Sr. Sec. School, Banga

Class: 6th (FS)

Subject: Social Science

Term - II (2022-23)

M.M: 80

(1×7=7)

(1) Tick the Correct Option:

1. The Iron Pillar is Situated in :-
(A) Agra (B) Delhi (C) Uttar Pradesh
2. Jesus Christ was born --:
(A) Bethlehem (B) Syria (C) Palestine
3. In Which Part of the City you are most Likely to Locate a bank ?
(A) Factory- workshopArea (B) Market Area (C) Office Area
4. Loo blows during : -
(A) Winter (B) Summer (C) Rainy - Season
5. Most of the rivers have their Sources in
(A) Glaciers (B) Lakes (C) Oceans
6. Which is The Main Source of Livelihood in the Rural Areas ?
(A) Fishing (B) Animal Husbandry (C) Agriculture
7. The Purans were Written in :---
(A)Pali (B) Prakrit (C)Sanskrit

(2) Write True or False :

(1×7=7)

1. Ved Vyasa is Recognised as the author of the Sankrit Ramayana
2. Kalidasa is known For his Plays.
3. Ailhole. Was the Capital of thePallavas.
4. Tsunami Struck the Indian Coast in 2005.
5. Selling Milk to Village Coopeartives Provides additional income to Villagers.
6. Plains are very Useful Areas For human habitation.
7. Air Moves From Low Pressure to High Pressure .

(3) Fill in the blanks :**(1×7=7)**

[China , Wards , Mineral, Indus, The Tropic of Cancer , Suicide ,Plays]

1. _____ Passes almost through the middle of India.
2. The word Hindu is derived from the River _____
3. In many areas Farmers have Committed _____ because of unbearable debt.
4. Paper was invented in _____ about 1900 years ago
5. Kalidasa was known for his _____
6. The City is divided into several _____
7. Plateaus are rich in _____ deposits.

(4) Match the following:**(1×7=7)**

- | | |
|--------------------|----------------------|
| (1) largest state | (A) Goa |
| (2) Smallest state | (B) National Bird |
| (3) Peacock | (C) Rajasthan |
| (4) Lion | (D) Chinese Pilgrim |
| (5) Fa - Xian | (E) Mound |
| (6) Harshavardhana | (F) King of Animal |
| (7) Stupa | (G) King of Thanesar |

(5) Very short answer type questions :**(1×7=7)**

1. Where will you find workers if you have to white wash your house?
2. Who were Pilgrims ?
3. What is a Gram Sabha?
4. Write the two famous sanskrit epics?
5. Name the four major landforms of the Earth.
6. Name the different seasons in India.
7. What are Glaciers ?

(6) Short Answer Type (Do any 8 Questions)**(2×8=16)**

1. Describe the functions of a Municipal Corporation .
2. What is a Delta ? Name the Delta formed by the Ganga and Brahmaputra River .
3. Describe the Mangrove Forests in India .
4. Who were the Samantas ?
5. What were the resources collected as Tribute from South India and North – west by the Emperor?
6. Why did the Farmers not Support Jainism ?
7. Name the major Physical divisions of India?
8. What does the Hindu Succession Amendment Act,2005 State .
9. Why did the devotees walk around the Stupa in a clock – wise direction ?

(7) Long Answer type questions (Do any 6 Questions) (3×6=18)

1. Distinguish between Thorny Vegetation and Mountain Vegetation?
2. How are Plains formed ? Give Examples .Why are the river plains thickly populated?
3. What will you do if the SHO refuses to Register an FIR ?
4. What were the earliest viharas made of ? What purpose did they Serve ?
5. What is the Source of the income of the Municipal Corporation ?
6. What were the teachings of Buddha ?
7. What were the Welfare measure taken by Ashoka ?

खाने की प्रबल इच्छा होना , प्यास लगना

*दो बहनों की कहानी सुनकर गांधी जी ने क्या त्याग दिया?

भोजन कपड़े

पानी फल

7. निम्नलिखित शब्दों का वाक्य में इस प्रकार प्रयोग कीजिए कि अर्थ स्पष्ट हो जाए: (5)

तीव्र, विलायती, शोषण, होशियार, चित्त, कतार,

8. व्यवहारिक व्याकरण: (2x6=12)

* निर्देशानुसार उत्तर दो : (कोई छः भाग करो)

क. निम्नलिखित शब्दों की संधि कीजिए: (2)

मुनि + इंद्र, भानु + उदय

ख. निम्नलिखित शब्दों के विलोम शब्द लिखिए: (2)

अनुकूल, प्रशंसा

ग. निम्नलिखित अनेक शब्दों के लिए एक शब्द लिखें: (2)

•जिसके आने की तिथि मालूम न हो

•जो कटु बोलता है।

घ. निम्नलिखित वाक्यों में सर्वनाम रेखांकित कर उसका भेद बताइए:

अंकित, मैंने गृह कार्य स्वयं किया है।

दरवाजे के पीछे कोई छिपा हुआ है।

ङ. निम्नलिखित अशुद्ध वाक्यों को शुद्ध करके लिखें:

नेताजी मंच पर भाषण दे रहा है।

उसे प्लेट में रखकर नाश्ता दो।

च. निम्नलिखित वाक्यों में विशेषण रेखांकित कर उसका भेद बताएं:



भगवान महावीर पब्लिक सीनियर सेकेंडरी स्कूल, बंगा

कक्षा : छठी (Final Paper 2022-23)

विषय : हिंदी (085)

समय : 3 घंटे

कुल अंक: 80

1. अपठित गद्यांश को पढ़कर पूछे गए प्रश्नों के उत्तर दीजिए: (6)

अभ्यास के बिना जीवन में सफलता नहीं मिलती। पहली बार प्रत्येक कार्य कुछ काल लगता है। यदि व्यक्ति उस कार्य को कठिन समझकर बैठ जाता है तो उसे कभी भी कर सकता। अमेरिका के राष्ट्रपति ने अभ्यास-क्रम नहीं छोड़ा और एक दिन राष्ट्रपति पद प्राप्त कर लिया। यदि हम अभ्यास करना छोड़ देंगे तो सफलता हमें छोड़ देगी। मुहम्मद गौरी ने पृथ्वीराज चौहान पर विजय पाने के लिए सत्रह बार प्रयत्न किया और अंत में सफल हो गया। निरंतर अभ्यास एक ऐसी कुंजी है, जो मनुष्य के लिए सफल के द्वार खोल देती है। अभ्यास से विद्या अमृत बन जाती है तो बिना अभ्यास के विद्या विष का रूप धारण कर लेती है। जो मनुष्य अभ्यास नहीं करता उसके पास विद्या अधिक समय तक नहीं टिकती। बहुत बड़ा गणितज्ञ भी यदि अभ्यास छोड़ देगा तो गणित उसे छोड़ देगा। खिलाड़ी यदि खेल का अभ्यास नहीं करेगा तो कभी भी कीर्तिमान स्थापित नहीं कर पाएगा। अतः अभ्यास अवश्य करना चाहिए।

क. कठिन कार्य कैसे सरल हो जाता है ?

ख. सफलता साथ कब छोड़ देती है?

ग. निरंतर अभ्यास करना किस की कुंजी है?

घ. मोहम्मद गौरी ने पृथ्वीराज चौहान पर विजय पाने के लिए कितनी बार प्रयत्न किए?

ङ. खिलाड़ी द्वारा खेल का अभ्यास न करने पर क्या होगा?

च. निम्नलिखित शब्दों के विलोम शब्द गद्यांश में से ढूंढ कर लिखें: सरल, अमृत

2. निम्नलिखित शब्दों के अर्थ लिखें :

(10 x 1/2=5)

शयनकक्ष , विध्वंस, चीरना, किस्सा, कंगाली, क्रेविंग , आर्टिफिशियल, अमानत, तामील, रण, वि

3. निम्नलिखित प्रश्नों के उत्तर संक्षेप में दीजिए :

(1x4=4)

क) वर्षों तक किनको वन में घूमना पड़ा था और क्यों? कृष्ण की चेतावनी कविता के आधार पर बताइए।

ख) व्यक्ति को खान -पान ,राग -रंग कब अच्छे नहीं लगते? गिरिधर की कुंडलियों के आधार पर बताइए।

ग) बादशाह ने नादिर हुसैन को कौन सा जिम्मेदारी का काम सौंपा था?

घ) शेन ने अपनी मां से ऐसी कौन सी बात कही जिससे वह बेहोश हो गई ?

4. निम्नलिखित प्रश्नों के उत्तर विस्तार से दीजिए:

(2x4=8)

क) चंपारन की महिलाओं का घर से बाहर न निकलने का कारण क्या था ?

ख) ताजमहल की टपकती हुई छत की मरम्मत कैसे की गई?

ग) कृष्ण ने दुर्योधन के सामने कौन सा प्रस्ताव रखा था?

घ) क्रेविंग के कोई चार कारण लिखिए ?

ङ) हमें अपने देश की ऐतिहासिक इमारतों और धरोहरों का संरक्षण क्यों करना चाहिए? हमें इनसे क्या लाभ होता है?

5. निम्नलिखित गद्यांश को पढ़कर पूछे गए प्रश्नों के उत्तर दीजिए:

(4)

शेन मुंह फाड़े देखता रहा। उसने देखा कि वैन सड़क पर भागी जा रही है और मोड़ पर जाकर आँखों से ओझल हो गई। शेन ने झुककर अपनी डबलरोटी उठाई, मुड़ा और दुकान से बाहर हो गया। अब वह एक मिनट भी और ज्यादा वहाँ रुकने को तैयार नहीं था। ऐसा उसके साथ पहले कभी नहीं हुआ था। उसकी माँ ने गाड़ियों से और नाली से

बचने को सावधान किया था। माँ ने कहा था- साइकिल से गिर मत पड़ना। लेकिन यह तो कुछ और ही था।

क. किस घटना को शेन मुँह फाड़े देखता रहा?

ख. वैन में कौन जा रहा था ?

ग. 'मुँह फाड़े देखने' का अर्थ स्पष्ट कीजिए।

घ. शेन कहां पर एक मिनट भी रुकने को तैयार नहीं था ?

6. पाठ्यपुस्तक संबंधी व्याकरण:

(2x5=10)

निर्देशानुसार उत्तर दो (कोई पांच भाग करो)

क) दो - दो पर्यायवाची लिखिए:

(2)

असि, माता

ख) निम्नलिखित अनेक शब्दों के लिए एक शब्द लिखें:

(2)

कपड़ा बुनने वाला, जो शब्द संज्ञा की जगह प्रयुक्त हो

ग) विलोम शब्द लिखिए :

(2)

खुशी , सुमार्ग

घ) निम्नलिखित शब्दों में से किसी एक के दो - दो अर्थ लिखकर वाक्य बनाएं: (2)

फल- फल अथवा लाल - लाल

ङ) निम्नलिखित शब्दों की भाववाचक संज्ञा बनाइए:

(2)

सजना, चढ़ना

च) निम्नलिखित शब्दों में ' इत ' प्रत्यय लगाकर शब्द बनाइए:

(1/2+1/2=1)

चिंता + इत , कल्पना + इत

•सही विकल्प चुनकर ✓ का निशान लगाइए:

(1/2+1/2=1)

•क्रेविंग का अर्थ होता है

भूख लगना, नींद आना

मैंने बाजार से चार दर्जन केले खरीदे।

अंगुलिमाल बहुत क्रूर डाकू था।

छ. निम्नलिखित वाक्यों में काल का भेद बताइए:

- प्रदीप कल अपने मित्र समीर के साथ घूमने गया।
- शायद वह पास हो जाए।

9. निम्नलिखित लोकोक्तियों के अर्थ लिखकर उनका वाक्य में प्रयोग कीजिए (2*3=6)

अब पछताए होत क्या ,जब चिड़िया चुग गई खेत, काला अक्षर भैंस बराबर , आ बैल मुझे मार, एक पंथ दो काज।

10. रचनात्मक लेखन (20)

क) दिए गए विषयों में से किसी एक विषय पर संकेतों के आधार पर अनुच्छेद लेखन कीजिए: (5)

बच्चों से छिन रहा बचपन

संकेत बिंदु :

जीवन में बचपन का महत्व

पढ़ाई का बोझ और बढ़ती प्रतियोगिता

माता पिता का दबाव

खेल और रुचि के कार्य करने के लिए समय की कमी

अथवा

मधुर वाणी का महत्व

संकेत बिंदु :

वाणी का महत्व

मधुर वाणी और मित्रता

थोड़ी-सी कड़वाहट झगड़े का कारण

कटु वाणी का प्रभाव

ख) अपने क्षेत्र में बढ़ रही चोरी और लूटपाट की घटनाओं के बारे में जानकारी देते हुए थानाध्यक्ष को पत्र लिखिए। (5)

अथवा

किसी दूसरे स्कूल के साथ फुटबॉल का मैच खेलने की अनुमति मांगने हेतु प्रधानाचार्य को एक पत्र लिखो।

ग) निम्नलिखित विषयों में से किसी एक विषय पर संवाद लेखन करें (5)

. अध्यापक अभिभावक बैठक (P.T.M.) पर अध्यापक और माता-पिता के बीच संवाद

अथवा

दुकानदार से मोल भाव करती हुई स्त्री और दुकानदार के बीच संवाद

घ) आज स्कूल से वापस आते समय आपके सामने एक दुर्घटना हो गई जिसमें एक व्यक्ति बुरी तरह से घायल हो गया और सभी लोगों ने उसे अस्पताल पहुंचाया। आपने जीवन में पहली बार ऐसी दुर्घटना को देखा तो आपके मन पर इसका जो प्रभाव पड़ा, उस पर डायरी लेखन कीजिए।

अथवा

मुहावरों की प्रतियोगिता में प्रथम आने पर होने वाली खुशी को व्यक्त करते हुए डायरी लेखन कीजिए। (5)

i. ਦੀਪਕ *ਮਾਸਾਹਾਰੀ* ਭੋਜਨ ਖਾਂਦਾ ਹੈ।

ii. ਪਿਛਲੇ ਸਾਲ *ਹੜ* ਵਾਲੇ ਹਲਾਤ ਹੋ ਗਏ ਸਨ।

iii. ਹੇਠ ਲਿਖੇ ਵਾਕਾਂ ਨੂੰ ਸੁੱਧ ਕਰਕੇ ਲਿਖੋ:- (1x2=2)

i. ਪੈਦਾ ਹੈ ਦਾ ਮੀਂਹ ਕੱਲ੍ਹ। ii. ਗਾਉਂਦੀ ਸੁਰੀਲਾ ਹੈ ਉਹ ਬਹੁਤ।

iv. ਹੇਠ ਲਿਖੇ ਸ਼ਬਦਾਂ ਦੇ ਦੋ ਦੋ ਸਮਾਨਾਰਥਕ ਸ਼ਬਦ ਲਿਖੋ:- (1x2=2)

i. ਭੂਮੀ ii. ਅਕਲ

v. ਹੇਠ ਲਿਖੇ ਵਾਕਾਂ ਵਿੱਚ ਕਾਲ ਦੀ ਕਿਸਮ ਲਿਖੋ:- (1x2=2)

i. ਵਿਆਹ ਵਿੱਚ ਬਹੁਤ ਮਹਿਮਾਨ ਆਉਣਗੇ।

ii. ਅਸਮਾਨ ਵਿੱਚ ਪੰਛੀ ਉਡਾਰੀਆਂ ਲਗਾ ਰਹੇ ਸਨ।

vi. ਵਿਸ਼ੇਸ਼ਣ ਦੀ ਪਰਿਭਾਸ਼ਾ ਉਦਾਹਰਣ ਸਹਿਤ ਲਿਖੋ। (2)

10. ਪਾਣੀ ਦੀ ਸਾਂਭ ਸੰਭਾਲ ਜਾਂ ਵਾਤਾਵਰਨ ਦੀ ਸੰਭਾਲ ਵਿਸ਼ੇ ਸਬੰਧੀ ਕੋਈ ਦੋ - ਦੋ ਨਾਅਰੇ ਲਿਖੋ।

ਜਾਂ

ਤੁਹਾਡੇ ਇਲਾਕੇ ਵਿੱਚ ਇੱਕ ਨਵਾਂ ਕਪੜੇ ਦਾ ਸਟੋਰ ਖੁੱਲ੍ਹਿਆ ਹੈ। ਇਸ ਦੀ ਮਸ਼ਹੂਰੀ ਲਈ ਇੱਕ ਅਕਰਸ਼ਕ ਇਸ਼ਤਿਹਾਰ ਤਿਆਰ ਕਰੋ। (4)

11. ਸਕੂਲ ਦੇ ਮੁੱਖ ਅਧਿਆਪਕ ਜੀ ਨੂੰ ਕਰੋਨਾ ਕਾਲ ਵਿੱਚ ਫੀਸ ਮੁਆਫ਼ ਕਰਨ ਲਈ ਬਿਨੈ ਪੱਤਰ ਲਿਖੋ।

ਜਾਂ

ਆਪਣੇ ਸਕੂਲ ਦੇ ਮੁੱਖ ਅਧਿਆਪਕ ਜੀ ਨੂੰ ਆਪਣੇ ਵੱਡੇ ਭਰਾ ਦੇ ਵਿਆਹ ਲਈ ਇੱਕ ਹਫ਼ਤੇ ਦੀ ਛੁੱਟੀ ਲੈਣ ਲਈ ਬਿਨੈ ਪੱਤਰ ਲਿਖੋ। (7)

12. ਹੇਠ ਲਿਖਿਆਂ ਵਿੱਚੋਂ ਕਿਸੇ ਇੱਕ ਵਿਸ਼ੇ ਉੱਤੇ ਲੇਖ ਰਚਨਾ ਕਰੋ:- (7)

ਸ੍ਰੀ ਗੁਰੂ ਗੋਬਿੰਦ ਸਿੰਘ ਜੀ

ਨੁਕਤੇ:- ਜਾਣ ਪਛਾਣ, ਜਨਮ ਅਤੇ ਬਚਪਨ, ਅਨੰਦਪੁਰ ਸਾਹਿਬ ਆ ਜਾਣਾ, ਪਿਤਾ ਗੁਰੂ ਤੇਗ ਬਹਾਦਰ ਦੀ ਕੁਰਬਾਨੀ, ਖਾਲਸਾ ਪੰਥ ਦੀ ਸਾਜਨਾ, ਸਾਹਿਬਜ਼ਾਦਿਆਂ ਦੀ ਸ਼ਹੀਦੀ, ਜੋਤੀ ਜੋਤ ਸਮਾਉਣਾ

ਜਾਂ

ਮੈਰੀ ਕਿਊਰੀ

ਨੁਕਤੇ:- ਜਾਣ ਪਛਾਣ, ਜਨਮ ਅਤੇ ਮਾਤਾ ਪਿਤਾ, ਬਚਪਨ, ਵਿੱਦਿਆ ਪ੍ਰਾਪਤੀ, ਵਿਆਹ, ਵਿਗਿਆਨਕ ਖੋਜਾਂ, ਨੋਬਲ ਪੁਰਸਕਾਰ, ਅਕਾਲ ਚਲਾਣਾ



ਭਗਵਾਨ ਮਹਾਵੀਰ ਪਬਲਿਕ ਸੀਨੀਅਰ ਸੈਕੰਡਰੀ ਸਕੂਲ, ਬੰਗਾ

ਵਿਸ਼ਾ : ਪੰਜਾਬੀ

ਕਲਾਸ:- ਛੇਵੀਂ

ਸਮਾਂ:- 3 ਘੰਟੇ

ਕੁੱਲ ਅੰਕ:- 80

ਆਮ ਨਿਰਦੇਸ਼

• ਹੇਠ ਲਿਖੇ ਨਿਰਦੇਸ਼ਾਂ ਨੂੰ ਧਿਆਨ ਨਾਲ ਪੜ੍ਹੋ ਅਤੇ ਉਹਨਾਂ ਦਾ ਪਾਲਣ ਕਰੋ:-

- ਸਾਰੇ ਪ੍ਰਸ਼ਨ ਲਾਜ਼ਮੀ ਹਨ।
- ਪ੍ਰਸ਼ਨਾਂ ਵਿੱਚ ਦਿੱਤੀ ਗਈ ਅੰਦਰੂਨੀ ਚੋਣ ਨੂੰ ਧਿਆਨ ਨਾਲ ਦੇਖ ਕੇ ਨਿਰਦੇਸ਼ਾਂ ਅਨੁਸਾਰ ਹੱਲ ਕੀਤਾ ਜਾਵੇ।
- ਲਿਖਾਈ ਸਾਫ਼ ਅਤੇ ਸੁੱਧ ਲਿਖੀ ਜਾਵੇ।
- ਸਹੀ ਪ੍ਰਸ਼ਨ ਨੰਬਰ ਲਿਖ ਕੇ ਉੱਤਰਾਂ ਨੂੰ ਧਿਆਨ ਨਾਲ ਉੱਤਰ- ਸ਼ੀਟ 'ਤੇ ਲਿਖਿਆ ਜਾਵੇ।

1. ਹੇਠ ਲਿਖੇ ਅਣਡਿੱਠੇ ਪੈਰੇ ਨੂੰ ਧਿਆਨ ਨਾਲ ਪੜ੍ਹੋ ਅਤੇ ਪੁੱਛੇ ਗਏ ਪ੍ਰਸ਼ਨਾਂ ਦੇ ਉੱਤਰ ਲਿਖੋ:-

(1x 6=

ਗਰਮੀਆਂ 'ਚ ਗੰਨੇ ਦਾ ਰਸ ਇਸ ਲਈ ਵੀ ਪਸੰਦ ਕੀਤਾ ਜਾਂਦਾ ਹੈ ਕਿਉਂਕਿ ਇਸ ਨੂੰ ਪੀਣ ਨਾਲ ਤੁਰੰਤ ਮਿਲਦੀ ਹੈ। ਗੰਨੇ ਦਾ ਰਸ ਗਲੂਕੋਸ ਦਾ ਬਹੁਤ ਵਧੀਆ ਸਰੋਤ ਹੁੰਦਾ ਹੈ, ਜਿਸ ਨਾਲ ਇਹ ਸਰੀਰ ਨੂੰ ਹਾ ਰੱਖਣ ਦੇ ਨਾਲ ਹੀ ਐਨਰਜੀ ਬੁਸਟਰ ਦਾ ਵੀ ਕੰਮ ਕਰਦਾ ਹੈ। ਇਸ ਲਈ ਡੱਬਾ ਬੰਦ ਜੂਸ ਪੀਣ ਤੋਂ ਬਿਹਤਰ ਰੋਜ਼ਾਨਾ ਇੱਕ ਗਲਾਸ ਗੰਨੇ ਦਾ ਤਾਜ਼ਾ ਰਸ ਪੀਤਾ ਜਾਵੇ।

ਪ੍ਰਸ਼ਨ:-

- ਤੁਰੰਤ ਊਰਜਾ ਕਿਸ ਨਾਲ ਮਿਲਦੀ ਹੈ ?
- ਗੰਨੇ ਦਾ ਰਸ ਕਿਸ ਦਾ ਵਧੀਆ ਸਰੋਤ ਹੈ?
- ਕਿਸ ਜੂਸ ਨਾਲੋਂ ਗੰਨੇ ਦਾ ਰਸ ਬਿਹਤਰ ਹੈ ?
- ਰੋਜ਼ਾਨਾ ਕਿੰਨਾ ਗੰਨੇ ਦਾ ਰਸ ਪੀਤਾ ਜਾ ਸਕਦਾ ਹੈ ?
- ਗੰਨੇ ਦਾ ਰਸ ਸਰੀਰ ਨੂੰ ਹਾਈਡੇਟ ਰੱਖਣ ਦੇ ਨਾਲ ਹੀ ਹੋਰ ਕੀ ਕੰਮ ਕਰਦਾ ਹੈ ?
- ਇਸ ਪੈਰੇ ਵਿੱਚ ਕਿਸ ਦੇ ਫਾਇਦੇ ਦੱਸੋ ਹੋਏ ਹਨ ?

2. ਸਹੀ ਉੱਤਰ ਦੀ ਚੋਣ ਕਰੋ:-

(1x 5=5)

i. ਕਿਸ ਨੂੰ ਦੇਖ ਕੇ ਲੁੰਬੜੀ ਦੇ ਮੂੰਹ ਵਿੱਚ ਪਾਣੀ ਆ ਗਿਆ ?

- ਕੁੱਕੜ ਨੂੰ ਦੇਖ ਕੇ
- ਕੁੱਤੇ ਨੂੰ ਦੇਖ ਕੇ
- ਪੰਛੀਆਂ ਨੂੰ ਦੇਖ ਕੇ
- ਸ਼ੇਰ ਨੂੰ ਦੇਖ ਕੇ

