



Bhagwan Mahaveer Public Senior Secondary School

Class 7th BB (2022-23)

Subject: Artificial Intelligence

Term-II Final Exam

M.M 80

1X8=8

Q1. MCQ:

1. It is a sensor technology which uses infrared light to enable a computer to know where a person is looking.
a. Motion tracking b. Eye tracking c. Head tracking
2. This VR technology changes the image in front of you when you wear a VR headset.
a. Head b. Motion c. Eye
3. Which of the following works on two operands?
a. Unary operator b. Binary operator c. Both a and b
4. This statement terminates the loop containing it.
a. while b. break c. if
5. In this cloud, services and infrastructure are maintained on a private network.
a. Public b. Private c. Hybrid
6. Traditional web hosting can be either dedicated or
a. shared. b. public. c. Both a and b
7. It is a humanoid that can perform a number of gymnastic feats.
a. Atlas b. Roomba c. Drones
8. The autonomous robot called Roomba is a
a. washing machine b. vacuum cleaner c. dish washer

Q2. Fill in the blanks:

1X8=8

1. The _____ reality is quite engaging but can isolate the user from the outside world.
2. _____ reality is a blend of both AR and VR technologies.
3. _____ refers to the priority order of an operator according to which it is evaluated.
4. In Python, the conditional statement ends with a _____
5. _____ clouds are owned and operated by third party service providers.
6. _____ is a key characteristic of IoT that is used to create devices that interact with real-world.
7. The discoveries and inventions related to robots are a part of a field called _____ .
8. _____ was the first robotic spacecraft to enter the earth's orbit.

Q3. Write True/ False:

1X8=8

1. VR can be used to promote travel and tourism.
2. Motion tracking monitors a user's head position and orientation.
3. Metropolis was the first film to feature a female robot.
4. Unary operator operates on two operands.
5. The Elastic Compute cloud was launched by Amazon in 2006.
6. It is not compulsory in Python, to indent the statements in the condition body.
7. A company using cloud services does not have to depend on its network connection.
8. Teleoperated robots are used in the battlefields to detect landmines.

Q4. Write the full form of the following: (Do any 6)

1X6=6

1. GPU 2. HDMI 3. PaaS 4. SaaS 5. API 6. IRCTC 7. ISS

Q5. Write the shortcut keys for the following. (Do any 6)

1X6=6

1. Lock Device
2. Go to the beginning of the document.
3. Minimizes all open Window.

4. Take screenshot and stores into the clipboard.
5. Rename selected item.
6. Used to print document.
7. Switch between open apps.

Q6. Match the following:

1X6=6

1. Serverless computing focuses on building functionality of	a. input() function
2. Practice of delivering computer services over the internet	b. replication
3. Function makes the program interactive	c. apps
4. Comparing two values	d. logical operator
5. String operator	e. cloud computing
6. Comparing two or more relational expressions	f. relational operator

Q7. Very short Questions. (Do any 8)

1X8=8

1. Define extended reality.
2. Define Hybrid Cloud.
3. Define humanoid.
4. Name the types of cloud services.
5. Name any two disadvantages of cloud services.
6. Name any two disadvantages of robots.
7. Name the Scientist who developed the AR system used by US Air Force.
8. Write the output :

```
x=34
y=34.34
print(x>y)
```

9. What will be the output of the expression:

```
x=10
y=10
z=(x>=y) and (x==y)
print(z)
```

Q8. Short Question Answers: (Do any 6)

2X6=12

1. What are the different types of Augmented Reality?
2. What does dedicated web hosting means?
3. What is the use of '+' operator in string manipulation?
4. Write a program to take inputs from user and print the sum of three numbers.
5. Write a program to print first 5 numbers in ascending order using for loop.
6. Mention the application of robots in the field of security, defence, and surveillance.
7. Name the major components of IoT.

Q9. Long Question Answers: (Do any 6)

3X6=18

1. Mention three disadvantages of VR.
2. Differentiate between Public and Private cloud.
3. Write a program to take the length of one side of the square as input and find the perimeter.
4. Write a program to print first 5 numbers in ascending order using while loop.
5. Name and define all the operators used in python language.
6. List the various applications of robots in daily life.
7. What do you understand by pre-programmed robots?



Bhagwan Mahaveer Public Sr. Sec. School, Banga

Class: 7th (B.B)

Subject: English

Term - II (2022-23)

M.M: 60

Section A

1. Read the given passages and answer the questions: (8)

1. When Mrs Rodrigues saw Manu with a butterfly on his left shoulder, she called him. Didn't he know that he was not supposed to wear any brooch on his uniform, she asked. Manu laughed loudly and so did other children, annoying her. She ordered silence and let Manu explain. He said it wasn't a brooch. It was a butterfly for real. Mrs Rodrigues was amazed. She tried to touch it but it flew away.

2. 'It is gone....now go back to your place and open your book,' she said. As Manu turned, the butterfly came back and sat on his shoulder. 'She couldn't believe her eyes. 'She is my pet-Miss Flutter', he said.

3. Miss Flutter became a big distraction in the class. The children laughed, chased her and tried to hold her in their hands. As each competed with the other, there was commotion in the class. So Manu was told not to bring her to the class. He was sad. But rules were rules. "Tomorrow Neerav may want to bring his puppy and Jyotsna, her kitten.. just imagine,' Mrs Rodrigues had argued.

4. Manu had a potted plant in his balcony. That was Miss Flutter's lodge where she stayed at night though she went around with him all day. But the next day Manu told her to get off his shoulder when he left for school. He talked to her, explaining that he would miss her too but he had to listen to the teacher.

5. Miss Flutter was sad. She flew to her potted plant and perched on a leaf. In the evening Manu came back from

school and rushed to the balcony. Miss Flutter was not there. He went in search of her but could not find her anywhere in the house.

6. From that day he hated Mrs Rodrigues. He did not do homework she gave him and got punished all the time. Whenever she asked him any question, he stood silent though he knew the answer.

7. One fine day, Mrs Rodrigues announced in the class that the students had to do science projects for their practicals. There would be a list of topics and the students would have to form groups and select the topic. As the students started talking very excitedly, Mrs Rodrigues wrote the topics on the blackboard.

8. Gardener's friends, Sunlight, Herbs and.....BUTTERFLIES

9. She said eight students could volunteer to be group leaders and each could select his team and the topic. Seven students stood up. As the students tried to suggest the eighth leader, the teacher asked Manu to get up.

10. Manu stood reluctantly and the teacher said, 'Now give me what topic he will select.

11. "Butterflies" the class shouted in one voice. Manu broke into a smile.

12. And then Manu was a busy boy, cheerful, leading his team to gardens and observing butterflies. He loved Mrs Rodrigues who helped him with plants which attracted butterflies. He had a small garden in his balcony now. He woke up everyday to a colourful world.

Answer the following questions briefly:

1. How did Mrs Rodrigues feel when Manu and other children laughed?
2. What happened when she tried to touch the butterfly?
3. How did Miss Flutter become a big distraction in the class?

4. How did Manu behave when he could not find Miss Flutter anywhere?

5. What did Mrs Rodrigues announce in the class one day?

6. Mention the topics that Mrs Rodrigues gave to her students.

7. What topic was given to Manu and why?

8. How did the science project improve Manu's behaviour?

2. Read the passage given below and answer the following questions: (8)

1. Water puppetry, known as 'mua roi nuoc, is one of the most beautiful folk arts of Vietnam.

2. The performances take place on local ponds, specially constructed ponds or portable tanks. Up to eight puppeteers sit hidden behind a bamboo screen designed like a temple and operate the colourful wooden puppets which are coated with lacquer to keep them dry. The puppeteers control the puppets with the help of rods, strings, rudders and pulleys attached to their base.

3. The pools serve as the stage. The water hides the moving mechanism so the audience sees only the puppets.

4. The shows depict folk tales, legends, harvest and fishing stories and events from national history and from day-to-day life. There are many characters, the most notable being Chu Teu who is a jester and the narrator. An orchestra with vocals, drums, wooden bells, gongs, bamboo flutes and horns provides the background music. The puppeteers skilfully use the waves and splashes as well as shimmering lights to add visual effects.

A. Complete the following statements appropriately:

1. 'Mua roi nuoc' is another name of _____

2. Water puppetry is the folk art of _____

3. The puppets are coated with a material called _____ .

4. The puppeteers operate the puppets sitting behind_____.

5. Most performances are held on _____ .

B. Answer the following questions briefly :

1. Name the tools used by the puppeteers to control the puppets.

2. What do the puppets shows depict?

3. Who is Chu Teu?

4. How is the background music produced?

Section B

3. Do as directed :

15m

1. (a) Form **adverbs** from the words and fill them in the blanks.

i. She _____ believes the decision he has taken. (sincere)

ii. Our shop is _____ closed for renovation. (temporary)

(b) Underline the adverb in the following sentence and state it's kind:

i. Bhawna goes for her Computer classes twice a week.

2. Fill in the blanks with appropriate prepositions:

i. A boy fell _____ the drain. (in, into, at)

ii. Has the train _____ Indore arrived? (by, towards, from)

iii. He has been ill _____ last Friday. (from, since, by)

iv. Open your book _____ page ten. (at, on, to)

3 Fill in the blanks with suitable Modals

- I He ____ come to office on time. (should, would)
II Even as a child she ____ speak French. (can, could)
III We ____ to work hard. (should, ought)
IV. I ____ do as I like. (will, shall)

4 Change the following sentences from Active to Passive

- I Do you like Oranges ?
II The engineer could not fix the computer.

5. Change the following sentences into Indirect speech:

I. Dinesh will say, ' The credit for the success of the Indian team goes to the captain , M S Dhoni '.

II Saanvi said , ' I have passed the examination with flying colours '.

6 Underline the clauses in these sentences and state whether they are noun , adjective or adverb clauses :

- I. I do not know what she will do.
II. I have a brother who works in Canada.

7 State whether these sentences are simple, Compound or Complex

- I I like all the colours in rainbow , but I like Indigo best.
II Pawan and Sumit play basketball every afternoon.

8 Write a descriptive paragraph on 'Sachin Tendulkar'.
8m

Hints: born on 24th April, 1973 ,his family, 51 centuries, awarded Bharat Ratna, Padma Vibhushan, Padma Shri, etc.

Or

You went to a friend's house to attend his birthday party.
Write down your experience in your diary.

9 Write an application to your science teacher requesting her to give you an extension for submitting the science project as you were suffering from fever and unable to submit it on time.
8m

Or

Write an application to your principal asking for permission to conduct a workshop on creating awareness about personal hygiene. You are Nitin/Nitisha In-charge of Health and Wellness Club.

10 Write a story with the help of given outline: 8m

Once there arose a dispute between the Sun and the Wind..... thought stronger than the other-----saw a passer by----- decided to try their strength on him----- Wind blew hard----- the man holds the coat tightly----- Wind failed----- the Sun began to shine more brightly ----- the man felt hot----- took off the coat ---- The Sun was the winner.

Or

A man had a hen----- laid a golden egg every day----- got one egg daily ----- he became greedy---- wanted to become rich over night----- killed the hen----- repented after killing.....

Section C

11. Write the meanings of the following words(any seven).7m

- 1 splendid
- 2 hauling
- 3 plated wares
- 4 crest
5. casket
6. court

7. domestics

8. bill

12. Answer the following questions (any five). **2x5=10m**

1. Describe the motor boat the narrator's mother acquired later. Answer in context with 'The Magic Island'.
2. What is 'It' that the poet is talking about? How did you infer?
3. How did the black leaders influence other black people to join them in the protest?
4. Peterson found something in the goose's crop. What was that and what did he do then?
5. To which animals were the commoners gathered near the dead child compared to?
6. Who is the new father promised to Tom by the Angel?

13. Answer the following question (any one). **3m**

1. In Norway a large breakfast is often served even at the more basic hotels. What was on the breakfast table at the hotel where the children stayed?

Or

2. Rosa park was a determined and courageous woman. Do you agree?

14. Do as directed: **(5)**

I. Choose the correct verb to complete these sentences.

1 Everybody was/were asked to remain quiet.

2 There is/are many things to do before the holidays.

II. Choose the noun that collocates with the word in highlight

1 It's impossible to see anything in here. It's **pitch**

i. night

ii. dark

iii. light

2. Let's get into kitchen and cook something nice Would you like to help me ----- a new **dish**?

i. make

ii. do

iii. have

III. Complete the sentences with the idioms given below:

let her hair down, on the last legs, weak at the knees

- a. My older sister can never _____ and take a break from work.
- b. The sight of Shahrukh Khan makes his fans _____ .

IV. Read the sentence and answer the question:

After I had the *chaat*, my stomach started grumbling.

What made the noise? _____

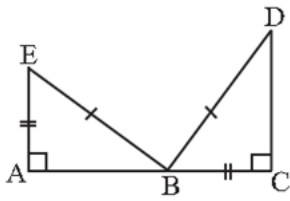
V. Complete the sentence using the correct passive form of the verb given in the bracket:

When people _____ (arrest), they _____ (take) to the police station.

VI. Fill in the blanks with appropriate prepositions:

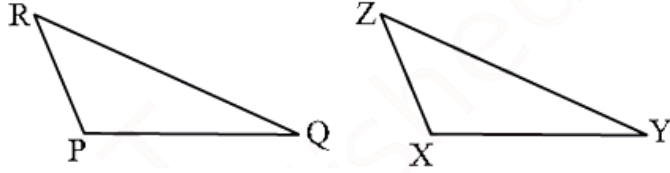
for, at, to, across

- a. Renu is eating her lunch _____ the table.
- b. Ratna ran _____ the road to meet her old friend.



OR

Which congruence criterion do you use in the $ZX = RP$, $RQ = ZY$, $\angle PQR = \angle XYZ$, $\triangle PQR \cong \triangle XYZ$



8. What percent of ₹ 80 is ₹ 100? [2]
9. Shweta obtained 18 marks in a test of 25 marks. What was her percentage of marks? [2]
10. Find the area of the circle, given that: diameter: = 49 m [2]
11. Subtract: $-m^2 + 5mn$ from $4m^2 - 3mn + 8$ [2]
12. Identify the greater number, if possible: 4^3 or 3^4 [2]
13. Draw the line of symmetry of a rhombus. [2]
14. What is a prism? Give examples. [2]

OR

Which are prisms among the following:

i.



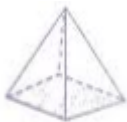
A nail

ii.



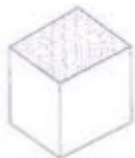
Unsharpened pencil

iii.



A table weight

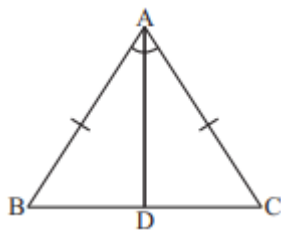
iv.



A box

Section C

15. **Fill in the blanks:** [3]
 - (i) _____ = selling price – cost price. [1]
 - (ii) $(9877 \times 7456)^0$ is equal to _____. [1]
 - (iii) The value of $x^{a-b} \times x^{b-a}$ is _____. [1]
16. In Fig, $AB = AC$ and AD is the bisector of $\angle BAC$. [3]



- i. State three pairs of equal parts in triangles ADB and ADC.
 - ii. Is $\triangle ADB \cong \triangle ADC$? Give reasons.
 - iii. Is $\angle B = \angle C$? Give reasons
17. Find the cost of 10 pencils, if cost of 6 pencils is Rs. 72. [3]
 18. A gardener wants to fence a circular garden of diameter 21 m. Find the length of the rope he needs to purchase if he makes 2 rounds of fence. Also find the cost of the rope, if it cost ₹ 4 per meter. (Take $\pi = \frac{22}{7}$) [3]



OR

Length and breadth of a rectangular field are 23.7 m and 14.5 m respectively. Find:

- i. barbed wire required to fence the field
 - ii. area of the field.
19. Solve:- $7n + 1$ when $n = 5$, $n = 10$, $n = 100$. [3]

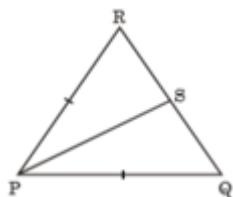
OR

State with reasons, which of the following pairs of terms are like terms and which are unlike terms:

- i. $7x$, $12y$
 - ii. $15x$, $-21x$
 - iii. $-4ab$, $7ba$
 - iv. $3xy$, $3x$
 - v. $6xy^2$, $9x^2y$
 - vi. pq^2 , $-4pq^2$
 - vii. mn^2 , $10mn$
20. If $2^{n+2} - 2^{n+1} + 2^n = c \times 2^n$, find the value of c . [3]
 21. Simplify $\frac{\left(\frac{4}{7}\right)^5 \times \left(\frac{-2}{3}\right)^4}{\left(\frac{4}{9}\right) \times \left(\frac{4}{7}\right)^3}$. [3]
 22. Draw a rough sketch of a triangle with both line and rotational symmetry. [3]
 23. Draw a net pattern for a cuboid? [3]

Section D

24. In the following figure, if S is the midpoint of the side QR, then is $\triangle PQS \cong \triangle PRS$? Also, give reasons. [5]



25. Two numbers are in a ratio of 7:11. If 7 is added to each of the numbers, the ratio becomes 2:3. find the numbers. [5]
26. The circumference of a circular park is 176 m. Find the area of the park. [5]

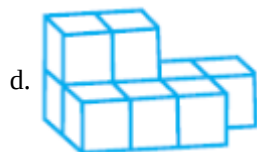
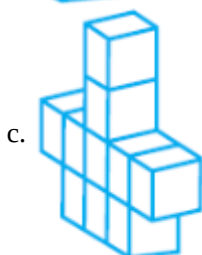
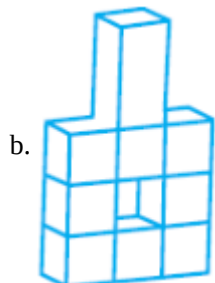
27. Find area of Rectangle when: length = $4ab^2$ and breadth = $-12a^2b$ [5]

28. Simplify $\frac{10 \times 5^{n+1} + 25 \times 5^n}{3 \times 5^{n+2} + 10 \times 5^{n+1}}$ [5]

OR

Simplify: $\frac{3^{-5} \times 10^{-5} \times 125}{5^{-7} \times 6^{-5}}$

29. Count the number of cubes in the given shapes. [5]





BHAGWAN MAHAVEER PUBLIC SR SEC SCHOOL BANGA

Happowal Road Banga

TERM 2 FINAL SCIENCE

Class 07 - Science

Time Allowed: 3 hours

Maximum Marks: 80

General Instructions:

There are 10 MCQ, 10 BLANKS, 10 VSQ, CARRYING 1 MARK EACH.

THERE ARE 8 QUESTIONS OF 2 MARK EACH.

THERE ARE 6 QUESTIONS OF 3 MARK EACH.

THERE ARE 4 QUESTIONS OF 4 MARK EACH.

INTERNAL CHOICE IS PROVIDED IN EACH SECTION.

Section A

1. Silk worm is a _____. [1]
 - a) Egg
 - b) Adult moth
 - c) Earthworms
 - d) Caterpillar
2. Which of the following thermometer do not use mercury? [1]
 - a) Laboratory thermometer
 - b) Clinical thermometer
 - c) Digital thermometer
 - d) Fahrenheit thermometer
3. Thunderstorm are accompanied by [1]
 - a) all of these
 - b) high speed winds
 - c) lighting
 - d) heavy rainfall
4. Choose the incorrect pairing. [1]
 - A. Cockroach – gills
 - B. Earthworm – skin
 - C. Human – lungs
 - D. Insects – spiracles
 - a) (B)
 - b) (D)
 - c) (A)
 - d) (C)
5. Blood cells that protect us from infection are called. [1]
 - a) White blood cells
 - b) Erythrocytes
 - c) Red blood cells
 - d) Thrombocytes
6. The urinary bladder opens into the [1]
 - a) ureters
 - b) kidneys

- c) nephron
d) urethra
7. In sexual reproduction, new plants is obtained from _____. [1]
a) Seeds
b) Stem
c) Leaves
d) Root
8. Seeds dispersed by wind have [1]
a) hooks
b) all of these
c) fibrous covering
d) wings
9. To and fro movement along an axis is called _____. [1]
a) Oscillation
b) Frequency
c) Reverberation
d) Vibration
10. Speed is the ratio of: [1]
a) Time taken to the distance travelled
b) Distance travelled to the time taken
c) Mass of the body to the time taken
d) Area covered to the time

Section B

11. **Fill in the blanks:** [10]
- (i) Rearing of silkworms to obtain the silk is called _____. [1]
(ii) Cotton and jute are _____ fibre. [1]
(iii) Range of clinical thermometer is from _____ °C to _____ °C. [1]
(iv) _____ is the degree of hotness of the body. [1]
(v) Air _____ on heating. [1]
(vi) The trachea branches into thinner tubes called _____. [1]
(vii) Exchange of gases in the _____ takes place through lenticels [1]
(viii) In _____ materials move in the body by diffusion. [1]
(ix) The male and female gametes fuse to form a _____. [1]
(x) Time taken by a pendulum to complete one oscillation is called _____. [1]

Section C

12. Wool is obtained from which body part of sheep? [1]
13. Why ventilators are made close to the ceiling? [1]
14. Name the device used to measure the temperature of an object? [1]
15. Which instrument is used to measure the wind speed? [1]
16. What happens to the air pressure when the wind speed increases? [1]
17. Tiny pores on leaves that help in exchange of gases is called? [1]
18. What is the function of haemoglobin? [1]
19. By what process does Spirogyra reproduce? [1]
20. Name the male and female reproductive parts of a flower. [1]
21. What is SI unit of time? [1]
22. What is shearing of sheep? [2]
23. Why is mercury is used in thermometers? [2]

OR

Convert the following temperature into Kelvin

a) 0⁰C b) 50⁰C c) 100⁰C d) 200⁰C

24. Explain why hot air goes up? [2]

OR

Explain why if we blow air between the balloons of nearly equal size hanging 8-10 cm apart, they come towards each other.

25. Which gas present in the air is essential for aerobic respiration? What is the role of oxygen during respiration? [2]

26. distinguish between Arteries and Vein. [2]

27. What are the components of blood? [2]

28. Write one advantage and one disadvantage of vegetative propagation? [2]

29. Explain uniform and non-uniform motion. [2]

30. How does wool fibre keep the sheep's body warm? [3]

31. Explain briefly the different modes of heat transfer. [3]

32. Explain with the help of an activity that air exerts pressure. [3]

OR

Write safety measures that should be taken against cyclones.

33. Write the differences between respiration and Breathing. [3]

34. How does absorption of water and nutrients take place in the roots? [3]

OR

Explain the excretory system in human beings.

35. A car travels from Delhi to Agra in 3 hours. If the distance between the two cities is 180km, what is average speed of car? [3]

36. What are the similarities and differences between the laboratory thermometer and the clinical thermometer? [4]

OR

Explain how conduction, convection and radiation are minimised in a thermos flask.

37. Draw a flow diagram to show blood circulation in the body of humans and discuss its working in details. [4]

38. a) Distinguish between Asexual and Sexual reproduction. [4]

b) Why is dispersal of seeds an important process?

39. Describe simple pendulum and its working. Hence define Time period of simple pendulum. [4]

OR

A car moving at an average speed of 50 km/hr takes 5 hr to reach its destination. Find the distance covered.

1. Write a note on Mirabai.
2. Define mass media.
3. Why are tropical rainforest called evergreen?
4. List the important aspects of the women's movement.
5. Why is an independent media important in a democracy?
6. What is transhumance?
7. Write two characteristics features of the Kangra school of painting.
8. Why do you think building brands is central to advertising? Explain.

I . Answer the Long questions (do any 6) (6x3=18)

1. Why are social advertisements important?
2. Explain today's schooling and education.
3. Which forests are called monsoon forest? What are the characteristics of these forests?
4. Differentiate between permanent and temporary settlements.
5. Describe the 'lost wax' technique as used by the Cholas to make bronze statues.
6. List the main teachings of Baba Guru Nanak.
7. How did Kathak originate? Trace its journey to becoming a major dance form.

J. On the outline of map mark and label the following (5M)

1. Indus river
2. Delhi
3. Tokyo
4. Awadh
5. Cape Town



Bhagwan Mahaveer Public Sen. Sec. School, Bang

Subject : Social Science

Class : 7th B.B Term II

M.M : 80

A . Multiple Choice questions

(7x1=)

1. Which of these monuments is built entirely of marble?
 - a. Taj Mahal
 - b. Qutub Minar
 - c. Red fort
 - d. Alai Darwaza
2. What was the caravan of the Banjaras called?
 - a. Khel
 - b. Garh
 - c. Barhot
 - d. Tanda
3. What is the main occupation of the people living in the Ganga Brahmaputra basin?
 - a. Mining
 - b. Hunting
 - c. Agriculture
 - d. Forestry
4. Which of these countries does not form a part of the Sahara Desert?
 - a. Egypt
 - b. South Africa
 - c. Morocco
 - d. Algeria
5. Who among the following sellers earns the maximum profit?
 - a. A small trader in a weekly market
 - b. The owner of a showroom of branded goods
 - c. A wholesaler in a city
 - d. A vegetable hawker
6. Which newspaper is run by eight Dalit women in the Chitrakoot district in Uttar Pradesh?
 - a. Hind Samachar
 - b. O Heraldo
 - c. Khabar Lahariya
 - d. Lokmat
7. What % of working women in India are engaged in agricultural work?
 - a. 2 %
 - b. 6.12 %
 - c. 83.6 %
 - d. 11.42 %

B. Write True Or False**(7x1=7)**

1. The prairies are mostly treeless.
2. Roads are the most commonly used means of transport.
3. The Nayanars worshipped Shiva.
4. The third battle of Panipat took place in 1716.
5. Only large companies can advertise their products.
6. In 1980s, women's campaign against dowry led to modification of capital punishment.
7. Most newspapers failed to provide a balanced story.

C. Fill in the blanks**(7x1=7)**

1. There are two gharanas of kathak - the _____ gharana and the _____ gharana.
2. The gonds practiced _____ cultivation.
3. The one- horned rhinoceros is found in the _____ plain.
4. Technology used by the _____ media keeps changing.
5. The coniferous forests are also called _____.
6. Rokeya Sakhawat Hossain wrote the story, _____ to practise her english skills.
7. Ladakh is _____ desert.

D. Match the following**(7x1=7)**

- | | |
|--------------|----------------------------|
| 1. Balochis | present day in Pakistan |
| 2. Gwalior | mass media |
| 3. Oasis | roadside stall |
| 4. Newspaper | sindhias |
| 5. Hawker | manipur |
| 6. Kuchipudi | Andhrapradesh |
| 7. Manipur | a green island in a desert |

E. Put the cross(x) statement against wrong statement**(3x1=3)****1. Local media**

- a. Covers issues involving ordinary people and their daily lives.

- b. Uses local or original languages.

- c. Covers issues related to farmers, shopkeepers, panchayats and local problems.

- d. Concerns National problems and issues

2. a. temporary settlements are occupied for a short time.

- b. People living in desert have temporary settlements.

- c. people live in build homes in permanent settlements.

- d. Today, more and more settlements are temporary settlements.

3. a. advertisements exploit social values to sell products.

- b. They exploit personal emotion to sell products.

- c. They show lives of the rich and powerful people.

- d. They show reality of peoples, lives that we see around us

F. Do as directed**(3M)**

Observe the given pictures carefully and label them.

**G. Answer the very short questions****(7x1=7)**

1. Where is anaconda found?
2. From which ancient language is Bengali derived?
3. List different types / modes of advertising.
4. Why was Rokeya Sakhawat Hossain stopped from learning English?
5. Name the two types of rural settlement.
6. Who instituted the 'Khalsa' and when?
7. Who reached Calicut in 1498?

H. Answer the Short type questions (Do any 8) (8x2=16)

1. List of few temple towns that flourished in the period.

घ - निम्नलिखित शब्दों का समास विग्रह कीजिए।

- 1- आपबीती। 2- चौमासा

ड - निम्नलिखित वाक्यों में विशेषण रेखांकित कर उसका भेद बताइए।

- 1- अंगुलिमाल बहुत क्रूर डाकू था।
2- पचास रुपए में आम खरीदे।

च - निम्नलिखित अशुद्ध वाक्य को शुद्ध करके वाक्य लिखे।

- 1- अनेकों लोग परेड देखने खड़े थे।
2- मैं गुनगुने गर्म पानी से नहाता हूं।

छ - संरचना के आधार पर क्रिया के भेद बताइए।

- 1- रसगुल्ले को देखकर मेरा जी ललचाने लगा।
2- मां नौकरानी से गुड़िया को खीर खिलवाती है।

9 - निम्नलिखित लोकोक्तियां के अर्थ लिखकर वाक्य प्रयोग करें। (2×3=6)

- 1- ऊंची दुकान फीका पकवान। 2- कंगाली में आटा गीला
2- आप भले तो जग भला 4 - एक और एक ग्यारह

10 - रचनात्मक लेखन। (20)

क - दिए गए संकेतों के आधार पर किसी एक विषय पर अनुच्छेद लेखन करें।

इंटरनेट वरदान या अभिशाप। (5)

संकेत बिंदु:

- i) इंटरनेट और दैनिक जीवन
ii) इंटरनेट के विभिन्न क्षेत्र
iii) इंटरनेट के लाभ
iv) इंटरनेट के नकारात्मक प्रभाव

भगवान महावीर पब्लिक सीनियर सेकेंडरी स्कूल बंगा



कक्षा- सातवीं.

विषय- हिंदी

कुल अंश

1- अपठित गद्यांश को पढ़कर पूछे गए प्रश्नों के उत्तर दीजिए।

समय जब हाथ से निकल जाता है। तब पश्चाताप के सिवाय कुछ नहीं रह जा इसलिए आवश्यक है कि समय रहते अपने कर्तव्य का निर्वाह कर लिया ज समय अनमोल है, उसे बचाकर रखने के लिए मनुष्य को क्षुद्ध कार्य करने बचना चाहिए। क्षुद्ध कार्य हमारे समय को व्यर्थ करते हैं। यदि एक समय सार बनाकर चलेंगे, तो हम समय का उचित उपयोग कर पाएंगे अन्यथा समय को व्यर्थ के कार्य में व्यतीत कर देंगे। समय खोने के बाद यथार्थ का बोध दुख भागीदार बनता है। जीवन का एक-एक क्षण मूल्यवान है। अच्छे समय इंतजार करने से अच्छा है कि वर्तमान का अच्छा उपयोग किया जाए।

क- हमें क्षुद्ध कार्य क्यों नहीं करनी चाहिए?

ख- गद्यांश में किस के महत्व का वर्णन किया गया है?

ग- समय का उचित उपयोग करने के लिए हमें क्या करना चाहिए?

घ- समय खोने के बाद यथार्थ का बोध होने पर क्या होता है?

ड- अच्छे समय का इंतजार करने के स्थान पर हमें क्या करना चाहिए?

च- गद्यांश में से टूट कर उचित समुच्चयबोधक भरिए।

हम समय का उचित उपयोग कर पाएंगेसमय को व्यर्थ के कार्यों में व्यतीत देंगे।

2- निम्नलिखित शब्दों के अर्थ लिखिए। (10×1/2)

मुराद, इस्तीफा, ऐब, यंत्र, कुंभ, भरण-पोषण, कायापलट, आगोश, सृष्टि, व्याकुल

3- निम्नलिखित प्रश्नों के उत्तर संक्षिप्त में दीजिए। (1×4=4)

क- रक्त चंदन पाठ के आधार पर बताइए कि बलकरन ने तैमूर से क्या मांगा?

ख- साहब को नशे में देखकर चपरासी क्यों भाग गया?

ग- निंदक क्या करते हैं? आप भले तो जग भला पाठ के आधार पर बताइए ?

घ- सबसे बड़े पोस्टर के लिए कौन सी प्रसिद्ध फिल्म थी?

4- निम्नलिखित प्रश्नों के उत्तर विस्तार से दीजिए। (2×4=8)

क- प्राचीन समय में और वर्तमान समय के फिल्म निर्माण में हुए कोई तीन तकनीकी बदलाव लिखिए?

ख- गांधीजी ने यरवदा जेल को ' यरवदा मंदिर ' की संज्ञा क्यों दी?

ग- कवि ने मां की कौन सी विशेषता देखकर यह कहा कि मां तुम बिल्कुल मां जैसी हो?

घ- मधुमक्खियां शहद की ओर ही आकर्षित होती हैं जहर की ओर नहीं, इन पंक्तियों के माध्यम से लेखक आपको क्या सीख देना चाहता है?

ड- कैसे कह सकते हैं कि के आसिफ एक जुनूनी डायरेक्टर थे? कोई तीन कारण बताओ।

5- निम्नलिखित गद्यांश को पढ़कर पूछे गए प्रश्नों के उत्तर दीजिए। (4)

क-कल हमारे मित्र का रसोईया बिना खबर दिए ही चला गया। बेचारा करता भी क्या सुबह से शाम तक उसको महाशय की दांत खानी पड़ती थी। तूने आज दाल बिल्कुल बिगाड़ दी। उसमें नमक बहुत डाल दिया; अरे बेवकूफ !तूने साग में नमक ही नहीं डाला; यह जली रोटी कौन खाएगा रे आदि की झड़ी लगी रहती थी। जब कोई भी चीज बिगड़ जाती तब तो उसे दिल खोलकर डांटा जाता। पर अच्छा भोजन बनाने पर कभी तारीफ के दो शब्द ना बोले जाते। बेचारा कुछ रुपए का नौकर यंत्र नहीं बन सकता। तंग आकर भाग जाने के सिवा और क्या चारा था?

क- रसोइए को किन बातों पर डांट खानी पड़ती थी?

ख- लेखक के मित्र का रसोईया बिना खबर दिए क्यों चला गया?

ग- बेचारा कुछ रुपए का नौका यंत्र नहीं बन सकता। इन पंक्तियों द्वारा लेखक क्या बताना चाहता है?

घ- अच्छा भोजन बनाने पर क्या नहीं मिलता था?

6- पाठ्यपुस्तक संबंधी व्याकरण: (2×5=10)

निर्देशानुसार उत्तर दो। (कोई पांच भाग करो)

क- दो -दो पर्यायवाची लिखिए। (2)

1-जग....., ,..... सागर....., ,.....

ख- नीचे दिए गए शब्दों के विशेषण बनाइए। (2)

1-आदर 2-ईश्वर

ग- निम्नलिखित शब्दों में से मूल शब्द और प्रत्यय अलग करके लिखिए। (2)

1-लोकप्रियता 2-भारतीय

घ- निम्नलिखित शब्दों का समास विग्रह कीजिए। (2)

1-दानवीर 2-कार्यकुशलता

ड- निम्नलिखित भिन्नार्थक शब्दों के अर्थ लिखें। (2)

1-पवन-पावन 2-हरि, हरी

ड- निम्नलिखित शब्दों के विलोम शब्द लिखें

क्षमा, श्वेत

7. निम्नलिखित शब्दों का वाक्य में इस प्रकार प्रयोग कीजिए कि अर्थ स्पष्ट हो जाए।(5)

मानस -पलट, खुराक, करुणा सागर, कसूर, स्मरण, घृणा

8- व्यावहारिक व्याकरण:। (2×6=12)

क- निम्नलिखित अनेकार्थी शब्दों के दो- दो अर्थ लिखिए।

अंश, कनक

ख- निम्नलिखित अनेक शब्दों के लिए एक शब्द लिखें।

1-जल में रहने वाला। 2-जो कभी न मरे

ग- निम्नलिखित शब्दों में से मूल शब्द व प्रत्यय अलग कीजिए।

1-मिलावट। 2-छलिया

अथवा

परिश्रम का जीवन में महत्त्व

संकेत बिंदु

परिश्रम से अभिप्राय

परिश्रम के लाभ

परिश्रम की उपयोगिता

परिश्रम एवं सफलता में संबंध

ख - अपने क्षेत्र में बिजली संकट से उत्पन्न कठिनाइयों का उल्लेख करते हुए अपने नजदीक की बिजली बोर्ड अधिकारी को पत्र लिखिए। (5)

अथवा

आपके क्षेत्र में आवारा कुत्तों की संख्या दिन प्रतिदिन बढ़ती जा रही है उससे होने वाले खतरों से अवगत करवाते हुए नगर निगम अधिकारी को सुरक्षा हेतु एक पत्र लिखो

ग - आपके विद्यालय के प्रांगण में पुस्तक मेले का आयोजन किया जा रहा है। अपने स्कूल के विद्यार्थियों को इस में भाग लेने हेतु सूचना पत्र लिखिए। (5)

अथवा

आपका स्कूल गर्मियों की छुट्टियों में दिल्ली से गोवा की यात्रा का आयोजन कर रहा है स्कूल के विद्यार्थियों को इस यात्रा से संबंधित सूचना देते हुए सूचना पत्र लिखिए।

घ- अपने प्रिय मित्र के विदेश चले जाने पर होने वाले दुख का वर्णन डायरी लेखन में कीजिए। (5)

अथवा

आप अंग्रेजी के पेपर के स्थान पर हिंदी के पेपर की तैयारी करके परीक्षा भवन में आ गए और प्रश्नपत्र को देखकर आपको जो जो परेशानी हुई, उस पर डायरी लेखन कीजिए।

अथवा

परिश्रम का जीवन में महत्त्व

संकेत बिंदु

परिश्रम से अभिप्राय

परिश्रम के लाभ

परिश्रम की उपयोगिता

परिश्रम एवं सफलता में संबंध

ख - अपने क्षेत्र में बिजली संकट से उत्पन्न कठिनाइयों का उल्लेख करते हुए अपने नजदीक की बिजली बोर्ड अधिकारी को पत्र लिखिए। (5)

अथवा

आपके क्षेत्र में आवारा कुत्तों की संख्या दिन प्रतिदिन बढ़ती जा रही है उससे होने वाले खतरों से अवगत करवाते हुए नगर निगम अधिकारी को सुरक्षा हेतु एक पत्र लिखो

ग - आपके विद्यालय के प्रांगण में पुस्तक मेले का आयोजन किया जा रहा है। अपने स्कूल के विद्यार्थियों को इस में भाग लेने हेतु सूचना पत्र लिखिए। (5)

अथवा

आपका स्कूल गर्मियों की छुट्टियों में दिल्ली से गोवा की यात्रा का आयोजन कर रहा है स्कूल के विद्यार्थियों को इस यात्रा से संबंधित सूचना देते हुए सूचना पत्र लिखिए।

ड- अपने प्रिय मित्र के विदेश चले जाने पर होने वाले दुख का वर्णन डायरी लेखन में कीजिए। (5)

अथवा

आप अंग्रेजी के पेपर के स्थान पर हिंदी के पेपर की तैयारी करके परीक्षा भवन में आ गए और प्रश्नपत्र को देखकर आपको जो जो परेशानी हुई, उस पर डायरी लेखन कीजिए।

i. ਹੇਠ ਲਿਖਿਆਂ ਵਿੱਚੋਂ ਕਿਸੇ ਦੇ ਦੇ ਕੋਈ ਦੋ-ਦੋ ਅਗੇਤਰ ਬਣਾਓ:-

ਹਮ, ਅਪ, ਮਹਾ

ii. ਹੇਠ ਲਿਖਿਆਂ ਵਿੱਚੋਂ ਕਿਸੇ ਦੇ ਦੇ ਕੋਈ ਦੋ-ਦੋ ਪਿਛੇਤਰ ਬਣਾਓ:-

ਸਾਰ, ਦਾਰੀ, ਸਤਾਨ

iii. ਹੇਠ ਲਿਖੇ ਵਾਕਾਂ ਵਿੱਚੋਂ ਕਿਰਿਆ ਸ਼ਬਦ ਚੁਣੋ:-

(i) ਬੱਚੇ ਖੇਡ ਰਹੇ ਹਨ।

ਅਸੀਂ ਪੜ੍ਹ ਰਹੇ ਸੀ।

iv. ਹੇਠ ਲਿਖੇ ਵਾਕ ਕਾਲ ਦੀ ਕਿਸ ਕਿਸਮ ਦੇ ਹਨ:-

ਮਹਿਮਾਨ ਚਾਹ ਪੀ ਰਹੇ ਹਨ।

ਕਿਸਾਨ ਨੇ ਫਸਲ ਬੀਜ ਦਿੱਤੀ ਸੀ।

v. ਹੇਠ ਲਿਖੇ ਸ਼ਬਦਾਂ ਵਿੱਚੋਂ ਕਿਸੇ ਦੇ ਦੋ ਵਿਰੋਧੀ ਸ਼ਬਦ ਚੁਣ ਕੇ ਲਿਖੋ:-

ਘੱਟ, ਆਸਤਕ, ਹੱਸਣਾ

vi. ਹੇਠ ਲਿਖੇ ਮੁਹਾਵਰਿਆਂ ਵਿੱਚੋਂ ਕੋਈ ਦੋ ਮੁਹਾਵਰਿਆਂ ਨੂੰ ਇਸ ਤਰ੍ਹਾਂ ਵਾਕਾਂ ਵਿੱਚ ਵਰਤੋਂ ਕਿ ਉਹਨਾਂ ਦੇ ਅਰਥ ਸਪੱਸ਼ਟ ਹੋ ਜਾਣ:-

ਇੱਕ ਕੁੱਤੇ ਦਾ ਵੈਰ, ਹੱਥ ਪੈਰ ਮਾਰਨੇ, ਸਿਰ ਖਾਣਾ

vii. ਹੇਠ ਲਿਖਿਆਂ ਵਿੱਚੋਂ ਕਿਸੇ ਇੱਕ ਦਾ ਉੱਤਰ ਲਿਖੋ :-

ਪੜਨਾਂਵ ਕਿਸਨੂੰ ਆਖਦੇ ਹਨ?

ਵਿਸ਼ੇਸ਼ਣ ਦੀ ਪਰਿਭਾਸ਼ਾ ਲਿਖੋ?

10. ਹੇਠ ਲਿਖੇ ਕਿਸੇ ਇਕ ਵਿਸ਼ੇ ਤੇ ਲੇਖ ਰਚਨਾ ਕਰੋ:- (8)

ਸ੍ਰੀ ਗੁਰੂ ਨਾਨਕ ਦੇਵ ਜੀ

ਨੁਕਤੇ:- ਜਾਣ ਪਛਾਣ, ਜਨਮ ਅਤੇ ਮਾਤਾ ਪਿਤਾ, ਬਚਪਨ, ਵਿੱਦਿਆ ਪ੍ਰਾਪਤੀ, ਵਿਆਹ ਅਤੇ ਬੱਚੇ, ਸੱਚਾ ਸੌਦਾ, ਮੋਦੀ ਖਾਨੇ ਵਿੱਚ ਨੌਕਰੀ, ਵੇਈ ਨਦੀ ਵਿੱਚ ਅਲੋਪ ਹੋਣਾ, ਚਾਰ ਉਦਾਸੀਆਂ, ਜੋਤੀ ਜੋਤ ਸਮਾਉਣਾ ਜਾਂ

ਸ਼ਹੀਦ ਭਗਤ ਸਿੰਘ

ਨੁਕਤੇ:- ਜਾਣ ਪਛਾਣ, ਜਨਮ ਅਤੇ ਮਾਤਾ ਪਿਤਾ, ਬਚਪਨ, ਵਿੱਦਿਆ ਪ੍ਰਾਪਤੀ, ਰਾਜਸੀ ਜੀਵਨ, ਅਸੈਂਬਲੀ ਵਿੱਚ ਬੰਬ ਸੁੱਟਣਾ, ਮੁਕੱਦਮਾ ਚੱਲਣਾ, ਫਾਂਸੀ ਦੀ ਸਜ਼ਾ

11. ਕਿਸੇ ਅਖਬਾਰ ਦੇ ਸੰਪਾਦਕ ਨੂੰ ਇੱਕ ਪੱਤਰ ਲਿਖੋ ਜਿਸ ਵਿੱਚ ਅੱਜ ਕੱਲ੍ਹ ਵੱਧ ਰਹੀ ਮਹਿੰਗਾਈ ਦਾ ਜ਼ਿਕਰ ਹੋਵੇ। (8)

Bhagwan Mahaveer Public Sen. Sec. School, Banga



ਕਲਾਸ:- ਸੱਤਵੀਂ ਵਿਸ਼ਾ :- ਪੰਜਾਬੀ

ਸਮਾਂ:- ਤਿੰਨ ਘੰਟੇ

ਕੁੱਲ ਅੰਕ:- 80

ਆਮ ਨਿਰਦੇਸ਼

***ਹੇਠ ਲਿਖੇ ਨਿਰਦੇਸ਼ਾਂ ਨੂੰ ਧਿਆਨ ਨਾਲ ਪੜ੍ਹੋ ਅਤੇ ਉਹਨਾਂ ਦਾ ਪਾਲਣ ਕਰੋ:-**

* ਸਾਰੇ ਪ੍ਰਸ਼ਨ ਲਾਜ਼ਮੀ ਹਨ।

* ਪ੍ਰਸ਼ਨਾਂ ਵਿੱਚ ਦਿੱਤੀ ਗਈ ਅੰਦਰੂਨੀ ਚੋਣ ਨੂੰ ਧਿਆਨ ਨਾਲ ਦੇਖ ਕੇ ਨਿਰਦੇਸ਼ਾਂ ਅਨੁਸਾਰ ਹੱਲ ਕੀਤਾ ਜਾਵੇ।

* ਲਿਖਾਈ ਸਾਫ ਅਤੇ ਸੁੱਧ ਲਿਖੀ ਜਾਵੇ।

* ਸਹੀ ਪ੍ਰਸ਼ਨ ਨੰਬਰ ਲਿਖ ਕੇ ਉੱਤਰਾਂ ਨੂੰ ਧਿਆਨ ਨਾਲ ਉੱਤਰ- ਸ਼ੀਟ 'ਤੇ ਲਿਖਿਆ ਜਾਵੇ।

1. ਹੇਠ ਲਿਖੇ ਪੈਰੇ ਨੂੰ ਧਿਆਨ ਨਾਲ ਪੜ੍ਹੋ ਅਤੇ ਪੁੱਛੇ ਗਏ ਪ੍ਰਸ਼ਨਾਂ ਦੇ ਉੱਤਰ ਦਿਓ:- (1x 6=

ਅੰਗਰੇਜ਼ ਸਰਕਾਰ ਨੇ ਸਾਈਮਨ ਕਮਿਸ਼ਨ ਦਾ ਵਿਰੋਧ ਕਰਦੇ ਪ੍ਰਸਿੱਧ ਨੇਤਾ ਲਾਜਪਤ ਰਾਏ ਨੂੰ ਲਾਠੀਆਂ ਮਾਰ ਸ਼ਹੀਦ ਕਰ ਦਿੱਤਾ। ਭਗਤ ਸਿੰਘ ਤੇ ਉਸ ਦੇ ਸਾਥੀਆਂ ਨੇ ਸਕਾਟ ਨੂੰ ਮਾਰ ਕੇ ਲਾਲਾ ਲਾਜਪਤ ਰਾਏ ਦੀ ਦਾ ਬਦਲਾ ਲੈਣ ਦਾ ਪ੍ਰਣ ਕੀਤਾ, ਪਰੰਤੂ ਸਕਾਟ ਦੀ ਥਾਂ ਸਾਂਡਰਸ ਗੋਲੀ ਦਾ ਨਿਸ਼ਾਨਾ ਬਣ ਗਿਆ। ਪੁ ਇਨ੍ਹਾਂ ਦੇ ਪਿੱਛੇ ਲੱਗ ਕੇ ਇਨ੍ਹਾਂ ਦੀ ਭਾਲ ਕਰਨ ਲੱਗੀ। ਭਗਤ ਸਿੰਘ, ਰਾਜਗੁਰੂ ਤੇ ਚੰਦਰ ਸ਼ੇਖਰ ਅ ਗੋਲੀਆਂ ਚਲਾਉਂਦੇ ਹੋਏ ਬਚ ਕੇ ਬਾਹਰ ਨਿਕਲ ਗਏ। ਜਾਣ ਤੋਂ ਪਹਿਲਾਂ ਇਹ ਉੱਥੇ ਇਸਤਿਹਾਰ ਸੁੱਟ ਜਿਨ੍ਹਾਂ 'ਤੇ ਸਾਂਡਰਸ ਦੇ ਕਤਲ ਦਾ ਕਾਰਨ ਸਪਸ਼ਟ ਕੀਤਾ ਹੋਇਆ ਸੀ। ਉਸ ਰਾਤ ਭਗਤ ਸਿੰਘ ਵਾਲ ਕਟ ਸਿਰ ਤੇ ਹੈਟ ਪਹਿਨ ਕੇ ਦੁਰਗਾ ਭਾਬੀ ਦੀ ਸਹਾਇਤਾ ਨਾਲ ਕਲੱਕਤਾ ਵਾਲੀ ਗੱਡੀ ਚੜ੍ਹ ਗਏ।

ਪ੍ਰਸ਼ਨ:-

i. ਅੰਗਰੇਜ਼ ਸਰਕਾਰ ਨੇ ਸਾਈਮਨ ਕਮਿਸ਼ਨ ਦਾ ਵਿਰੋਧ ਕਰਦੇ ਕਿਸ ਪ੍ਰਸਿੱਧ ਨੇਤਾ ਨੂੰ ਲਾਠੀਆਂ ਮਾਰ ਕੇ ਸ਼ਹੀਦ ਕਰ ਦਿੱਤਾ?

ii. ਬਦਲਾ ਲੈਣ ਦਾ ਪ੍ਰਣ ਕਿਸ ਨੇ ਕੀਤਾ?

iii. ਸਕਾਟ ਦੀ ਥਾਂ ਕੌਣ ਗੋਲੀ ਦਾ ਨਿਸ਼ਾਨਾ ਬਣ ਗਿਆ?

iv. ਗੋਲੀਆਂ ਚਲਾਉਂਦੇ ਹੋਏ ਕੌਣ ਬਚ ਕੇ ਬਾਹਰ ਨਿਕਲ ਗਏ?

v. ਬਾਹਰ ਜਾਣ ਤੋਂ ਪਹਿਲਾਂ ਉਹ ਉੱਥੇ ਕੀ ਸੁੱਟ ਕੇ ਗਏ ?

vi. ਭਗਤ ਸਿੰਘ ਵਾਲ ਕਟਾ ਕੇ ਅਤੇ ਹੈਟ ਲੈਕੇ ਕਿੱਥੇ ਦੀ ਗੱਡੀ ਚੜ੍ਹ ਗਿਆ ?

2. ਸਹੀ ਉੱਤਰ ਦੀ ਚੋਣ ਕਰੋ:-

(1x5=5)

i. ਰਮਨ ਦੀ ਰਾਇ ਅਨੁਸਾਰ ਗੋਜੂ ਕਿਹੋ ਜਿਹਾ ਮੁੰਡਾ ਸੀ ?

- i. ਇਮਾਨਦਾਰ ii. ਬੇਈਮਾਨ iii. ਮਤਲਬੀ

ii. ਅਖਬਾਰ ਵਿੱਚ ਕਿੱਥੋਂ ਕਿੱਥੋਂ ਦੀਆਂ ਖ਼ਬਰਾਂ ਛਪਦੀਆਂ ਹਨ ?

- i. ਘਰ ਬਾਰ ਦੀਆਂ ii. ਦੇਸ਼ਾਂ ਵਿਦੇਸ਼ਾਂ ਦੀਆਂ iii. ਪਿੰਡਾਂ ਦੀਆਂ

iii. ਸਾਰਾਗੜ੍ਹੀ ਦੀ ਲੜਾਈ ਵਿੱਚ ਸਿੱਖ ਰੈਜੀਮੈਂਟ ਦੇ ਕਿੰਨੇ ਸੈਨਿਕ ਸ਼ਹੀਦ ਹੋਏ?

- i. 41 ii. 31 iii. 21

iv. ਮਾਸਟਰ ਜੀ ਬੱਚਿਆਂ ਨੂੰ ਕਿੰਨੇ ਸਮੇਂ ਬਾਅਦ ਆਉਣ ਬਾਰੇ ਕਹਿ ਕੇ ਗਏ ?

- i. ਇੱਕ ਮਿੰਟ ii. ਪੰਜ ਮਿੰਟ iii. ਛੇ ਮਿੰਟ

v. ਪੰਜਾਬ ਸ਼ਬਦ ਦਾ ਸ਼ਾਬਦਿਕ ਅਰਥ ਕੀ ਹੈ?

- i. ਪੰਜ ਦਰਿਆਵਾਂ ਦੀ ਧਰਤੀ ii. ਪੰਜਾਹ ਦਰਿਆਵਾਂ ਦੀ ਧਰਤੀ
iii. ਨੌਂ ਦਰਿਆਵਾਂ ਦੀ ਧਰਤੀ

3. ਹੇਠ ਲਿਖੇ ਪ੍ਰਸ਼ਨਾਂ ਦੇ ਉੱਤਰ ਇੱਕ ਵਾਕ ਜਾਂ ਇੱਕ ਸ਼ਬਦ ਵਿਚ ਦਿਉ :- (1x5=5)

i. ਕਮਲਾ ਦਾ ਹਾਰ ਕਿੱਥੇ ਡਿੱਗ ਗਿਆ ਸੀ?

ii. ਭਾਸ਼ਾ ਦੇ ਗਣਿਤ ਤੋਂ ਸਾਨੂੰ ਕੀ ਸਿੱਖਣ ਨੂੰ ਮਿਲਦਾ ਹੈ?

iii. ਕਲਗੀ ਵਾਲੇ ਮਾਹੀ ਪੰਜਾਬ ਨੂੰ ਕੀ ਬਖਸ਼ ਗਏ ?

iv. ਲੋਕਾਂ ਨੇ ਇੱਕ ਮੁੱਠ ਹੋ ਕੇ ਕਿਸ ਦੀ ਮਦਦ ਕੀਤੀ ?

v. ਗੁਰੂ ਨਾਨਕ ਦੇਵ ਜੀ ਨਾਲ ਕੌਣ ਕੌਣ ਮਨੀਕਰਨ ਸਾਹਿਬ ਦੀ ਧਰਤੀ ਤੇ ਆਏ ਸਨ?

4. ਹੇਠ ਲਿਖੇ ਪ੍ਰਸ਼ਨਾਂ ਦੇ ਉੱਤਰ 25-30 ਸ਼ਬਦਾਂ ਵਿੱਚ ਲਿਖੋ:- (2x4=8)

i. ਖਲੀਫੇ ਨੇ ਕਿਹੜਾ ਪ੍ਰਸ਼ਨ ਪੁੱਛਿਆ ਅਤੇ ਕਿਸ ਨੇ ਉਸਦਾ ਸਹੀ ਜਵਾਬ ਦਿੱਤਾ ?

ii. ਇਸ਼ਨਾਨ ਕਰਦਿਆਂ ਮਾਤਾ ਪਾਰਵਤੀ ਜੀ ਦੀ ਚਿੰਤਾਮਣੀ ਕਿੱਥੇ ਡਿੱਗ ਗਈ ਅਤੇ ਭਗਵਾਨ

ਸ਼ਿਵ ਨੇ ਕਿਸ ਨੂੰ ਇਸ ਮਣੀ ਨੂੰ ਲੱਭਣ ਭੇਜਿਆ ?

iii. ਅੰਤ ਵਿੱਚ ਖਲੀਫੇ ਦੇ ਖਾਸ ਗੁਲਾਮ ਨੇ ਕੀ ਜਵਾਬ ਦਿੱਤਾ ?

iv. ਕਵੀ ਨੇ ਫ਼ਰਿਸ਼ਤੇ ਤੋਂ ਕੀ ਵਰ ਮੰਗਿਆ ਸੀ?

v. ਅਖਬਾਰਾਂ ਵਿੱਚ ਬੱਚਿਆਂ ਲਈ ਕੀ - ਕੀ ਛੱਪਦਾ ਹੈ ?

5. ਖਾਲੀ ਸਥਾਨ ਭਰੋ:-

(1X4= 4)

i. ਰਣਜੀਤ ਇੱਕ _____ ਵਿਦਿਆਰਥੀ ਸੀ ।

ii. ਅਖਬਾਰਾਂ ਵਿੱਚ ਦੇਸ਼ਾਂ _____ ਦੀਆਂ ਖ਼ਬਰਾਂ ਛਪਦੀਆਂ ਹਨ।

iii. ਗੁਣ ਵਜ਼ੀਰ _____ ਬਦਲ ਕੇ ਲੋਕਾਂ 'ਚ ਘੁੰਮਣ ਲੱਗਾ।

iv. ਕਮਲਾ ਨੇ ਰਸੋਈ ਵਿੱਚ ਫਰਸ਼ 'ਤੇ _____ ਰੁਪਏ ਦਾ ਨੋਟ ਸੁੱਟ ਦਿੱਤਾ।

6. ਹੇਠਾਂ ਦਿੱਤੇ ਸ਼ਬਦਾਂ ਦੇ ਅਰਥ ਲਿਖੋ:- (1x5=5)

ਯਤੀਮ, ਹੱਥ ਵਟਾਉਣਾ, ਸਵਾਲ, ਵਿਹਲਾ, ਮਿਸਾਲ, ਪਰਵਾਨੇ

7. ਹੇਠਾਂ ਲਿਖੇ ਸ਼ਬਦਾਂ ਦੇ ਵਾਕ ਬਣਾਉ:- (1x5=5)

ਸੈਨਿਕ, , ਫ਼ਰਿਸ਼ਤਾ, ਚਿੰਤਾਮਣੀ, ਗੁਲਾਮ, ਭੈਅ, ਜਵਾਬ

8. ਪਾਠ ਪੁਸਤਕ ਤੇ ਅਧਾਰਿਤ ਵਿਆਕਰਨ ਭਾਗ:- (2x5=10)

ਕੋਈ ਪੰਜ ਪ੍ਰਸ਼ਨ ਹੱਲ ਕਰੋ:-

i. ਹੇਠਾਂ ਦਿੱਤੇ ਸ਼ਬਦਾਂ ਦੇ ਦੋ-ਦੋ ਸਮਾਨਾਰਥੀ ਸ਼ਬਦ ਲਿਖੋ:- (i) ਸਖਤ, (ii) ਬੁੱਧੀਮਾਨ

ii. ਦਿੱਤੇ ਗਏ ਸ਼ਬਦਾਂ ਨੂੰ ਸੁੱਧ ਕਰਕੇ ਲਿਖੋ:- (i) ਛਹੀਦੀ, (ii) ਪਿਰੀਖਆ

iii. ਬਹੁਤੇ ਸ਼ਬਦਾਂ ਦੀ ਥਾਂ ਇੱਕ ਸ਼ਬਦ ਲਿਖੋ:- (i) ਵਿੱਦਿਆ ਪ੍ਰਾਪਤ ਕਰਨ ਵਾਲਾ:-

(ii) ਦੇਸ਼ ਨਾਲ ਧੋਖਾ ਕਰਨ ਵਾਲਾ :-

iv. ਦਿੱਤੇ ਗਏ ਵਾਕਾਂ ਨੂੰ ਸਹੀ ਤਰਤੀਬ ਵਿੱਚ ਲਿਖੋ:-

ਰਾਜਾ ਸੀ ਸ਼ਕਤੀਸ਼ਾਲੀ ਸੁਰਜਨ ਇੱਕ

ਪਰਜਾ ਦਾ ਸ਼ਕਤੀ ਪਿੱਛੇ ਰਾਜੇ ਦੀ ਯੋਗਦਾਨ ਹੁੰਦਾ ਹੈ।

v. ਹੇਠਾਂ ਲਿਖੇ ਵਾਕਾਂ ਦੀ ਵਚਨ ਬਦਲੀ ਕਰੋ:-

ਦੀਪ ਨੇ ਨਵਾਂ ਪੈਂਨ ਖਰੀਦਿਆ ।

ਮੁੰਡਾ ਪੜ੍ਹ ਰਿਹਾ ਹੈ ।

vi. ਹੇਠ ਲਿਖੇ ਵਾਕਾਂ ਵਿੱਚੋਂ ਕਿਸੇ ਦੇ ਦੋ ਲਿੰਗ ਬਦਲ ਕੇ ਲਿਖੋ:-

ਕੁੜੀਆਂ ਪੜ੍ਹ ਰਹੀਆਂ ਸਨ।

ਉਸਦਾ ਭਰਾ ਅਮਰੀਕਾ ਰਹਿੰਦਾ ਹੈ।

ਦੀਪਕ ਦੇ ਦਾਦਾ ਜੀ ਰੋਜ਼ ਉਸਨੂੰ ਕਹਾਣੀ ਸੁਣਾਉਂਦੇ ਹਨ।

9. ਵਿਵਹਾਰਿਕ ਵਿਆਕਰਨ:- (2x6=12)

ਹੇਠ ਲਿਖਿਆਂ ਵਿੱਚੋਂ ਛੇ ਪ੍ਰਸ਼ਨ ਕਰੋ*

ਜਾਂ

ਤੁਸੀਂ ਕੋਈ ਕਿਤਾਬ ਪੜ੍ਹੀ ਹੈ ਜੋ ਤੁਹਾਨੂੰ ਬਹੁਤ ਵਧੀਆ ਲੱਗੀ। ਤੁਸੀਂ ਚਾਹੁੰਦੇ ਹੋ ਕਿ ਇਹ ਕਿਤਾਬ ਬਾਰੇ ਬਾਕੀ ਲੋਕਾਂ ਨੂੰ ਵੀ ਪਤਾ ਲੱਗੇ। ਇਸ ਬਾਰੇ ਇੱਕ ਅਖਬਾਰ ਦੇ ਸੰਪਾਦਕ ਨੂੰ ਪੱਤਰ ਲਿਖ ਕੇ ਉਸਨੂੰ ਇਸ ਕਿਤਾਬ ਬਾਰੇ ਅਖਬਾਰ ਵਿੱਚ ਛਾਪਣ ਲਈ ਕਰੋ।

12. ਤੁਹਾਡੇ ਸਕੂਲ ਦੇ ਹੈਲਥ ਐਂਡ ਵੈਲਨੈਸ ਕਲੱਬ ਵੱਲੋਂ ਫੁੱਟਬਾਲ ਟੂਰਨਾਮੈਂਟ ਕਰਵਾਇਆ ਜਾ ਰਿਹਾ ਹੈ ਇਸ ਸਬੰਧੀ ਇੱਕ ਨੋਟਿਸ ਤਿਆਰ ਕਰੋ।

ਜਾਂ

ਦਿੱਤੇ ਹੋਏ ਚਿੱਤਰ ਦਾ ਵਰਨਣ 50- 60 ਸ਼ਬਦਾਂ ਵਿੱਚ ਕਰੋ।

(4)



ਜਾਂ

ਤੁਸੀਂ ਕੋਈ ਕਿਤਾਬ ਪੜ੍ਹੀ ਹੈ ਜੋ ਤੁਹਾਨੂੰ ਬਹੁਤ ਵਧੀਆ ਲੱਗੀ। ਤੁਸੀਂ ਚਾਹੁੰਦੇ ਹੋ ਕਿ ਇਹ ਕਿਤਾਬ ਬਾਰੇ ਬਾਕੀ ਲੋਕਾਂ ਨੂੰ ਵੀ ਪਤਾ ਲੱਗੇ। ਇਸ ਬਾਰੇ ਇੱਕ ਅਖਬਾਰ ਦੇ ਸੰਪਾਦਕ ਨੂੰ ਪੱਤਰ ਲਿਖ ਕੇ ਉਸਨੂੰ ਇਸ ਕਿਤਾਬ ਬਾਰੇ ਅਖਬਾਰ ਵਿੱਚ ਛਾਪਣ ਲਈ ਕਰੋ।

12. ਤੁਹਾਡੇ ਸਕੂਲ ਦੇ ਹੈਲਥ ਐਂਡ ਵੈਲਨੈਸ ਕਲੱਬ ਵੱਲੋਂ ਫੁੱਟਬਾਲ ਟੂਰਨਾਮੈਂਟ ਕਰਵਾਇਆ ਜਾ ਰਿਹਾ ਹੈ ਇਸ ਸਬੰਧੀ ਇੱਕ ਨੋਟਿਸ ਤਿਆਰ ਕਰੋ।

ਜਾਂ

ਦਿੱਤੇ ਹੋਏ ਚਿੱਤਰ ਦਾ ਵਰਨਣ 50- 60 ਸ਼ਬਦਾਂ ਵਿੱਚ ਕਰੋ।

(4)

