



BHAGWAN MAHAVEER PUBLIC SR. SEC. SCHOOL, BANGA
CLASS 6 JS and FS
SUBJECT: ARTIFICIAL INTELLIGENCE
MTP- TERM-II

A. MCQ

1X8=8

1. Which of the following does not hold true for attributes?
 - a. Attributes provide additional information to the tag.
 - b. Attributes appear inside the ON tag.
 - c. You cannot define your own attributes in HTML5.
2. Which of the following is used to hold the content of a webpage?
 - a. Container tag
 - b. Empty tag
 - c. <body> tag
3. Which of the following is not a valid border property?
 - a. border-radius
 - b. border-style
 - c. border-dotted
4. AI systems that can learn, understand, and behave like humans is called
 - a. Artificial Narrow Intelligence.
 - b. Artificial General Intelligence.
 - c. Artificial Super Intelligence.
5. The ability of machines to build analytical models is called
 - a. Deep Learning.
 - b. Machine Learning.
 - c. Neural Network.
6. Text written in all capital letters is considered
 - a. yelling.
 - b. singing.
 - c. a sudden expression.
7. This option reports a complaint against a particular user over the platform for cyber harassment.
 - a. Report Like
 - b. Report Abuse
 - c. Block
8. Defaming someone by posting their personal information on social media, is a form of
 - a. cybercrime.
 - b. hacking.
 - c. networking.

B. Fill in the blanks:

1X8=8

1. A _____ is used to view the html file.
2. A web page is composed of multimedia content which includes text, _____, audio, and video.
3. The _____ property is used to set the radius to get a rounded corner border.
4. A Wi-Fi network uses _____ to establish internet connection.
5. Intelligent systems refer to an approach that employ computers in _____
6. _____ uses neural networks to process data to gain in sights and give solutions.
7. A _____ is a person who has the knowledge and skills to effectively use digital technologies to communicate and engage with society.
8. A / An _____ digital footprint also includes your activities on the Internet other than social media.

C. Write True or False.

1X8=8

1. The head section contains the information about the webpage.
2. The collection of all the websites available on the Internet world wide is called a network.
3. Reactive machines require memories or any past experiences to react.
4. Intelligent systems are the ones that employ computers in decision-making.
5. You can access all your files on cloud without storing them on your computer.
6. You should always give away too much information over the Internet.
7. Trolling on the Internet can amount to cyber bullying.
8. While using social media, netiquette needs to be followed.

D. Write the Full Forms for the following: (Do any 6)**1X6=6**

1. WLAN 2. URL 3. DSL 4. ANN 5. NLP6.ANI 7. WYSIWYG

E. Match the following:**1X6=6**

- | | |
|----------------------------|------------------------------------|
| 1. Reactive machines | a. can understand emotions of user |
| 2. Limited memory machines | b. have their own beliefs |
| 3. Theory of mind | c. learn from historical data |
| 4. Self-aware AI | d. emulate human mind |
| 5. Google Drive | e. Collective profile information |
| 6. Digital footprint | f. free service |

F. Write the Shortcut Keys for the following: (Do any 6)**1X6=6**

1. Used to switch between open apps.
2. Used to open file explorer.
3. Used to lock device.
4. Used to go to the beginning of the document.
5. Used to minimize all the open apps.
6. Used to close the ongoing program.
7. Used to take a screenshot and stores and it in the clipboard.

G. Very Short Question Answer: (Do any 8)**1X8=8**

1. These tags help us to explain our codes, but are ignored by the browsers.
2. In CSS, these properties allow you to set the values of multiple CSS properties simultaneously .
3. It refers to the tag to which style is to be applied.
4. These properties are used to modify visual appearance of the text.
5. Name the media that allows you to make or receive telephone calls even when you are connected to the internet.
6. Name the mode that is generally used in those areas where other types of broadband are not available.
7. Name three major domains of AI.
8. Name three websites that you use for online shopping.
9. Name three websites where you have shared your personal information.

H. Short Question Answers: (Do any 6)**2X6=12**

1. What is an attribute? Explain with the help of an example.
2. Explain the purpose and advantages of using CSS.
3. Explain background-repeat Property with an example.
4. Differentiate between ANI, AGI and ASI.
5. What are the ethical issues covered in development of AI?
6. What do you understand by wireless network? List the things needed to set up a Wi-Fi connection.
7. What would a positive digital footprint show?

I. Long Question Answers: (Do any 6)**3X6=18**

1. Discuss the HTML5 document structure in detail.
2. Discuss the syntax for writing the style-rule.
3. Explain the different types of AI based on functionalities.
4. Write the steps for sharing files on Google Drive.
5. Differentiate between a Dial-up and a broadband connection.
6. Why are cybercrimes punishable by law?
7. What etiquettes should you follow on social media?



Bhagwan Mahaveer Public Sr Sec School Banga

Class – 6th (JS& FS) English

Model Test Paper

Time Allowed: 3hours

M.M:80

Section -A

(8*2=16)

Q1 (A)Reading passage

(1*8=8)

Read the following passage carefully.

SHARK TRUTHS

(1) Sharks belong to a special category of fish called elasmobranchs. This includes skates, rays, chimeras and their relatives as well. Elasmobranchs have skeletons made of cartilage, instead of the hard, calcified bone that gives our mammalian bodies structure. Pull on your ears - see how they are soft and pliable i.e. easy to fold or bend? Our ears have cartilage. Our noses have cartilage, too. Cartilage gives shape, but it's softer than bone. Sharks aren't bony fish. Another outward difference between most "fish" we can think of and "sharks" is that sharks appear to lack scales. Actually sharks do have tiny structures on their skin called "placoid" scales or "dermal denticles", which help to reduce friction as they swim through the water.

(2) Are sharks sharp-sighted-oh, I mean, sharp-sighted? Scientists think they probably have good long-range vision. They also have excellent hearing, although, unlike humans, their ears are located inside their heads, instead of outside. In addition to their ears, they have a special organ called the "lateral line" which is a fish characteristic. The lateral line helps "hear" vibrations under water.

(3) And what about those terrible teeth? They're actually rather terrific teeth-sharks that regrow their teeth many times in their lives. The teeth are layered, waiting to sprout up and replace any that fall or break off.

(4) Sharks have been around for hundreds of millions of years - the ancestors of modern sharks were swimming about 400 million years ago. That makes them older than dinosaurs.

Write the Option you consider the most appropriate.

- 1) Shark's skeletons are not made of
 - a) bones
 - b) Cartilage
 - c) Scales
 - d) hard calcium
- 2) 'Dermal denticles' help sharks
 - a) to stay in water
 - b) to breathe properly.
 - c) to swim better
 - d) to remain lightweight
- 3) which physical feature helps Sharks pickup vibration underwater
 - a) the ears located inside the head.
 - b) the lateral line.
 - c) terrific teeth
 - d) 'placoid scales
- 4) "That makes them.....(paragraph 4)Here 'them' refers to
 - a) sharks
 - b) human beings
 - c) dinosaurs
 - d) modern sharks
- 5) The word 'ancestors'(paragraph 4) means
 - a) the grandparents
 - b) from whom one has evolved

c)the ones who have died
descended.

d) from whom one has

6) State whether the following statements are true or false.

a)Sharks have skeletons made of bones.

b) Sharks can pick up vibrations underwater.

7) List two physical features of sharks that are different from human beings.

(B)

(1*8=8)

In the examination system that exists today, the capabilities and the knowledge of students are being evaluated only by the performance in the final exam. But the backdrop of the system is that it is not the student who is being judged but his performance on that particular date and time, and under particular circumstances that is being inspected. The right way is to evaluate the individuals throughout the year and then decide about the performance.

Examination time is the time to revise all that one has studied throughout the year, cram formulae, mug up history lessons, and brush up experiments. But unfortunately, this is also the time for nervous breakdowns and stress-related disorders. The desire to perform best at the time of the final examinations is significant enough to trigger stress-related disorders in students. Some become hyper while others become depressed. The former develop anxiety and the latter end up with depression. Both are equally dangerous. Long term suppression or repression of emotions is the cause of most lifestyle ailments. During exam time, many students get addicted to tea, coffee or sleep deprivation medicines. Once addicted, one is addicted forever. All these drugs in the long run are injurious to the body. Tea, coffee, and drugs all increase heart rate and blood pressure. As a result, performance anxiety may result in poor or underperformance.

Answer the following questions.

1. Why is the examination system criticised?

2. How tea, coffee and drugs affect the performance of students?

3. Stress during the time of examination. Give a reason?

4. Mentioned the right way to evaluate the students.

5. Complete the sentence

The examination time is also the time of -----according to the article.

6. Find the word from the passage which means the same as:

(a) analysed (para 1)

(b) sufficient (para 2)

(c) cramming (para 2)

Section B

(1*20=20)

Q2. Change the following sentence into passive voice.

i) They answered all the questions.

ii) I will never open this container again.

iii) My mother is telling a story.

Q3. Comparative sentences using the correct form from the bracket.

iv) Tom and Jerry ---- my favorite cartoon show(is/are)

v) I have a pair of a black -----(shoe/shoes)

vi) I have —two hundred rupees note.(a/are)

Q4. Put the words in the correct order to form sentences.

vii) quietly/ sat /David /corner /in /a.

- viii) child /soundly /slept /the.
ix) leave/ will/Mumbai/ for/we /tomorrow.

Q5. Complete the following sentences by filling the blank suitable adverb formed from the adjective given in the bracket.

- x) The----- (fast) we drive, the -----(soon)we will reach our destination.

Q6. Choose the correct preposition to complete the following sentences.

- xi) The troops were moving----- (to/toward)the border.
xii) -----(After/ until)my exam I am going to visit my grandmother.
xiii) There is a wolf-----the sheep. (among /between)

Q7. Do as direct.

- xiv) **Synonym**-.Enormous.-----
xv) **Antonym**-Generous.-----

Q8. Rewrite each of the simple sentences as one sentence using the conjunction given in the brackets.

- xvi.) He was not prepared for the exam. He wrote the answer. (although)
xvii) He is disciplined.He is dedicated.(and)
xviii) This dress is beautiful.This dress is expensive. (but)

Q9. Rewrite the following sentences in indirect speech.

- xix) He said,"The train is coming".
xx) The teacher said, " The sun sets in the west."

Q10. Write a short diary entry describing an adventurous/thrilling experience you had recently. **(1*5=5)**

OR

Recently you took part in a story writing competition organized in your school on the occasion of Children's Day and won the first prize for your entry. Write a short diary entry describing your feelings on winning the prize.

Q11. You have faced/ witnessed an act of bullying in your school. Write a letter to the principal of your school reporting the incident. **(1*7=7)**

- Hint. 1. Introduce yourself and state the purpose of writing.
2. Describe the incident briefly and how it has affected you /the victim.
3. Say what action you would like the principal to take against the culprit.

OR

Write a letter to the Principal of your school expressing your interest in joining the NCC wing of your school. Hints

*introduce yourself and express your interest in joining the NCC junior wing of your school

*say what wing of NCC you would like to join -Air Wing, Army Wing or Navy Wing.

*say that you have got your parents' permission to join it.

Q 12. Write a story with the help of a given outline.

An old farmer several acres of land. worried about idle son..... all advice proves in vain ..farmer falls seriously ill calls tells a secret a hidden treasure fields. no treasure a good crop farmer dies sons sons dig the a family friend advises them to sow seeds. sons learn the value of hard work Moral. **(1*7=7)**

OR

Write a short story with the help of the following outline:

A French soldier walking through a street of Paris... .. saw a man selling caged parrots... .. approached him... .. bought all... .. opening the cage, set them free... .. someone asked him to explain this foolish... .. the soldier replied... .. once he was a prisoner of war... .. he knew the pain of being a prisoner.

Section C

Q13. Write the meaning of the following words. Do any 7

(1*7=7)

1. Accord
2. Casually
3. Chuleave
4. Adorned
5. Implications
6. Scruffy
7. Extracted
8. Chatter

Q14. Answer the following question. Do any 5

(2*5=10)

1. Why does the poet say, 'may his tribe increase'?
2. Why does the speaker say, 'I held the trunk with both my hands'?
3. Why was he happy he had taken down the raisins?
4. How did Gryphon introduce Alice to the Mock Turtle?
5. What did the new guard know about Dashu?
6. Discuss if the story suggest that it is fate that had really played a prank on Vijay.

Q15. Value Based Question. Do any 1.

(1*3=3)

1. What would you do if you were in place of jagabandhu.
2. What message did you get from the poem Abu Ben Adhem?

Q16. Do as directe.

(0.5*10=5)

1. Choose the correct word to complete the sentence.

- i) I can't speak properly today. My voice is quite -----(hoarse/horse).
- ii) She could not come -----(fourth/forth)with a proper reason for her answers.

2. Tick the correct form of the verb to complete each of these sentences

- iii) The police (is trying /are trying)to get information about the criminal.
- iv) Your blue trousers (are torn/ is torn)from the ankle.

3. Put a cross against the incorrect collocations.

- v) break
 - a) someone's heart
 - b) the news
 - c) someone's mind
- vi) keep
 - a) the time
 - b) the appointment
 - c) one's word
- vii) pay
 - i) a trip
 - ii) a visit
 - iii) respect

4. Use the clues. Make complete conditional sentences.

vi) Rohit/always/bring/flowers/he/
come/to visit us

vii) the car/not start/we/take taxi

5. Complete the sentences. Use phrasal verbs with catch and change it according to the tense of the sentences:

catch at, catch up, catch out, catch on

viii) He--- her arm as she tried to move away.

ix) He spoke very softly. Later, I ----- to what it was that the man was saying.

x) sports drinks have----- on as buyers have become more health-conscious.



Bhagwan Mahaveer Public Sen. Sec. School, Banga
Class: VIth JS & FS (2022-23)
Sample Paper (Science)
(Section- A)

M:M 80

(8×1= 8)

MCQ's :

- The _____ develops into fruit.
a. Ovary b. Petiole c. Stem d. Internode
- Which of these is not an irreversible change?
a. Rusting of iron b. Burning of Paper c. Melting of ice cream d. Ripening of fruits
- Which among these does not have bones.
a. Earthworm b. Dog c. Snake d. Human
- A satellite is travelling around the Earth. The motion of the satellite is____.
a. Periodic b. Non- periodic c. Rectilinear d. Random
- _____ is a small coiled wire that glows in an electric bulb.
a. Conductor b. Filament c. Switch d. Circuit
- Which of these gases is required by plants to make food?
a. Methane b. Nitrogen c. Oxygen d. Carbon dioxide
- Which of these cannot be converted into manure?
a. Dry leaves b. Cut vegetables c. Fruit peels d. Styrofoam cups
- _____ is a luminous object.
a. Eraser b. Pen c. Sun d. Air

Fill in the blanks:

- We should carry _____ bags while going to market.
- _____ can we converted into a park.
- When smoke mixes with fog, it causes_____.
- Plastic and rubber are both example of_____.
- The Movement in a e is called _____.
- _____ Is the largest bone of the body.
- _____ Of iron is a chemical change.
- Tearing of paper is a _____ change.

True/False

(4×1=4)

1. Rusting of iron is a chemical change.
2. All gases in the air help in burning.
3. It is very easy to dispose plastic waste.
4. Two cells are connected end-to- end make a battery.

(Section-B)

Each question carry 1 marks:

(10×1=10)

1. A device that converts chemical energy into electrical energy.
2. Materials that do not allow current to flow through them.
3. Name two natural sources of light.
4. Give one use of ozone gas.
5. Name the motion of the wheel of a Bullock cart.
6. Name the motion of a Cockroach.
7. What is joint.
8. How many pairs of legs does a cockroach have?
9. What are sepals?
10. Write an important function of the root .

(Section- C)

Attempt the questions each questions carry 2 marks.

(8×2=16)

1. Write any one function of pedicle and anther?
Or
What are the difference between fibrous root and tap roots?
2. Name the 3 bones seen in Hind limb.
Or
How many bones present in ribs. Explain in detail.
3. What is the rotational motion. Give one example.
4. What are the difference between open and closed circuit?
5. What is an image? How is it formed ?
6. What are the necessary conditions for the formation of a shadow?

7. How do aquatic animals breathe?

8. What are the cause of Ozone depletion.

(Section-D)

Attempt any 6 question each question carry 3 marks:

(6×3=18)

1. Write any three effects of air pollution.

Or

Explain the different types of venation in leaves.

2. Draw and define a light ray and light beam .

3. What are the difference between conductor and insulator?

4. What are periodic motions. Give 2 examples.

5. List the functions of the skeleton.

6. What are the different parts of leaf . Explain with diagram.

7. What are the difference between apical and axillary bud?

(Section-E)

Attempt any 4 questions-

1. Explain the structure of a flower with the help of well labeled diagram.

Or

Draw and explain female part of the flower.

2. List the different types of motion with one example of each.

3. What is air Pollution? Explain in detail.

4. Describe the structure of an electrical bulb.

5. What is acid rain? write a short note on its formation with help of diagram.

6th , (Fateh Singh) 2022

Social Science.

Sample Paper 2nd Term

M.M 80

(1) Tick the \checkmark Correct Option

1 x 7 = 7

1. Vendors operate From. --

(A) Office (B) Pavements (C) Factories

*I General and owning pattern of a Large former is :-

(A) 100 – 150 Acres (B) 20 Acres and above (C) 15 -20 Acres .

*!!! When was Hindu Succession Amendment Act passed ?

(A) 2000 (B) 2003 (C) 2005

*!v The River Yangtze Flow in –

(A) China (B) Australia (C) Japan.

*V Mahogany , Ebony and Rosewood are found in :---

(A) Evergreen Forests (B) Mountains Forests (C) Deciduous Forests

*VI Modern Name of Pataliputra is :-

(A) Patna (B) Gujarat (C) Punjab

* Vii. The Purans were Written in :---

(A) Pali (B) Prakrit (C) Sanskrit

(2). Write True and False :

1 x 7 = 7

* ! The Iron Pillar Weighs Over Three Tonnes.

[]

!! Kalidasa is known for his Plays []

lii. Appar was a Devotee of Vishnu []

Iv. Tsunami Struck the Indian Coast in 2005. []

*V. The Appalachians are very young fold Mountains []

*Vi. Patwari is also Called a village officer . []

* V!! People of Kalpattu earn their Living by Fishing .

[]

(3). Fill in the blanks :

1 x 7 = 7

, * Sanskrit *. Ganga * Showroom * *Fold*

*Property * * Sarnath* , * Paddy *

- * I **Wheat** is the main crop that is grown in irrigated Lands
- *ii. Harpreet and Vandana opened a **school**
- *lii People who own homes have to Pay a **Property** Tax
- *Iv **Panini** Prepared grammar for **Sanskrit**
- * V The Ashokan Pillar having the Lion Capital was Found at **Bombay**
- *Vi. The Himalayas and the Alps are Examples of **Young** Mountains
- *V!! The world's largest delta is formed by the rivers. **Ganges** and Brahmaputra.


(4). Match, the following. :-

1 × 7 = 7

- (1) * largest state (A) Goa
- (2) * smallest state (B). Sunderbans
- (3). * Mangrove. (C) Rajasthan
- (4) Iron Pillar (D) Chinese Pilgrim
- (5) *Fa - Xian (E) Delhi
- (6) *Fishing (D) Chandigarh
- (7) * Cleanes City (F) Coastal areas

(5). Very short answer type questions.:-

1 × 7 = 7

- * ! Who makes and passes the Budget of a Municipal Corporation ? .
- *!! Name the three level of Panchayati Raj ?
- *!!! How did Ashoka Convey his message through inscriptions ?
- *!V. What are Upanishads ?
- *V. Name the four major Domains of the Earth
- Vi. Identify the given  picture and name them



*vii. What are Glaciers ?

(6) Short answer type.. (Do any 8 Questions)

2× 8 = 16

*! How are plateaus useful to man ?

*!i What is a Delta ? Name the Delta formed by the Ganga and Brahmaputra river .

*!i! Describe the mangrove Forests .

*!V Who were the Samantas ?

*V. Who are pilgrims ?

*Vi. Who appoints the Commissioner and the administrative Staff ? What is their chief. Functions ?

*vii. What is the importance of Panchayati Raj in India ?

*viii. What does the Hindu Succession Amendment Act , 2005 State .

*Ix. Why has our Country been divided into districts ?

(7) Long Answer type questions (Do any 6 Questions

3 x.6 = 18

*! Mention the characteristics of different seasons in India ?

* !! Write a short note on landforms and the people.

*!!! Describe the work of a Gram Panchayat .

*Iv. What will you do if the chor views to registered and FIR ?

*V Describe the functions of a Municipal Corporation .

*Vi. Why do you think Agricultural Labourers are forced to accept low wages?

*vii. Differentiate between the teaching of Buddha and Mahavira.

*viii What were the Welfare measure taken by Ashoka ?

8. Put a cross marks. (X) against it.

1×3. =3

*! (A) Supervise work of Patwari

(B) Hears Charges against Criminals

(C). Hears and decides Land disputes

*!! A. Surat Attack by Plague in 1998

B Plague spread through the air

C Surat was one of the dirties cities of India

*!ii. We mostly find fishing settlements :--

A. In and around costal areas


B. Near big rivers

C. Near local markets

* 9. Picture Based Question (1x=3 =3)

*! Identify the Picture and them



* !! Label the Layer of above Vegetation 

* !!! Which is Represented by Given   Picture.



***10 On the given map of India Fill the Following 1x5=5**

1. Name the Places Where Ashoka ,s inscriptions were found. (Any Two)

2 Indian Ocean

3. Sarnath

4. Lumbini or Ujjain

5 Nalanda or Pataliputra



Bhagwan Mahaveer Public Sr Sec School Banga

Class – 6th Hindi

Model Test Paper

Time Allowed: 3 hour

Maximum Marks: 80

1-दिए गए अपठित गद्यांश को पढ़कर पूछे गए प्रश्नों के उत्तर दीजिए।

(6)

संतुलित आहार का सेवन स्वास्थ्य को बनाए रखने में महत्वपूर्ण भूमिका अदा करता है फलियां , नट्स और बीज पाचन क्रिया में सुधार के लिए आवश्यक होते हैं ।लोहा प्रतिरोधक क्षमता को बनाए रखने में सहायक होता है विटामिन बी 12 नई कोशिकाओं को बनाता है यह मीट चिकन मछली सी-फूड अंडा और दूध व उससे बने पदार्थों उत्पादकों को खाने में मिलता है वसा का उत्पादन शरीर के अंदर नहीं होता इसलिए इसे भोजन के माध्यम से लेना पड़ता है यह जोड़ों को चिकना बनाती है दिमाग के विकास, खून का थक्का बनाने में मदद करती है वसा के अतिरिक्त प्रोटीन, कार्बोहाइड्रेट, हाइड्रेट्स, मिनरल ,विजल और फाइबर भी होते हैं उससे अच्छे पोषक के बिना आपके शरीर में बीमारी ,संक्रमण थकान की संभावना ज्यादा होती है असंतुलित भोजन बच्चों के विकास संबंधी समस्याओं और खराब अकादमिक प्रदर्शन का कारण होता है जबकि संतुलित भोजन शरीर को ऊर्जा प्रदान करता है वजन नियंत्रित रखता है इस समय ध्यान प्राप्त करने की इच्छा के कारण बेचैनी से भूख नहीं लगती लेकिन भोजन ना करने से कमजोरी महसूस होती है। समय रहते बच्चों को जंक फूड से बचाना चाहिए।

क- हम वसा की पूर्ति किस प्रकार करते हैं यह हमारे लिए क्यों आवश्यक है?

ख- असंतुलित भोजन से कौन-कौन सी समस्याएं उत्पन्न होती है?

ग- परीक्षा के समय विद्यार्थी को किन बातों का ध्यान रखना चाहिए?

घ- संतुलित आहार का क्या महत्व है?

ङ- शरीर में प्रतिरोधक क्षमता को बनाए रखने में क्या सहायक होता है?

च- नई कोशिकाओं को कौन बनाता है?

2- निम्नलिखित शब्दों के अर्थ लिखिए: ।

(10×0.5=5)

विसारी दे , साईं, दिलचस्प, अत्याचार, कंगाली , कल्पना, भूमिका, क्रेविंग, अदब, भूशायी, विध्वंस

3- निम्नलिखित प्रश्नों के संक्षेप में उत्तर दें:।

(4)

क- पिस्तौल देखकर रोटी वाले का क्या हाल हुआ?

ख- विदेशी वस्त्रों का व वस्तुओं का बहिष्कार क्यों किया गया?

ग- बहुत देर पेट खाली होने पर क्या होता है?

घ- ताजमहल की छत के टपकने का क्या कारण था?

4-निम्नलिखित प्रश्नों के उत्तर विस्तार से लिखें।

(2×4=8)

क- कृष्ण ने दुर्योधन के सामने क्या प्रस्ताव रखा?

ख- वृक्षों के संरक्षण के लिए आप क्या कर सकते हैं?

ग- "मुकदमा हवा- पानी "पाठ के माध्यम से बताइए कि किस-किस के विरुद्ध क्या मुकदमा चलाया गया?

घ- आपके माता-पिता आपको किन किन बातों से सावधान होने की सीख देते हैं। सूची बनाइए?

डं- घरों में बंद महिलाएं किसी से क्यों नहीं मिल पा रही थीं?

5-नीचे दिए गए शब्दों के इस प्रकार वाक्य बनाइए कि उनके अर्थ स्पष्ट हो जाए।

(5)

सौभाग्य, मशहूर, चिंतित, कोशिका, काठियावाड़ी, सुदर्शन

6-निम्नलिखित गद्यांश को पढ़कर पूछे गए प्रश्नों के उत्तर दीजिए।

(4)

संतुलित आहार का सेवन स्वास्थ्य को बनाए रखने में महत्वपूर्ण भूमिका अदा करता है। फलिया, नट्स और बीज पाचन क्रिया में सुधार के लिए आवश्यक होते हैं। लोग प्रतिरोधक क्षमता को बनाए रखने में सहायक होता है विटामिन b12 नई कोशिकाओं को बनाता है। यह मीट, चिकन, मछली सी-फूड, अंडा और दूध से बने उत्पाद को खाने से मिलता है। वर्षा का उत्पादन शरीर के अंदर नहीं होता। इसलिए इसे भोजन के माध्यम से लेना पड़ता है। यह जोड़ों को चिकना बनाती है। दिमाग के विकास, खून का थक्का बनाने में मदद करती है। वर्षा के अतिरिक्त प्रोटीन, कार्बोहाइड्रेट, मिनरल, बिजल और फाइबर भी होते हैं अच्छे पोषण के बिना आपके शरीर में बीमारी संक्रमण थकान की संभावना ज्यादा होती है। संतुलित भोजन बच्चों के विकास संबंधी समस्याएं और खराब अकादमिक प्रदर्शन का कारण होती है। जबकि संतुलित भोजन शरीर को ऊर्जा प्रदान करता है वजन नियंत्रित रखता है। इस समय उच्च धन प्राप्त करने की इच्छा के कारण बेचैनी से भूख नहीं लगती लेकिन भोजन न करने से कमजोरी महसूस होती है। समय रहते बच्चों को जंक फूड से बचाना चाहिए।

क- संतुलित आहार का क्या महत्व है?

ख- हम वसा का पूर्ति किस प्रकार करते हैं यह हमारे लिए क्यों आवश्यक है?

ग- असंतुलित भोजन से कौन-कौन सी समस्याएं उत्पन्न होती है?

घ- परीक्षा के सभी विद्यार्थी को किन बातों का ध्यान रखना चाहिए?

7- पाठ्य पुस्तक से संबंधी व्याकरण।

(2×5=10)

निर्देशानुसार उत्तर दीजिए। (कोई पांच भाग कीजिए)

1 विलोम शब्द लिखिए।

(I) सामान्य

(II) मीठा

2 दो -दो पर्यायवाची शब्द लिखिए।

(i) महिला

(ii) महात्मा

3 निम्नलिखित वाक्यों में क्रिया विशेषण को रेखांकित करें।

1-बहुत खा लिया, अब रुक जाओ।

2-जहरीली गैस मुझ पर सवार होकर दूर-दूर तक फैल गई।

4 नीचे दिए गए शब्दों के विपरीतार्थक शब्द लिखिए

भला, दुखी

5 उचित कारक चिन्हों से रिक्त स्थान भरिए।

शेन..... सलीमा आंटी..... पूरी घटना संक्षेप में बताइए।

स्त्री..... सम्मान समाज और देश की प्रगति का सूचक है।

6 नीचे दिए गए शब्दों के लिए एक शब्द लिखें।

कपड़ा बुनने वाला.....,। आंदोलन करने वाला.....

8- व्यावहारिक व्याकरण।

निर्देशानुसार उत्तर दीजिए। (कोई 6 भाग करो)।

(2×6=12)

क- निम्नलिखित शब्दों का संधि विच्छेद कीजिए।

1) वार्तालाप (11) महाशय

ख- दिए गए शब्दों में से प्रत्यय अलग करके लिखिए।

(1)रुकावट। (11)पढ़ाई

ग- निम्नलिखित सर्वनाम संबंधी अशुद्धियों को दूर कर वाक्य पुनः लिखिए।

1-यह मेरी पेंसिल है उसे तुमने छिपाया था।

2-कौन का घर पास में है ?

घ- दिए गए शब्दों से विशेषणो का निर्माण कीजिए।

1) शिक्षा (11) मास

ङ- नीचे दिए गए वाक्यों की अशुद्धियों को शुद्ध करके लिखिए

1-वह ईमानदार व्यक्ति है।

2-मुझे खेद है कि तुम्हारे चोट लगी।

ञ- निम्नलिखित वाक्य में वर्तमान काल में बदलिए

1-मेरी सारी पुस्तकें शाम तक पहुंच जाएगी।

2-हम गली में क्रिकेट खेल रहे थे।

च- दिए गए वाक्यों में कौन सी क्रिया सकर्मक है और कौन सी अकर्मक?

1-आशिमा सैंडविच खा रही है.....

2-बिजली चमकती है।.....

9- निम्नलिखित लोकोक्तियां का अर्थ लिखकर वाक्य प्रयोग करिए।

(2×3=6)

1-अंत भले का भला, एक पंथ दो काज, अंधों में काना राजा, न रहे बांस ना बजेगी बांसुरी काला अक्षर भैंस बराबर।

10- रचनात्मक लेखन

1- बिजली कटौती से उत्पन्न संकट की ओर ध्यान दिलाते हुए संबंधित अधिकारियों को पत्र लिखिए।

(5)

अथवा

कक्षा के खराब पंखों को ठीक करवाने के लिए प्रधानाचार्य को एक पत्र लिखें।

2- विद्यालय में होने वाले क्रिकेट मैच के बारे में दो सहपाठियों के मध्य संवाद लेखन 100 शब्दों में लिखें।

(5)

3- आपकी वार्षिक परीक्षाएं आने वाली हैं अपनी मनः स्थिति का वर्णन करते हुए डायरी लिखिए।

(5)

4- दिए गए किसी एक विषय पर अनुच्छेद लेखन लिखिए ।

(5)

मेले का दृश्य

संकेतबिंदु ,

मेलों का महत्व ,

मेलो का वर्णन ,

मेलो का लाभ ,

जल ही जीवन है

उक्ति का अर्थ,

जल का महत्व,

जल व्यर्थ करने के दुष्परिणाम,

जलका सदुपयोग करने के लाभ

8. Variable means that it [1]

- a) can take different values b) has a fixed value
c) can take only three values d) can take only 2 values

9. If the radius of a circle is 8.5 cm, then the diameter of the circle is _____. [1]

- a) 18 cm b) 17 cm
c) 12 cm d) 8.5 cm

10. If the radius of a circle is 7 cm, then the diameter of the circle is _____. [1]

- a) 4.5 cm b) 14 cm
c) 10 cm d) 3.5 cm

Section B [2]

11. Match the following according to opposite sentence.

(a) Increase in population	(i) Going South
(b) Earning money	(ii) 15
(c) Going North	(iii) Spending money
(d) -15	(iv) Decrease in population

12. Match the following :

Column 1	Column 2	[2]
(a) The value of $35 - (20)$	(i) -33	
(b) The value of $(-15) - (-18)$	(ii) -18	
(c) The value of $72 - (90)$	(iii) 3	
(d) The value of $(-20) - (13)$	(iv) 15	

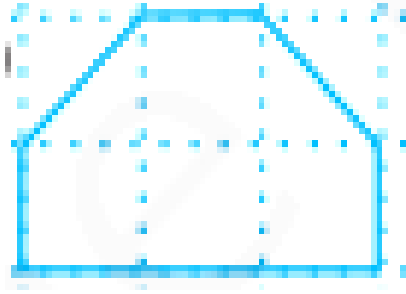
13. Rewrite the fractions in the simplest form

a. $\frac{8}{6}$ [2]

b. $\frac{44}{72}$

14. Replace \square by the correct number : $\frac{2}{7} = \frac{8}{\square}$ [2]

15. Find the area of the figure by counting squares: [2]



16. Identify the operations (addition, subtraction, division, multiplication) in forming the expression and tell how the expression have been formed. [2]

$$2y + 17, 2y - 17$$

17. Pick out the solution from the values given in the bracket in an equation. [2]

Show that the other values do not satisfy the equation: $5m = 60(10,5,12,15)$

18. Draw a circle of radius 2cm, with centre O and mark points P, Q, R such that 'P' is on the circle, 'Q' is interior of the circle and 'R' is exterior of the circle. [2]

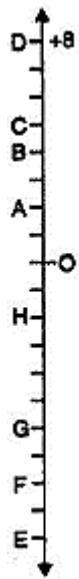
OR

Draw line segment \overline{AB} of any length. Without measuring \overline{AB} , construct a copy of \overline{AB} and name it as \overline{PQ} .

Section C

19. A submarine which is 60 m below the sea level fires a rocket. If the rocket travels a vertical distance of 200m, how far above the sea level does the rocket go? [3]

20. Adjacent figure is a vertical number line, representing integers, Observe it and locate the following points : [3]



- If point D is + 8, then which point is -8?
- Is point G a negative integer or a positive integer?
- Write integers for points B and E.
- Which point marked on this number line has the least value?

OR

Subtract the sum of - 5020 and 2320 from - 709.

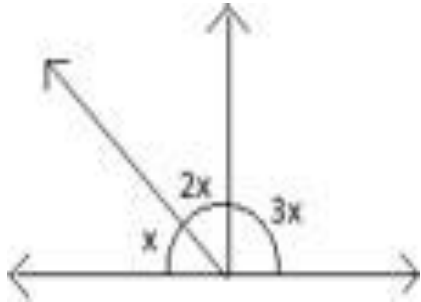
21. Express $\frac{5}{3} + \frac{3}{2} + \frac{7}{3} + 3$ in standard form. [3]

22. Solve : $\frac{4}{5} + \frac{2}{3}$ [3]

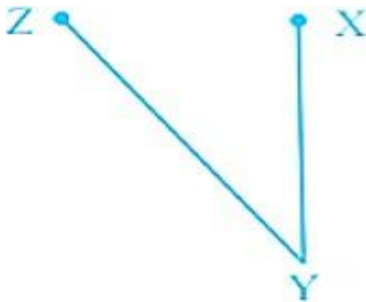
23. Find the perimeter of a rectangle whose length and breadth are 150 cm and 1 m respectively. [3]

24. Find the side of Pentagon whose Perimeter is 19.5m? [3]

25. From the figure given below, find the magnitude of each of the three angles formed. [3]



26. Bisect $\angle XYZ$ of the given Figure. [3]



Section D

27. Subtract $|-11| - (|-8| + |-5|)$ from $-9 + (|-31| - 26)$. [5]

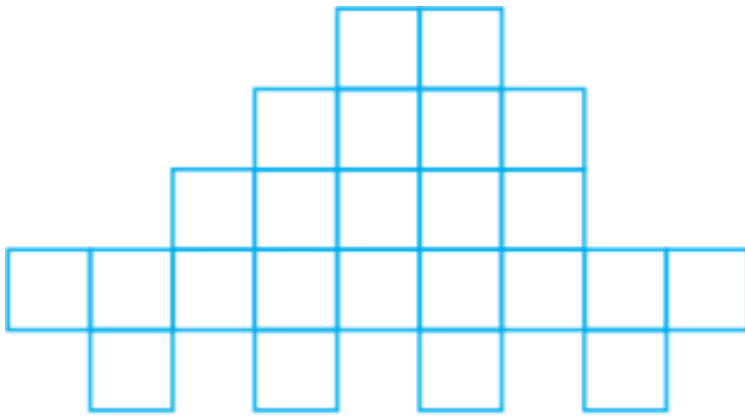
28. The sum of two fractional numbers is 8. If one of the number is $\frac{18}{5}$, find the other number. [5]

29. Subtract the first rational number from the second [5]

a. $\frac{3}{8}, \frac{5}{8}$

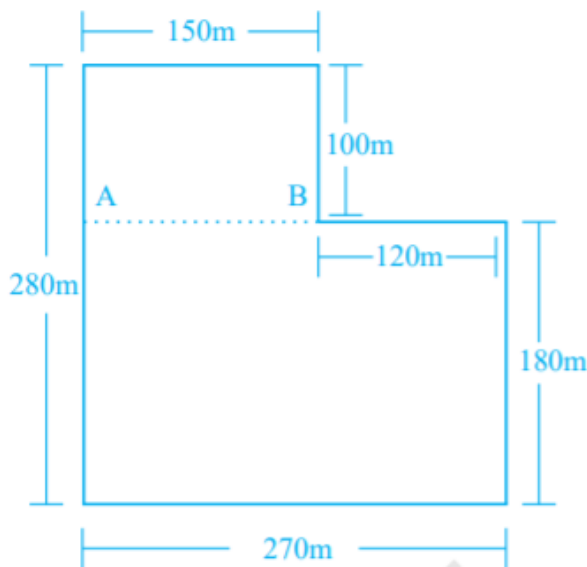
b. $\frac{8}{33}, \frac{7}{22}$

30. What is the area of each small square in the Fig. if the area of entire figure is 96 sqcm. Find the perimeter of the figure. [5]



OR

Divide the park shown in Fig. into two rectangles. Find the total area of this park. If one packet of fertilizer is used for 300 sq m, how many packets of fertilizer are required for the whole park?



[5]

31. Length and breadth of a bulletin board are r cm and t cm, respectively.
- What will be the length (in cm) of the aluminium strip required to frame the board, if 10cm extra strip is required to fix it properly.
 - If x nails are used to repair one board, how many nails will be required to repair 15 such boards?
 - If 500sqcm extra cloth per board is required to cover the edges, what will be the total area of the cloth required to cover 8 such boards?
 - What will be the expenditure for making 23 boards, if the carpenter charges ₹ x per board.
32. Draw an angle of measure 153° and divide it into four equal parts. [5]



Bhagwan Mahaveer Public Sr Sec School Banga

Sample Paper

ਕਲਾਸ:- ਛੇਵੀਂ

ਵਿਸ਼ਾ:- ਪੰਜਾਬੀ

ਸਮਾਂ:- ਤਿੰਨ ਘੰਟੇ

ਕੁੱਲ ਅੰਕ:- 80

ਆਮ ਨਿਰਦੇਸ਼

*ਹੇਠ ਲਿਖੇ ਨਿਰਦੇਸ਼ਾਂ ਨੂੰ ਧਿਆਨ ਨਾਲ ਪੜ੍ਹੋ ਅਤੇ ਉਹਨਾਂ ਦਾ ਪਾਲਣ ਕਰੋ:-

* ਸਾਰੇ ਪ੍ਰਸ਼ਨ ਲਾਜ਼ਮੀ ਹਨ।

*ਪ੍ਰਸ਼ਨਾਂ ਵਿੱਚ ਦਿੱਤੀ ਗਈ ਅੰਦਰੂਨੀ ਚੋਣ ਨੂੰ ਧਿਆਨ ਨਾਲ ਦੇਖ ਕੇ ਨਿਰਦੇਸ਼ਾਂ ਅਨੁਸਾਰ ਹੱਲ ਕੀਤਾ ਜਾਵੇ।

* ਲਿਖਾਈ ਸਾਫ ਅਤੇ ਸੁੱਧ ਲਿਖੀ ਜਾਵੇ।

* ਸਹੀ ਪ੍ਰਸ਼ਨ ਨੰਬਰ ਲਿਖ ਕੇ ਉੱਤਰਾਂ ਨੂੰ ਧਿਆਨ ਨਾਲ ਉੱਤਰ- ਸ਼ੀਟ 'ਤੇ ਲਿਖਿਆ ਜਾਵੇ।

1. ਹੇਠ ਲਿਖੇ ਅਣਡਿੱਠੇ ਪੈਰੇ ਨੂੰ ਧਿਆਨ ਨਾਲ ਪੜ੍ਹੋ ਅਤੇ ਪੁੱਛੇ ਗਏ ਪ੍ਰਸ਼ਨਾਂ ਦੇ ਉੱਤਰ ਲਿਖੋ:-

(1x 6=6)

ਪੰਜਾਬ ਭਾਰਤ ਦਾ ਇੱਕ ਸ਼ਕਤੀਸ਼ਾਲੀ ਅਤੇ ਮਹੱਤਵਪੂਰਨ ਪ੍ਰਾਂਤ ਹੈ। ਇਹ ਭਾਰਤ ਦੀ ਉੱਤਰੀ ਸਰਹੱਦ ਦਾ ਇਲਾਕਾ ਹੈ। ਪੰਜਾਬ ਤੋਂ ਭਾਵ ਹੈ - ਪੰਜ+ਆਬ ਭਾਵ ਪੰਜਾਂ ਦਰਿਆਵਾਂ ਦੀ ਧਰਤੀ। ਪੰਜਾਬ ਪ੍ਰਾਚੀਨ ਸਭਿਅਤਾ ਨਾਲ ਜੁੜਿਆ ਹੋਇਆ ਹੈ। ਸਿੰਧੂ ਘਾਟੀ ਦੀ ਸਭਿਅਤਾ ਇਸੇ ਵਿੱਚ ਉਪਜੀ ਹੈ। ਪੰਜਾਬੀ ਲੋਕ ਮਿਹਨਤੀ ਅਤੇ ਸਿਦਕੀ ਹਨ। ਭਾਰਤ ਨੂੰ ਅੰਗਰੇਜ਼ਾਂ ਦੇ ਪੰਜੇ ਤੋਂ ਛੁਡਾਉਣ ਲਈ ਪੰਜਾਬੀ ਗੱਭਰੂਆਂ ਦੀਆਂ ਕੁਰਬਾਨੀਆਂ ਕਦੇ ਨਹੀਂ ਭੁਲਾਈਆਂ ਜਾ ਸਕਦੀਆਂ। ਇੱਥੋਂ ਦੇ ਲਾਡਲੇ ਅਤੇ ਬਹਾਦਰ ਨੌਜਵਾਨ ਕਿਸੇ ਅੱਗੇ ਝੁੱਕਣਾ ਨਹੀਂ ਜਾਣਦੇ ਅਤੇ ਪਿਆਰ ਦੇ ਪੁਜਾਰੀ ਹਨ। ਪੰਜਾਬ ਦੇ ਲੋਕਾਂ ਦਾ ਮੁੱਖ ਕਿੱਤਾ ਖੇਤੀਬਾੜੀ ਹੈ। ਇਹ ਸਮੁੱਚੇ ਵਿਸ਼ਵ ਦਾ ਅੰਨ ਦਾਤਾ ਹੈ।

ਪ੍ਰਸ਼ਨ:-

i. ਪੰਜਾਬ ਕਿਸ ਦੇਸ਼ ਦਾ ਸ਼ਕਤੀਸ਼ਾਲੀ ਪ੍ਰਾਂਤ ਹੈ ?

ii. ਪੰਜਾਬ ਦਾ ਕੀ ਅਰਥ ਹੈ ?

iii. ਭਾਰਤ ਨੂੰ ਅੰਗਰੇਜ਼ਾਂ ਦੇ ਪੰਜੇ ਤੋਂ ਛੁਡਾਉਣ ਲਈ ਕਿਸ ਦੀਆਂ ਕੁਰਬਾਨੀਆਂ ਕਦੇ ਨਹੀਂ ਭੁਲਾਈਆਂ ਜਾ ਸਕਦੀਆਂ ?

iv. ਪੰਜਾਬੀ ਕਿਸ ਦੇ ਪੁਜਾਰੀ ਹਨ ?

v. ਪੰਜਾਬ ਦੇ ਲੋਕਾਂ ਦਾ ਮੁੱਖ ਕਿੱਤਾ ਕੀ ਹੈ ?

vi. ਵਿਸ਼ਵ ਦਾ ਅੰਨਦਾਤਾ ਕਿਸ ਨੂੰ ਕਿਹਾ ਗਿਆ ਹੈ ?

2. ਸਹੀ ਉੱਤਰ ਦੀ ਚੋਣ ਕਰੋ:-

(1x 5=5)

I. ਕੁੱਕੜ ਕਿੱਥੇ ਚੜ ਕੇ ਸੌਂ ਗਿਆ ?

i. ਰੁੱਖ ਦੀ ਟਾਹਣੀ ਉੱਤੇ

ii. ਰੁੱਖ ਦੇ ਹੇਠਾਂ

iii. ਜੰਗਲ ਵਿੱਚ

iv. ਜ਼ਮੀਨ ਉੱਤੇ

II. ਕਿਸ ਦੇ ਜਨਮ ਹੋਣ ਤੇ ਪਾਪੀਆਂ ਨੂੰ ਭਾਜੜਾਂ ਪਾਈਆਂ ?

i. ਸ੍ਰੀ ਗੁਰੂ ਅਰਜਨ ਦੇਵ ਜੀ ਦੇ

ii. ਸ੍ਰੀ ਗੁਰੂ ਨਾਨਕ ਦੇਵ ਜੀ

iii. ਸ੍ਰੀ ਗੁਰੂ ਗੋਬਿੰਦ ਸਿੰਘ ਜੀ ਦੇ

iv. ਸ੍ਰੀ ਗੁਰੂ ਅੰਗਦ ਦੇਵ ਜੀ ਦੇ

III. ਪਾਂਡਵਾਂ ਨੇ ਕਿਸ ਨੂੰ ਆਪਣਾ ਗੁਰੂ ਧਰਿਆ ਹੋਇਆ ਸੀ ?

- i. ਕੌਰਵਾਂ ਨੂੰ
ii. ਸ਼੍ਰੀ ਕ੍ਰਿਸ਼ਨ ਜੀ ਨੂੰ
iii. ਦਰੋਣਾਚਾਰੀਆ ਨੂੰ
iv. ਦਰੋਪਦਈ ਨੂੰ

IV. ਹਿੰਦ ਵਾਸੀਓ ਰੱਖਣਾ ਯਾਦ ਸਾਨੂੰ ਕਵਿਤਾ ਕਿਸ ਦੀ ਰਚਨਾ ਹੈ ?

- i. ਸ਼ਹੀਦ ਭਗਤ ਸਿੰਘ ਦੀ
ii. ਸ਼ਿਵ ਕੁਮਾਰ ਬਟਾਲਵੀ ਦੀ
iii. ਧਨੀ ਰਾਮ ਚਾਤ੍ਰਕ ਦੀ
iv. ਸ਼ਹੀਦ ਕਰਤਾਰ ਸਿੰਘ ਸਰਾਭਾ ਦੀ

V. ਮੈਰੀ ਕਿਉਰੀ ਦੇ ਬਚਪਨ ਦਾ ਨਾਮ ਕੀ ਸੀ?

- i. ਮੈਡਮ
ii. ਮਾਰਿਆ
iii. ਕਿਉਰੀ
iv. ਮੈਰੀ

3. ਹੇਠ ਲਿਖਿਆਂ ਪ੍ਰਸ਼ਨਾਂ ਦੇ ਉੱਤਰ ਇੱਕ ਸ਼ਬਦ ਜਾਂ ਇੱਕ ਵਾਕ ਵਿੱਚ ਲਿਖੋ:- (1x5=5)

- i. ਕੌਣ ਆਪਣੇ ਆਪ ਨੂੰ ਸਭ ਤੋਂ ਵੱਧ ਤਾਕਤਵਰ ਸਮਝ ਰਿਹਾ ਸੀ?
ii. ਕਿਸ ਨੇ ਸਾਧੂ ਦੀ ਠੱਗੀ ਦਾ ਭੇਤ ਖੋਲ੍ਹਿਆ?
iii. ਵਿਗਿਆਨ ਕਿੰਨਾ ਦੇ ਸ਼ਬਦਾਂ ਦੇ ਸੁਮੇਲ ਤੋਂ ਬਣਿਆ ਹੈ?
iv. ਕਰਤਾਰ ਸਿੰਘ ਸਰਾਭਾ ਦੇਸ਼ ਵਾਸੀਆਂ ਨੂੰ ਕਿਸ ਵਾਂਗ ਚਮਕਣ ਲਈ ਆਖਦਾ ਹੈ?
v. ਤੇਲ ਦਾ ਭਰਿਆ ਕੜਾਹਾ ਕਿੱਥੇ ਪਿਆ ਸੀ?

4. ਹੇਠ ਲਿਖਿਆਂ ਪ੍ਰਸ਼ਨਾਂ ਵਿੱਚੋਂ ਕਿਸੇ ਚਾਰ ਪ੍ਰਸ਼ਨਾਂ ਦੇ ਉੱਤਰ 25-30 ਸ਼ਬਦਾਂ ਵਿੱਚ ਲਿਖੋ:- (2x 4=8)

- i. ਕੌਣ ਮਿੱਠੀਆਂ ਮਿੱਠੀਆਂ ਗੱਲਾਂ ਕਰ ਰਿਹਾ ਸੀ ਅਤੇ ਕੁੱਕੜ ਨੇ ਉਸਦੀਆਂ ਮਿੱਠੀਆਂ ਮਿੱਠੀਆਂ ਗੱਲਾਂ ਸੁਣ ਕੇ ਕੀ ਕਿਹਾ
ii ਸ਼੍ਰੀ ਗੁਰੂ ਨਾਨਕ ਦੇਵ ਜੀ ਦੇ ਤੇਰਾਂ ਤੇਰਾਂ ਤੋਲਣ ਤੋਂ ਕੀ ਭਾਵ ਹੈ ?
iii. ਅਰਜੁਨ ਦੁਆਰਾ ਦਰੋਪਦੀ ਨੂੰ ਸਵੰਬਰ ਵਿੱਚੋਂ ਜਿੱਤਣ ਦੀ ਘਟਨਾ ਨੂੰ ਆਪਣੇ ਸ਼ਬਦਾਂ ਵਿੱਚ ਲਿਖੋ ?
iv. ਹਿੰਦ ਵਾਸੀਆਂ ਨੂੰ ਅੰਤਮ ਸੰਦੇਸ਼ ਕਵਿਤਾ ਦਾ ਵਿਸ਼ਾ ਵਸਤੂ ਲਿਖੋ।
v. ਅਕਬਰ ਨੂੰ ਬੀਰਬਲ ਨੇ ਦੂਜਾ ਸਵਾਲ ਕੀ ਕੀਤਾ?

5. ਖਾਲੀ ਥਾਵਾਂ ਭਰੋ:- (1x4=4)

- i. ਰੁੱਖ ਦੇ _____ ਨੂੰ ਵਧੀ ਲੁੰਬੜੀ, ਲਾਲਚ ਸੂਰਤ ਗੁਆਈ।
ii. ਅੰਤਮ ਸਮੇਂ ਬਾਬਾ ਨਾਨਕ ਸ਼੍ਰੀ _____ ਵਿਖੇ ਆਏ।
iii. ਤੇਲ ਦੇ ਭਰੇ ਕੜਾਹੇ ਵਿੱਚੋਂ ਦੇਖ ਕੇ ਅਰਜੁਨ ਨੇ ਘੁੰਮਦੀ _____ ਦੀ ਅੱਖ ਦਾ ਨਿਸ਼ਾਨਾ ਲਾਇਆ।
iv. ਮੈਰੀ ਕਿਉਰੀ _____ ਵਿੱਚ ਡਾਕਟਰੇਟ ਦੀ ਡਿਗਰੀ ਹਾਸਲ ਕਰਨ ਵਾਲੀ ਪਹਿਲੀ ਇਸਤਰੀ ਬਣੀ।

6. ਹੇਠ ਲਿਖੇ ਸ਼ਬਦਾਂ ਵਿੱਚੋਂ ਕਿਸੇ ਪੰਜ ਨੂੰ ਵਾਕਾਂ ਵਿੱਚ ਇਸ ਤਰ੍ਹਾਂ ਵਰਤੋਂ ਕੇ ਇਹਨਾਂ ਦੇ ਅਰਥ ਸਪਸ਼ਟ ਹੋ ਜਾਣ:- (1x5=5)

ਠੱਗ, ਅਵਤਾਰ, ਵਾਤਾਵਰਨ, ਇਕਾਗਰਤਾ, ਦੇਸ਼ ਭਗਤੀ, ਵਿਗਿਆਨ, ਪ੍ਰਬੰਧ

7. ਪਾਠ ਪੁਸ਼ਤਕ ਵਿਚਲਾ ਵਿਆਕਰਨ:-

I. ਹੇਠ ਲਿਖੇ ਬਹੁਤੇ ਸ਼ਬਦਾਂ ਲਈ ਇੱਕ ਸ਼ਬਦ ਲਿਖੋ:- (1x3=3)

- i. ਜੇ ਵਿਅਕਤੀ ਠੱਗੀ ਕਰਦਾ ਹੈ -
ii. ਲੁੱਕ ਅਤੇ ਬਜ਼ਰੀ ਨਾਲ ਬਣਿਆ ਹੋਇਆ ਰਸਤਾ -

iii. ਜੋ ਦੇਸ਼ ਨਾਲ ਗੱਦਾਰੀ ਕਰੇ -

II. ਹੇਠ ਲਿਖੇ ਸ਼ਬਦਾਂ ਦੇ ਦੋ ਦੋ ਸਮਾਨਾਰਥਕ ਸ਼ਬਦ ਲਿਖੋ:- (1x2=2)

i. ਦੁਨੀਆ ii . ਪਰਮਾਤਮਾ

III. ਹੇਠ ਲਿਖੇ ਅਸ਼ੁੱਧ ਸ਼ਬਦਾਂ ਨੂੰ ਸ਼ੁੱਧ ਕਰ ਕੇ ਲਿਖੋ:- (1x3=3)

i. ਹਿਦ:- ii. ਦਾਖ:- iii. ਫਾਨਸੀ

IV. ਹੇਠ ਲਿਖੇ ਸ਼ਬਦਾਂਸ਼ ਵਰਤ ਕੇ ਦੋ ਦੋ ਅਗੇਤਰ ਬਣਾਓ :- (1x2=2)

i. ਪਰ:- ii. ਬੇ:-

V. ਹੇਠ ਲਿਖੇ ਮੁਹਾਵਰਿਆਂ ਦੇ ਅਰਥ ਲਿਖੋ:- (1x2=2)

i. ਉੱਲੂ ਬਣਾਉਣਾ

ii ਸਾਹ ਸੁੱਕ ਜਾਣਾ

8. ਵਿਵਹਾਰਿਕ ਵਿਆਕਰਨ:-

I. ਹੇਠ ਲਿਖੇ ਵਾਕਾਂ ਵਿੱਚੋਂ ਪੜਨਾਂਵ ਸ਼ਬਦ ਚੁਣੋ: - (1x2=2)

i. ਅਸੀਂ ਖੇਡ ਰਹੇ ਹਾਂ।

ii. ਤੁਸੀਂ ਕੱਲ੍ਹ ਸਕੂਲ ਕਿਉਂ ਨਹੀਂ ਆਏ?

II. ਗੁਣ ਵਾਚਕ ਵਿਸ਼ੇਸ਼ਣ ਦੀ ਪਰਿਭਾਸ਼ਾ ਉਦਾਹਰਣ ਸਹਿਤ ਲਿਖੋ। (2)

III. ਹੇਠ ਲਿਖੇ ਵਾਕਾਂ ਵਿੱਚਲੇ ਮੋਟੇ ਸ਼ਬਦਾਂ ਦੇ ਵਿਰੋਧੀ ਸ਼ਬਦ ਬਦਲ ਕੇ ਵਾਕ ਦੁਬਾਰਾ ਲਿਖੋ:- (1x2=2)

i. ਦੀਪਕ *ਸ਼ਾਕਾਹਾਰੀ* ਭੋਜਨ ਖਾਂਦਾ ਹੈ।

ii. ਇਸ ਦੁਕਾਨਦਾਰ ਦੀ *ਆਮਦਨ* ਬਹੁਤ ਘੱਟ ਹੈ।

IV. ਹੇਠ ਲਿਖੇ ਵਾਕਾਂ ਨੂੰ ਸ਼ੁੱਧ ਕਰਕੇ ਲਿਖੋ:- (1x2=2)

i. ਵੱਗਦਾ ਹੈ ਦਰਿਆ ਵਿੱਚ ਦੇ ਪਹਾੜ।

ii. ਭਾਸ਼ਾ ਸਾਰੇ ਪੰਜਾਬੀ ਵਿਰੋਧੀ ਵਿੱਚ ਹਨ ਸ਼ਬਦ ਬਹੁਤ।

V. ਹੇਠ ਲਿਖੇ ਸ਼ਬਦਾਂ ਦੇ ਦੋ ਦੋ ਸਮਾਨਾਰਥਕ ਸ਼ਬਦ ਲਿਖੋ:- (1x2=2)

i. ਭੂਮੀ:-

ii. ਇਨਸਾਨ:-

VI. ਹੇਠ ਲਿਖੇ ਵਾਕਾਂ ਵਿੱਚ ਕਾਲ ਦੀ ਕਿਸਮ ਲਿਖੋ:- (1x2=2)

i. ਸਾਡੇ ਘਰ ਮਹਿਮਾਨ ਆਉਣਗੇ।

ii. ਪੰਛੀ ਉੱਚੇ ਅਸਮਾਨ ਵਿੱਚ ਉਡਾਰੀਆਂ ਲਗਾ ਰਹੇ ਸਨ।

9. ਵਾਤਾਵਰਨ ਦੀ ਸਾਂਭ ਸੰਭਾਲ ਵਿਸ਼ੇ ਸਬੰਧੀ ਕੋਈ ਪੰਜ ਨਾਅਰੇ ਲਿਖੋ।

ਜਾਂ

ਹੇਠ ਲਿਖੇ ਚਿੱਤਰ ਨੂੰ ਧਿਆਨ ਨਾਲ ਦੇਖੋ ਅਤੇ 50-60 ਸ਼ਬਦਾਂ ਵਿੱਚ ਚਿੱਤਰ ਵਰਣਨ ਕਰੋ:- (5)



10. ਤੁਹਾਡੇ ਇਲਾਕੇ ਵਿੱਚ ਇੱਕ ਨਵਾਂ ਕਪੜੇ ਦਾ ਸਟੋਰ ਖੁੱਲ੍ਹਿਆ ਹੈ। ਇਸ ਦੀ ਮਸ਼ਹੂਰੀ ਲਈ ਇੱਕ ਅਕਰਸ਼ਕ ਇਸ਼ਤਿਹਾਰ ਤਿਆਰ ਕਰੋ। (5)

11. ਇੱਕ ਪੱਤਰ ਲਿਖ ਕੇ ਆਪਣੇ ਮਿੱਤਰ/ ਸਹੇਲੀ ਨੂੰ ਆਪਣੀ ਛੋਟੀ ਭੈਣ ਦੇ ਜਨਮਦਿਨ ਤੇ ਆਉਣ ਦਾ ਸੱਦਾ ਦਿਓ। (7)

ਜਾਂ

ਤੁਹਾਡੇ ਪਿਤਾ ਜੀ ਵਿਦੇਸ਼ ਵਿੱਚ ਰਹਿੰਦੇ ਹਨ। ਇੱਕ ਪੱਤਰ ਲਿਖ ਕੇ ਉਨ੍ਹਾਂ ਨੂੰ ਚਾਰ ਸਹਿਬਜ਼ਾਦਿਆਂ ਦੇ ਸ਼ਹੀਦੀ ਦਿਨਾਂ ਸਬੰਧੀ ਤੁਹਾਡੇ ਸਕੂਲ ਵਿੱਚ ਮਨਾਏ ਗਏ ਵੀਰ ਬਾਲ ਦਿਵਸ ਬਾਰੇ ਦੱਸੋ।

12. ਹੇਠ ਲਿਖਿਆਂ ਵਿੱਚੋਂ ਕਿਸੇ ਇੱਕ ਵਿਸ਼ੇ ਉੱਤੇ ਲੇਖ ਰਚਨਾ ਕਰੋ:- (6)

ਸ਼੍ਰੀ ਗੁਰੂ ਗੋਬਿੰਦ ਸਿੰਘ ਜੀ

ਜਾਂ

ਫਲਾਇੰਗ ਸਿੱਖ ਮਿਲਖਾ ਸਿੰਘ